

[www.kcsepdf.co.ke](http://www.kcsepdf.co.ke)

# **DIGITAL EXAM**

## **CLASS 8**

**SERIES 004**

[www.kcsepdf.co.ke](http://www.kcsepdf.co.ke)



"The concept of excellence"

DPIS-93012001309

# THE DIGITAL PROVE NATIONAL K.C.P.E SPECIAL PREDICTION 4 ENGLISH

THE NEW LIGHT

SECTION A. LANGUAGE

Time : 1 hour 40 minutes

READ THESE INSTRUCTIONS CAREFULLY. (Instructions to Pupils).

1. You have been given this question booklet and a separate answer sheet. The question booklet contains 50 questions
2. Do any necessary rough work in this booklet
3. When you have chosen your answer, mark it on the ANSWER SHEET, not in this question booklet

### HOW TO USE THE ANSWER SHEET

4. Use only an ordinary pencil
5. Make sure that you have written on the answer sheet  
YOUR INDEX NUMBER  
YOUR NAME  
NAME OF YOUR SCHOOL
6. By drawing a dark line inside the correct numbered boxes mark your full Index Number (i.e School Code Number and the three figure Candidate's Number) in the grid near the top of the answer sheet
7. Do not make any marks outside the boxes
8. Keep the sheet as clean as possible and do not fold it
9. For each of the questions 1 - 50 four answers are given. The answers are lettered A,B,C and D. In each case ONE of the four answers is correct. Choose the correct answer
10. On the answer sheet the correct answer is to be shown by drawing a dark line inside the box in which the letter you have chosen is written

Example

For questions 19 and 22 choose the alternative that can best complete the sentences given.

In the following sentences choose the alternative that best completes the sentence.

19. The dog seldom barks, \_\_\_\_\_

A. Doesn't it

B. will it

C. does it

D. isn't it

The correct answer is D

On the answer sheet

[A]  [B]  [C]  [D]

[A]  [B]  [C]  [D]

[A]  [B]  [C]  [D]

[A]  [B]  [C]  [D]

In the set of boxes numbers 19, the box with the letter C printed in it is marked

11. Your dark line MUST be within the box

12. For each question ONLY ONE box is to be marked in each set of four boxes

This Question Paper consists of 6 printed pages

© DIGITAL PROVE INVESTMENT KENYA

BOX 7877-00200 NAIROBI

Cell: 0716 052 864

EMAIL : digitalpinvestment@gmail.com

t@digitalinvestm1

TURN OVER



01582 5



0 20 13001 86142 3

Read the passage below. It contains blank spaces numbered 1 to 15. For each blank space, choose the best alternative from the choices given.

Depression is one of the \_\_\_\_\_ 1 \_\_\_\_\_ common psychological \_\_\_\_\_ 2 \_\_\_\_\_ which can vary from a mild 'blue period' to a full \_\_\_\_\_ 3 \_\_\_\_\_ attack of suicidal depression. One type of depression is brought \_\_\_\_\_ 4 \_\_\_\_\_ as a result of outside factors \_\_\_\_\_ 5 \_\_\_\_\_ as divorce, job loss, expulsion \_\_\_\_\_ 6 \_\_\_\_\_ school, money troubles or the death of a loved one \_\_\_\_\_ 7 \_\_\_\_\_ the other type is a medical form of depression. A person who \_\_\_\_\_ 8 \_\_\_\_\_ this type of depression alternates \_\_\_\_\_ 9 \_\_\_\_\_ spells of hyperactivity and deep sleep.

In some cases, \_\_\_\_\_ 10 \_\_\_\_\_ of anxiety may conceal a state of depression. Depression is more common \_\_\_\_\_ 11 \_\_\_\_\_ women than men and affects all ages. Symptoms include feelings of worthlessness, despair, inadequacy and the \_\_\_\_\_ 12 \_\_\_\_\_ that no one understands or sympathises. This may be accompanied by \_\_\_\_\_ 13 \_\_\_\_\_ of interest in work or home life \_\_\_\_\_ 14 \_\_\_\_\_ to concentrate on anything, sluggish thought process, loss of energy, constipation, dryness in the mouth and sluggish bowel movement. In some cases, the depressed person \_\_\_\_\_ 15 \_\_\_\_\_ lose weight.

- |                  |               |               |                   |
|------------------|---------------|---------------|-------------------|
| 1. A. more       | B. most       | C. much       | D. many           |
| 2. A. disorder   | B. disorders. | C. disorderly | D. disorderliners |
| 3. A. blowing    | B. blew       | C. blow       | D. blown          |
| 4. A. about      | B. on         | C. off        | D. from           |
| 5. A. such       | B. yet        | C. for        | D. to             |
| 6. A. against    | B. off        | C. from       | D. to             |
| 7. A. which      | B. whereas    | C. when       | D. as             |
| 8. A. had        | B. having     | C. has        | D. have           |
| 9. A. on         | C. among      | C. between    | D. against        |
| 10. A. forms     | B. shades     | C. Frames     | D. symptoms       |
| 11. A. between   | B. among      | C. at         | D. for            |
| 12. A. beleif    | B. believing  | C. believe    | D. belief         |
| 13. A. lose      | B. loss       | C. losing     | D. lost           |
| 14. A. inability | B. ability    | C. will       | D. trying         |
| 15. A. may       | B. should     | C. must       | D. ought to       |

For questions 16 and 17 choose the alternative that can best complete the sentences given.

16. I offered him a job but he \_\_\_\_\_  
 A. turned it off  
 B. turned it of  
 C. turned it down  
 D. turned it back
17. After the destruction of the dormitory, they should be \_\_\_\_\_  
 A. ashamed at themselves  
 B. ashamed of themselves  
 C. ashamed with themselves  
 D. ashamed for themselves

For questions 18 and 19 choose the correct arrangement of the given sentences to make a sensible paragraph.

18. i. we are both plump and dark  
 ii. we both have short hair  
 iii. my brother and I look alike  
 iv. people who see us together always know that we are siblings
- A. iii, iv, i, ii  
 B. iii, i, ii, iv  
 C. iii, i, iv, ii  
 D. iii, iv, ii, i

19. i. but also the leading pupil in the country  
 ii. when the examination results  
 iii. were announced later that year  
 iv. flower was not only the top of class.  
 A. i, iv, iii, i  
 B. ii, iii, i, iv  
 C. iv, i, ii, iii  
 D. iv, ii, iii, i

*For questions 20 and 21 choose the alternative that means the same as the underlined sentences.*

20. The teacher told the pupils, "Tomorrow is a public holiday."  
 A. The teacher declared tomorrow a public holiday  
 B. The teacher told the pupils tomorrow is a public holiday  
 C. The teacher told the pupils that the next day would be a public holiday  
 D. The teacher told the pupils that the next day will be a public holiday.
21. The athlete is too slow to win the race.  
 A. The athlete can't win the race  
 B. The athlete is very slow for the race  
 C. The athlete is unable to start the race  
 D. The race is too slow for the athlete.

*For questions 22 and 23 choose the opposite of the underlined word.*

22. After a hard day's work, she was very exhausted  
 A. bored  
 B. very tired  
 C. energetic  
 D. worn-out
23. This is the month during which farmers reap their maize.  
 A. Harvest  
 B. Sow  
 C. Cultivate  
 D. Weed

*For questions 24 and 25 choose the sentences which is correct*

24. A. He has twenty bulls which most are Jersey  
 B. The boxes are mine, isn't it?  
 C. They rested in the shade of the tree  
 D. Should you repair this for me please?
25. A. Who is the worst of the two?  
 B. He don't have enough money for his fare  
 C. One of the pupil is absent  
 D. Each of them has arrived

*Read the passage below and then answer question 26 to 38*

In the land of the animal kingdom there lived a king called Lion. He had ruled the animals for many years. Lion fell sick. He remained sick for a long time. He was too weak to rule the kingdom. Some animals even said he had died. Lion did not roar anymore.

The animals decided to call a meeting to discuss Lion's health. Who was going to call the meeting? Hare who was respected for bringing the animals together was away. Nobody knew when he would come back to the forest. None of the animals knew how to call a meeting.

Monkey decided to call a meeting to his homestead. He chattered the whole night hoping the other animals would come. The animals could hear him chatter but none come. A few days later, Hyena and her family, laughed all night to attract other animals. Dog, on the hand, kept on barking. Wool!wool!sheep was afraid and started bleating. Lamb was baaing baa!baa! Cow wondered what was happening. She started mooing, moo!moo!. It was all noise. Nobody knew where to go. Sheep, lamb and cow were afraid that they were being attacked by Hyena. They were scared of Hyena. Dog was also frightened. The animals scattered in different directions.

Lion's health was getting worse. No animal was able to bring the others together. When Hare arrived from the coast, he found Lion very ill. The animals were scattered. Nobody was in charge of the kingdom. Hare went to visit sparrow at her place. He requested her to go round the forest chirping to the animals to attend a meeting at Lion's den tomorrow. "Tell them Lion has a last word for them but don't say I am back in the forest okay?" Hare said.

The next morning, Lion's compound was buzzing with animals. No animal was allowed to see lion. Then Hare appeared and opened the door. He went into Lion's den. After a short moment he came to announce that Lion had requested that one of them should take charge of the kingdom. He asked those who wanted to be king to step forward.

Elephant, Hyena, Dog, Donkey and Sparrow came forward. Each one of them was asked to tell the animals what they were good at. The rest of the animals were then asked to choose the animal they would like to be their king. The animals made long lines and voted for their king. It was a very long day. Hare was in charge of the voting. He never announced the results. Instead he continued acting as the king of the forest.

26. According to the first paragraph who was the king of animal kingdom
- A. Dog
  - B. Monkey
  - C. Elephant
  - D. lion
27. Why did Lion stop ruling ?
- A. He was too weak
  - B. He lost his voice
  - C. He decided he was tired of working
  - D. He did not want to save other animals.
28. Which of the following statement is true ?
- A. Lion the king was dead
  - B. None of the animals knew how to call a meeting
  - C. Hare had gone to climb a mountain
  - D. Nobody feared the snake.
29. Where was hare when the animals were planning for the meeting?
- A. In his house
  - B. At the seaside
  - C. At the hospital
  - D. In the warehouse.
30. Which animal is call was successful in calling the meeting?
- A. Lion
  - B. Elephant
  - C. Sparrow
  - D. Hare
31. Which set of animals wanted to replace Lion as a king?
- A. Sparrow, Hare, Dog, snake
  - B. Elephant, cow, horse, donkey
  - C. Elephant, Hyena, Dog, Donkey, sparrow
  - D. Monkey, Goat, sheep, Dog
32. What is the meaning of scatter as used in the passage
- A. Assembly in one area
  - B. Make a lot of noise
  - C. Go in all directions
  - D. Follow each other in one direction
33. How did the animals chooses their new king ?
- A. shouting the loudesst whose name they wanted
  - B. by duelling
  - C. Secret ballot
  - D. Lion decided who would be his successor .
34. According to the last paragraph which statement is true about Hare?
- A. He was unable to decide who would be be the king.
  - B. He announced the winner after few a days.
  - C. He was cunning and decided to elect himself as king.
  - D. He chose someone to run the voting processes
35. What does the statement Lion's compound was buzzing with animals means?
- A. The animals were all making a buzzing sound
  - B. There were a lot of bees in attendance
  - C. Hare had used the buzzing to call the animals
  - D. The compound was filled with noisy animals.
36. Why did hare ask sparrow to call all the animals ?
- A. She was the wisest among them
  - B. Her chirping would not scare the animals away
  - C. She was small and could go anywhere
  - D. All the animals feared her

37. The phrase some animals even said he had died implies a situation of
- A. Victory
  - B. Awkwardness
  - C. Veengeance
  - D. Hopelessness

38. What is the best title for the passage ?
- A. Choosing a king
  - B. Lion and the animals
  - C. Chaos in the forest
  - D. Animals kingdom

*Read the passage below and then answer question 39 to 40*

The world over technology skill in its different forms is one of the most coveted .But why is it that there are companies with unfilled positions ?

When the world is teeming with legions of highly trained professions ,why is it that they say it is hard to get the right candidates ?

Let's start with the basics : schools impart skills.Graduates leave school imbued with a desire to tackle intractable problems of their profession.

In many cases ,however ,when job seekers test the market looking for someone to buy their skills , they often receive a lukewarm reception .Many employers reject them or are less enthusiastic about their ability to deliver.

So , how can a job hunter be better prepared to impress a potential employer or client ?It so happens that skillset alone is not enough .We need skills on how to sell our skills.a mindset of a salesman.It doesn't matter whether one is a farmer, a carpenter a computer engineer ,a priest or a politician –we are all selling either a product or a service or ourselves.

At a job interview, you are invariably selling yourself ,When you are preaching to a congregation you are influencing your congregants to adopt certain behaviour and beliefs.If you are a politician,you are selling policies to people to .Now you get the drift.

Great salespeople have a knack for what they sell.They understand the high points and uniqueness of their product.They speak about it passionately ,eloquently and resolutely .They demonstrate that to sell,one must understand how to touch the hearts and minds of prospective clients through competence in communication.

In school,we are often taught how to write and speak well.But reality has a different lesson :much of our communication ,ironically is non-verbal Sales people charm,not with words only but by appearance and body language.They also demonstrate a deep knowledge of their wares. So how does one acquire a mindset of a sales people ?The internet is awash with videos podcasts and articles about how to acquire a salesmans mentally.

We unconsciously judge and are judged by the way we shake hands our facial expressions ,our posture the tone and timbre of our voice .Done masterfully these leave a positive and lasting impressions.

Techies are often accused of living in their bubble that they speak jargon ,too hard to decode .We need to communicate in a way that the client feels understood .In any case ,when you go fishing you don't carry a piece of pizza as bait because you love pizza Instead you bait a fish with worms because they are a fish's best meal. To stand tall in the job market we need to nurture a mindset that breeds enthusiasm,energy and optimism,one that endears us to others.When this mindset jells with the skillset,a pre-eminent professional is hatched.

39. According to the first paragraph which skill is the most coveted ?  
A. Marketing skills  
B. Sales skill  
C. Technology skill  
D. Teaching skill
40. What is the meaning of the word covet as used in the passage  
A. A strong desire to have something  
B. A type of vehicle  
C. A cover used in bed  
D. A place of dwelling
41. Which of the following statement is true?  
A. The world has many highly trained professionals  
B. There are not enough trained professionals  
C. Schools are unable to impart skills  
D. Getting a job is a very easy task
42. What does a person require in order to impress a potential employer  
A. A very well written cv  
B. The skillset they acquire from school  
C. The ability to sell your skills to a client or employer.  
D. Good ovatory.
43. From the passage it is true to say that  
A. We are taught how to write and speak well  
B. The job market always receives job seekers warmly  
C. We are not taught how to use non-verbal communication.  
D. Salespeople do not know how to talk.
44. The statement that they speak jargon means  
A. They use technical words that are difficult to understand  
B. They speak in a foreign language  
C. They use inappropriate language  
D. They speak in a language called jargon.
45. The passage make it clear that  
A. Good grades in school are the key to a good job  
B. Communication is key in the job market  
C. People do not judge us by how we look  
D. Technology is only for sales people
46. In order to acquire the mindset of a salesperson  
A. A person has to be born with a natural ability to sell  
B. One has to become a hawker to learn  
C. It is impossible to learn how to be a sales person  
D. You can learn through ideas , podcasts and articles
47. Which of the following is true about sales people ?  
A. they talk too much  
B. they are all highly paid  
C. they have a great understanding  
D. all of them are smartly dressed.
48. Which of the following is true about all professions?  
A. All professions are brought in school  
B. You have to be a genius to be a professional  
C. All professionals wear suits to work  
D. All professionals are selling a product , service or themselves
49. What is not a requirement to get the mindset of a sales person ?  
A. Age  
B. Energy  
C. Optimism  
D. Enthusiasm
50. Which of the following is the most appropriate title for the passage?  
A. Searching for a job  
B. The mindset of a salesperson  
C. Training professionals  
D. Balting fish with worms





# THE DIGITAL PROVE NATIONAL BASHIRI MAALUM LA K.C.P.E



THE NEW LIGHT

**KISWAHILI DARASA LA NANE**  
**LUGHA MUDA:**

**SAA 1 DAKIKA 40**

**SOMA KWA MAKINI MAAGIZO YAFUATAYO**

1. Umepewa kijitabu hiki cha maswali na karatasi ya kujibia. Kijitabu hiki kina maswali 50
2. Ikiwa unataka kuandika chochote ambacho si jibu andika katika kijitabu hiki.
3. Ukisha chagua lionyeshwe katika **KARATASI YA MAJIBU** na wala sio katika kijitabu hiki cha maswali.

**JINSI YA KUTUMIA KARATASI YA MAJIBU**

4. Tumia penseli ya kawaida
5. Hakikisha ya kwamba umeandika yafuatayo katika karatasi ya majibu

**NAMBA YAKO YA MTHANI**

**JINA LAKO**

**JINA LA SHULE YAKO**

6. Kwa kuchora kistari katika visanduku vyenye namba zianazokushusu, onyesha namba yako kamili ya mthani (yaani namba ya shule, na zile namba tatu za mthaniwa) katika sehemu iliyotengwa mwanzo wa karatasi ya majibu
7. Usitie alama zozote nje ya visanduku
8. Iweke safi karatasi yako ya majibu bila kuikunja
9. Kwa kila swali 1 - 50 umepewa majibu manne. Majibu hayo yameonyeshwa kwa herufi A,B,C,D. Ni jibu moja tu kati ya hayo manne ambalo ni sahihi.
10. Kwenye karatasi ya majibu, jibu sahihi lionyeshwe kwa kuchora kistari katika kisanduku chenye herufi uliyochagua kuwa ndilo jibu

**Mfano**

**Katika kijitabu cha maswali: Chagua jibu sahihi.**

18. Ikiwa mtando itakuwa Jumatano, jana ni?

- A. Juma pili
- B. Alhamisi
- C. Ijumaa
- D. Jumamosi

**Jibu sahihi ni D**

Katika karatasi ya majibu

**16** [A] [B] [C] [D]

**17** [A] [B] [C] [D]

**18** [A] [B] [C] [D]

**19** [A] [B] [C] [D]

Katika visanduku vinavyoonyesha majibu ya swali namba 18, kisanduku chenye herufi D ndicho kilichochorwa kistari

11. Chora kistari chako vizuri. Kistari chako kiwe cheusi na kisijitokeze nje ya kisanduku
12. Kwa kila swali, chora kistari katika kisanduku kimoja tu kati ya visanduku vinne ulivyopewa

*Kijitabu hiki cha maswali kina kurasa 6 zilizopiwa chapa*

© DIGITAL PROVE INVESTMENT KENYA

0716052864 NAIROBI

Fungua Ukurasa

Soma vifungu vifuatavyo. Vina nafasi 1 mpaka 15. Kwa kila nafasi umepewa majibu manne hapo. Jaza kila pengo kwa majibu ambavyo ni wazi au lifaalo zaidi.

\_\_\_\_\_ 1 \_\_\_\_\_ nguzo zinazoimarisha siha ni michezo na \_\_\_\_\_ 2 \_\_\_\_\_ yanayolwa na watu .  
 \_\_\_\_\_ 3 \_\_\_\_\_ zimezuka na \_\_\_\_\_ 4 \_\_\_\_\_ binadamu \_\_\_\_\_ 5 \_\_\_\_\_ nchini . Washikaduu katika  
 \_\_\_\_\_ 6 \_\_\_\_\_ wamewasili wananchi kurudia vyakula vyao vya kitamaduni. Hii ni \_\_\_\_\_ 7 \_\_\_\_\_ utafiti  
 kufanywa na kubaini dhahiri shahiri kuwa vyakula vingine vya kisasa huwa na kemikali . Serikali ya taifa  
 imetakiwa kushirikiana na zile za kaunti kama \_\_\_\_\_ 8 \_\_\_\_\_ kuimarisha kiwango \_\_\_\_\_ 9 \_\_\_\_\_ afya  
 nchini.

- |                      |                   |                    |                    |
|----------------------|-------------------|--------------------|--------------------|
| 1. A. Baadhi ya      | B. Angalau        | C. Kati ya         | D. Kama            |
| 2. A. maakuli        | B. bidhaa         | C. maji            | D. vyakula         |
| 3. A. Uwele          | B. Magonjwa       | C. Ukongo          | D. Ndwele          |
| 4. A. kuwanufaisha   | B. kuwaathari     | C. kuwaathiri      | D. kuwaadhiri      |
| 5. A. mwote          | B. kwote          | C. kote            | D. zote            |
| 6. A. wizara ya kawi | B. wizara ya rais | C. wizara ya fedha | D. wizara ya afya. |
| 7. A. tangu          | B. baada ya       | C. kabla ya        | D. lau             |
| 8. A. kiko na digail | B. pua na mdomo   | C. chanda na pete  | D. kinu na mchi    |
| 9. A. ya             | B. la             | C. za              | D. cha             |

Amina alikuwa \_\_\_\_\_ 10 \_\_\_\_\_ mzuri aliyependwa na \_\_\_\_\_ 11 \_\_\_\_\_ yake. Umbo lake  
 \_\_\_\_\_ 12 \_\_\_\_\_ wengi waliomtazama kwa mara ya kwanza . Wata walituliza nafsi zao katika tafrija  
 alizoitwa kutumbuiza . Alifanya mazoezi mengi ya kucheza gitaa \_\_\_\_\_ 13 \_\_\_\_\_ huku akifshamu  
 \_\_\_\_\_ 14 \_\_\_\_\_ . Alitisa bidii foko wala \_\_\_\_\_ 15 \_\_\_\_\_ katika taaluma yake ya uimbaji.

- |                        |                       |                       |                         |
|------------------------|-----------------------|-----------------------|-------------------------|
| 10. A. diwani          | B. malenga            | C. ngoi               | D. jaribosi             |
| 11. A. hatibu          | B. hadhira            | C. umati              | D. mashubiki            |
| 12. A. liliwavutia     | B. liliwavutiwa       | C. liliwavutisha      | D. liliwavuta           |
| 13. A. yake            | B. lake               | C. wake               | D. chake                |
| 14. A. mui huwa mwema  | B. kinolewacho hupata | C. subira huvuta heri | D. fuata maji yaendako. |
| 15. A. hakuuma mchanga | B. hakuota mleti      | C. hakuenda arubii    | D. hakuenda nguu        |

**Kuanzia nambari 16 mpaka 30. Jibu kulingana na maagizo uliyopewa.**

16. Chagu wingi wa :Mti mrefu ndio upendwao na nyani  
 A. Miti ndefu ndiyo ipendwayo na nyani.  
 B. Miti mirefu ndiyo ipendwayo na nyani.  
 C. Miti mirefu ndiyo ipendwayo na manyani.  
 D. Miti mirefu ndio ipendwayo na nyani.
17. Unapoambiwa "Karibu tule chakula" utajibu?  
 A. Vyema  
 B. Asante  
 C. Starehe  
 D. Nishakula

18. Sente isi ipi ina kiwakilishi cha pekee?  
 A. Watoto wengi wamekula lakini wengine bado hawajala.  
 B. Mifuko michache imeoshwa ; mifuko mingine itaoshwa kesho.  
 C. Magari haya ni ya shule yetu , yale ni ya usafiri wa umma.  
 D. Baadhi yao wamemaliza kazi lakini wengi bado.
19. Kifaa kinachokuza vitu kuonekana vikubwa zaidi huitwa?  
 A. Fuawe  
 B. Hadubiri  
 C. Utepe  
 D. Kiwambo

20. Tegua kitendawili kifuatayo

**Nyumba yangu ina nguzo moja tu.**

- A.mti                      B.uyoga  
C.mnara                  D.mnazi

21. Eleza matumizi ya ka katika sentensi ifuatayo

Kazija aliamka, akaoga, akajinadhifisha na akaondoka.

- A. Kuonyesha vitenzi.  
B. Kuonyesha wakati uliopita.  
C. Kuendelea kwa matukio.  
D. Kufuatana kwa matukio.

22. Kiingizi kipi kinachotumika kutaka kitu

kinusurike?

- A. Hamadi                B. Pukachaka  
C. Kefule                 D. Simile

23. Chagua udogo wa ;

**Nguo yake aliyonunua ilimbana mapaja.**

- A. Kinguo chake alichonunua kilimbana vijipaja.  
B. Kijungo chake kilichonunua kilikibana vijipaja.  
C. Kiguu chake kilichonunua kilikibana vijipaja.  
D. Kiguu chake alichonunua kilikibana vijipaja.

24. Kipande cha tatu katika mshororo wa ushairi huitwa?

- A. Tathlitha              B. Utao  
C. Mwandamizi        D. Ukwapi

25. Maelezo yapi si sahihi kuhusu jina Kanda .

- A. Malipo yanayotolewa kwa mganga .  
B. Chakula kilichopikwa kwa mchanganyiko wa mahindi na pojo .  
C. Kitu chenye utepe unaonasa sauti au picha.  
D. Songa au binyabinya kwa kutumia mkono.

26. Chagua ubainisho wa maneno yalipigiwa

mistari katika sentensi

Wanafunzi wote waliokuja ni wale tuliowaita

- A. Kivumishi, kitenzi, kiwakilishi  
B. Kiwakilishi, kiwakilishi, kiashiria  
C. Kivumishi, kiwakilishi, kiwakilishi  
D. Kiashiria, kitenzi, kiwakilishi

27. Ganda kama kupe ilhali hakika kama

- A. Kazi  
B. Ukweli  
C. Mauti  
D. Kigongo

28. Baba wa shangazi yako utamwita?

- A. Mhavile  
B. Babu  
C. Mcheja  
D. Mlamu

29. Chagua sentensi ambayo ina karibu ya kihusishi.

- A. Wavuvi wa eneo hili huishi karibu na mto .  
B. Alikuwa karibu kugongwa dafrau na gari lile.  
C. Wapiga kura walipewa karibu shilingi elfu moja.  
D. Karibu tena kwetu siku nyingine.

30. Msemo upi uliotofauti na mingine?

- A. Lia ngoa  
B. Ona gere  
C. Ona kijicho  
D. Kuwa na raghba

### **Soma habari ifuatayo kisha ujibu maswali 31-40**

Mawasiliano ni upashaji wa habari kwa kutumia njia mbalimbali. Nina uhakika umewahi funzwa au kujifunza mbinu za mawasiliano zilizotumika siku za mababu zetu. Ukilinganisha na mawasiliano hivi sasa utakiri kwamba teknolojia imetufaa mno. Mtu huenda na uchao haendi na uchwao.

Mambo yamerahisishwa ukiwa umekaa kwenye kochi katika nyumba yako unaweza ukaagiza bidhaa kutoka ng'ambo. Hata magari yamekuwa yakiletwa nchini kutoka mataifa kama ya Ujerumani, Ufuransa, Urusi, Uchina na Uingereza. Mbinu hii inayotumiwa humfanya mteja kuwasiliana na muuzaji aliye masafa marefu kutoka kwake. Maisha yamekuwa kama kula papai kwa kijiko.

Mashirika mbalimbali ya biashara yamechipuka na kuwasaidia wananchi pakubwa. Baadhi yao ni Jumia, masoko na mengineo. Kinachohitajika ni rununu yako iwe na programu hizo. Bidhaa nyingi huuzwa kupitia programu hizi. Ititoshe, zenyewe huwa bei ya chini ukilinganisha na madukani au magulioni ukishaagiza bidhaa. Huchukua siku tatu kukufikia hadi mlango pako.

wewe hulazimika kulipa ada ya usafiri ambayo haizidi shilingi mia mbili.

Watu waliosoma na kuachana miale mingi niyopita huja kukatana tena kwenye mitandao ya kijamii. Wao hujumuika pamoja tena na kuandaa sherehe za kutangamana kwa kutotiana maningani kwa muda mrefu. "facebook,whats App na instagram" ni baadhi ya mitando ya kijamii. Watu huweka maendelezi yao ya kimaisha.Mfano walikosomea, wanakoishi na shughuli wanazofanya .Huwawezesha masahibu wao kuwapata kwa uraisi .  
Dunia imegeuka kuwa kijiji kidogo.

Wahenga hawakwenda harijojo walipolonga kuwa hakuna mchele ukosao ndume. Licha yamanufaa foko ya vyombo vya mawasiliano ,hasara pia zimeshuhudiwa .Matumizi ya rununu yamekuwa ya kuudhi .wazee kwa vijana wamekuwa wakiutumia muda wao mwingi huku wakilemaza shughuli zao za kujiendeleza kiuchumi vijana wa umri mdogo wameathiriwa na simu hizo.Hujiingiza katika programu zilizopotovu na kuwaishia kuwaaribu kimasomo na kimadili.

Teknolojia inafaa kutumiwa vyema na matumizi yaliyokusudiwa isije ikaleta maafa kuliko faida. Nalisihi shirika la mawasiliano nchini kuondoa programu zisizofaa ili kukuza maadili mema katika jamii .kwani usipoziba ufa utajenga ukuta.

31.Kulingana na aya ya kwanza gani si kweli?

- A.Mawasiliano ya hivi sasa yametufaa mno kuliko ya zamani.
- B.Mwandishi hana uhakika ikiwa umejifunza mbinu za mawasiliano za zamani.
- C.Tunapaswa kuenda na maendeleo ya teknolojia .
- D.Mawasiliano hupashwa kupitia njia nyingi.

32.Mambo yamerahisishwa vipi?

- A.Unaweza enda kujinunulia vitu bila tashishwi.
- B.Maisha yamekuwa mepesi.
- C.Bidhaa zilizoko ng'ambo zinaweza kukufikia hadi kwako.
- D.Kupitia mawasiliano mema.

33.Chagua jina ambalo ni kisawe cha rununu

- A.Rungoya
- B.Rukono
- C.Kipatalishi
- D.Tarakilishi

34.Bidhaa zinazouzwa kutumia programu kama jumia huwa

- A.Zimetumiwa mwanzoni.
- B.Zinakufikia baada ya muda mrefu.
- C.Ada ya usafiri huzidi shilingi mia mbili.
- D.Nafuu ukilinganisha na za madukani.

35."Dunia imegeuka kuwa kijiji kidogo" . Ina maana kuwa

- A.Vyombo vya mawasiliano vinawezesha watu walio mbali kuwasiliana .
- B.Dunia ni kati ya vijiji nchini.
- C.Dunia sasa imegeuka kuwa kijiji.
- D.Watu wanaweza kutembeleana ukilinganisha na kitambo.

36.Maendelezi ya watu katika mitandao ya kijamii hayajumuishi?

- A.Kazi wanazofanya
- B.Walipoenda skuli
- C.Aina za simu wanazo
- D.Sehemu wanazoishi.

37.Taja kisawe cha methali hakuna mchele ukosao ndume.

- A.Hakuna refu lisilo na ncha
- B.Uzuri wa mkakasi ndani kipande cha mti
- C.Hakuna masika yasiyokuwa na mbu
- D.Hakuna msiba usiokuwa na mwenziwe.

38.Vijana wakizitumia simu visivyo huathirika

- A.Kielimu na kitabia.
- B.Kimasomo na klabu.
- C.Kisiha na maadili.
- D.Kimasomo na ukuaji.

39. Mwandishi anamalizia akisema  
A. Shirika la mawasiliano kuondoa programu zote.  
B. Watu watumie teknolojia wanavyotaka.  
C. Teknolojia ni mbaya sana.  
D. Tujiadhari kwa matumizi mabaya ya teknolojia .

40. Kulingana na taarifa  
A. Watu waliosomo huja kufumukana pamoja.  
B. Mashirika ya biashara yaliyochipuka yamewafanya watu kuwa mahawinde.  
C. Teknolojia itumiwe kwa uangalifu isije ikawadhuru watu.  
D. Muda mwingi haupotezwi watu wanapotumia rununu.

**Soma habari ifuatayo kisha ujibu maswali 41-50**

Chambilecho wahenga mbiu ya mgambo ikilia kuna jambo. Niligutushwa na unyende mkali kutoka usingizini mara ya kwanza nilidhani masikio yangu yalikuwa yakinichezea shere Nilirudi

kulala nikajitia hamnazo. Mara ya pili unyende ulipozidi nilitupa blanketi langu na kupiga milundi hadi dirishani. Sikupata picha kamili ambako mayowe yalitokea. Jambo usilolijua ni kama usiku wa giza.

Wavyele wangu walikuwa sebuleni wakiwaza na kuwazua jinsi watakavyotoka nje. Sote tulijihami kwa silaha si manati si panga si mshale si rungu. Tulijiapia moyoni liwe liwalo ni sharti tumsaidie mwenzetu kwani ndugu ni kufaana si kufanana.

Tulijitoma nje ya nyumba baba akiwa ameongoza rubaa. Giza la kaniki lilikuwa limetawala kote katu usingemwona mtu. Ilibainika wazi kama jua la mtikati kuwa kemi hizo zilitoka kwa jirani yetu Bwana Posho. Majirani wengine walijiunga nasi tukawa kundi ambalo halingetetereka. Tilitumia kurunzi zetu kumlika nyumba ya jirani ili kuona kilichojiri.

Ilikuwa dhahiri shahiri kuwa wezi walivamia kasri la Posho na walikuwa katika harakati za kupora mali. Waja walipandwa na hamaki iliyotaka kupasua nyuso zao. moyowe yalizidi kupigwa yaliyowatia wahaka lusu hao. Lisislo bidi hubidi walitii amri na kutoka ndani ya kasri hilo. Wezi wenyewe walikuwa tandatu na cha kushangaza miongoni mwa mlikuwa na jirani wa kijiji chetu. Chambilecho wahenga ibilisi wa mtu ni mtu.

Walijaribu kuomba msahama lakini maneno yao yaliangukia masikio yaliyotiwa komango. Si mara ya kwanza visa vya uporaji kufanyika katika kijiji chetu. Ghadhabu iliyokuwa na adinasi isingewasaza abadan kataan. Punde si punde, mvua ya mawe ikaanza kunyesha. Ikafuatiwa na chochote kile kingeweza kushikika kwenye mkono. Wawili walipata mwanga kutundika miguu mabegani huku wakisema miguu niponye. Siku yao ya kwenda kwa Maulana haikuwa imefika. Waliponea katika tundu la sindano.

Waliobaki walipigwa kitutu wakabaki si hayati si mamati. Zao za arubaini zilikuwa zimebisha walisafirishwa jongomeo bila nauli wala matwana. Ole wao! Laiti wangelijua wasingedhubutu wasiloweza. Kikosi cha polisi kiliwasili na kuwachukua wateja wao ambao walikuwa sasa wafu walielazwa kuwa kutokana na utepetevu wao iliwalazimu wanakijiji kujichukia sheria mikononi.

Siku zilibaleghe na kuwa wiki ,wiki zikapereji na kuwa mwezi ,nao mwezi ukavunja ungo na kuwa mwaka ,nao mwaka ukawa unaka .Kutojawa tena shuhudia visa vya wizi kijijini.Iieleweka bayana kwamba umoja ni nguvu utengano ni udhaifu na kofi hazilii ila kwa viganja viwili.

41.Chagua kauli isiyo sahihi kulingana na aya ya kwanza.

- A.Unyende uliposikika mhusika aliamka mara moja.
- B.Mhusika mwanzo alijifanya kutojali .
- C.Mhusika hakuelewa kelele ziiitokea sehemu gani.
- D.Mhusika hakuwa na mwao wowote kuhusu kilichojiri.

42.Jambo usilolijua ni kama usiku wa kiza .Hii ni tamathali ipi ya usemi?

- A.Tashbihi
- B.Methali
- C.Nahau
- D.Tashhisi

43.Mhusika na wavyele wake walikuwa na silaha zifuatazo chagua

- A.Mkuki,manati ,kurunzi
- B.Manati,koleo,panga
- C.Mkuki ,rungu,mundu
- D.Panga,panda ,mshale

44.Kauli ipi sahihi kulingana na aya ya tatu ?

- A.Usiku ule ungeweza kumwona mtu
- B.Haikubainika wazi mahali kelele zilitoka
- C.Kundi la watu lilikuwa imara
- D.Majirani walifanikiwa kuwaona wezi.

45.Ni nini hasa kilisababisha wezi hao kujisalimisha?

- A.Walipoona watu wengi wamekusanyika .
- B.Kelele za adinasi .
- C.Hasira za majirani.
- D.Walikuwa wamekamilisha shughuli zao za kuiba.

46.Wezi waliovamia kasri la Bwana Posho walikuwa wangapi?

- A.Sita
- B.Watatu
- C.Wanne
- D.Watano

47.Katika taarifa methali ibilisij wa mtu ni mtu imetumika kuashiria

- A. Adui wa mtu ni mtu .
- B.Usimwamini mtu yeyote .
- C.Mtu huwa adui siku zote.
- D.Jirani aliyemvamia Bwana Posho.

48.Kulingana na aya ya tano ipi si kweli?

- A.Baadhi ya wezi walichana mbuga na kutoweka
- B.Wezi walipotii amri walitaka kusamehewa
- C.Ghafa mvua ya mawe kutoka mawinguni ilianza kunyesha .
- D.Visa vya wizi vimekuwa vikishuhudiwa katika kijiji hicho.

49.Ni kwa nini wananchi walijichukulia sheria mkononi?

- A.Kituo cha polisi kilikuwa mbali.
- B.Polisi walikuwa na ulegevu fulani kuhusu suala la usalama.
- C.Hawakuwaonea huruma wahalifu hao
- D.Walikuwa na hasira nyingi sana.

50.Katika aya ya mwisho.

- A.Umoja ulisaidia wananchi kumaliza uhalifu .
- B.Visa vya uhalifu viliendelea lakini vichache .
- C.Umoja haukuwepo tena.
- D.Wanakijiji waligeuka kuwa polisi.



"The concept of excellence"

DPIS-93012001309

THE NEW LIGHT

www.kcsepdf.co.ke  
**THE DIGITAL PROVE NATIONAL  
K.C.P.E SPECIAL  
PREDICTION 4  
MATHEMATICS**

**STD 8**

Time : 2 HRS

**READ THESE INSTRUCTIONS CAREFULLY. (Instructions to Pupils).**

1. You have been given this question booklet and a separate answer sheet. The question booklet contains 50 questions
2. Do any necessary rough work in this booklet
3. When you have chosen your answer, mark it on the **ANSWER SHEET**, not in this question booklet

**HOW TO USE THE ANSWER SHEET**

4. Use only an ordinary pencil
5. Make sure that you have written on the answer sheet  
**YOUR NAME**  
**NAME OF YOUR SCHOOL**
6. Keep the sheet as clean as possible and do not fold it
7. For each of the questions 1 - 50 four answers are given. The answers are lettered A,B,C and D. In each case **ONE** of the four answers is correct. Choose the correct answer
8. On the answer sheet the correct answer is to be shown by drawing a **dark line** inside the box in which the letter you have chosen is written

Example

**In the Question Booklet**

39. What is the value of  $(2.80 - 0.33)^2$  ?

- A.  $12^{13}/_{12}$   
B.  $13^1/_{12}$   
C.  $12^1/_{12}$   
D.  $9^3/_8$

The correct answer is B  
On the answer sheet

**19** [A] [B] [C] [D]   **20** [A] [B] [C] [D]   **30** [A] [B] [C] [D]   **40** [A] [B] [C] [D]

In the set of boxes numbers 39, the box with the letter C printed in it is marked

9. Your dark line **MUST** be within the box
10. For each question **ONLY ONE** box is to be marked in each set of four boxes

**This Question Paper consists of 6 printed pages**

© DIGITAL PROVE INVESTMENT E.A.  
BOX 7877-00200 NAIROBI  
Cell: 0716 052 864 / 0763060252  
EMAIL :digitalpinvestment@gmail.com

@digitalinvestm1 @digital prove investment

TURN OVER



1. Change  $12\frac{1}{2}\%$  to a decimal. Write your answer to the nearest hundredths.

- A. 0.25
- B. 0.125
- C. 1.25
- D. 0.13

2. What is 21.046 rounded off to two decimal places.

- A. 21.46
- B. 21.04
- C. 21.00
- D. 21.05

3. Shikuku deposited sh 20,000 in an account which paid a simple interest at the rate of 10%p.a. At the beginning of the second year he deposited sh 40,000. How was in the account at the end of the 2<sup>nd</sup> year?

- A. Sh 82000
- B. Sh 68000
- C. Sh 8000
- D. Sh 68200

4. The following are properties of quadrilaterals.

- i. Diagonals are equal
- ii. Diagonal bisect angles at vertices
- iii. Opposite sides are equal and parallel
- iv. Has four equal angles
- v. Diagonals bisect each other at right angles.

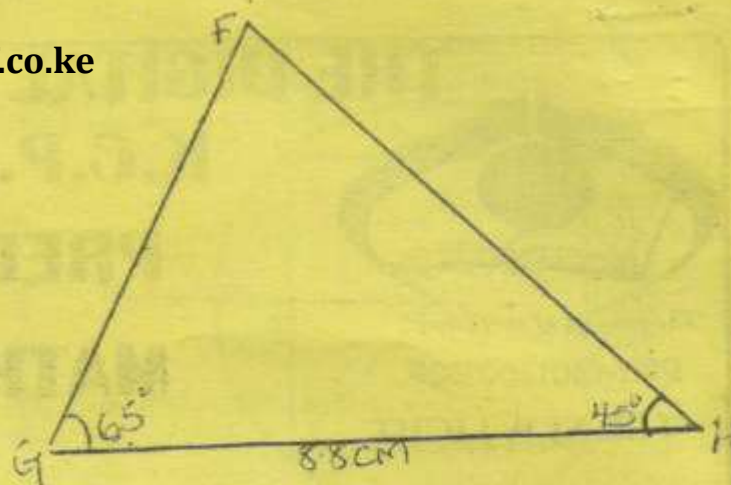
Which two properties correctly describe both a square and a rectangle?

- A. i and ii
- B. ii and iv
- C. iii and iv
- D. iv and v

5. Muema's rectangular plot of land measures 100m by 80m. He wanted to fence round it using three strands of wire after leaving a space of 5m for the gate. He had 3 rolls of wire each measuring 450m. What is the length of the wire that remains after he has fenced the plot?

- A. 995m
- B. 275m
- C. 285m
- D. 270m

6. In the triangle FGH below, construct the perpendicular bisector from point F to line GH and bisector of angle FHG to meet at point J. Join TH [draw triangle to scale]



What is the length of TH?

- A. 6.7cm
- B. 8.2cm
- C. 6.4cm
- D. 6.1cm

7. Kamau had a total of 3600 animals. 0.25 of them are cows, 0.3 of them are sheep while 0.5 of the remainder are chicken and the rest are goats. What is the total number of goats and sheep on his farm?

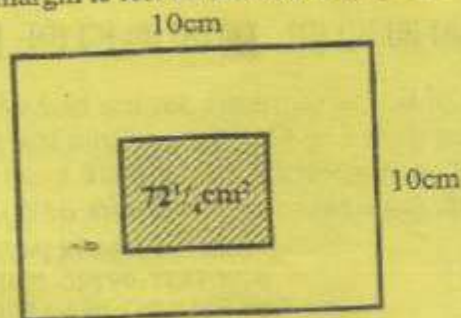
- A. 810
- B. 1890
- C. 1080
- D. 900

8. What is the value of x in the equation.

$$\frac{x}{5} + \frac{2(2x+3)}{4} = 15$$

- A.  $13\frac{3}{4}$
- B.  $11\frac{1}{4}$
- C. 3
- D.  $12\frac{1}{2}$

9. The diagram below shows two squares. The outer square measures 10cm by 10cm. The area of the inner shaded square is  $72\frac{1}{4}\text{cm}^2$ . A uniform margin is left all around between the two squares.



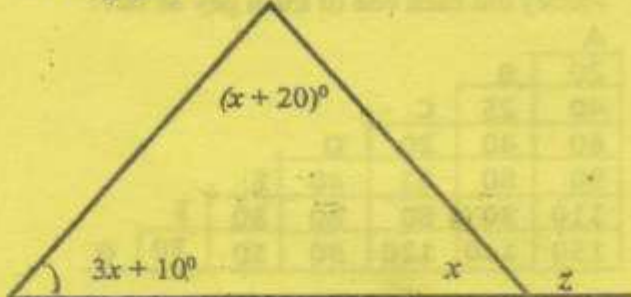
What is the length of the margin?

- A.  $27\frac{3}{4}$
- B.  $1\frac{1}{4}$
- C.  $\frac{3}{4}$
- D.  $13\frac{3}{4}$



10. A saleslady bought the following items from a hardware shop  $3\frac{1}{2}$  kg nails at sh 85.50, 3 metres of pipe sh 75 per metre, 1 hammer for sh 120 and a panga. She paid for the four items using two five hundred shillings notes but the shopkeeper asked her to give him sh 6.75 so as to give a balance of sh 213. What was the cost of panga?
- A. Sh 175.15  
 B. Sh 388.15  
 C. Sh 618.60  
 D. Sh 220.15

11. Which one of the following expressions can be used to show the size of the angle marked Z in the diagram below.



- A.  $5x + 30^\circ$   
 B.  $5x - 30^\circ$   
 C.  $4x + 30^\circ$   
 D.  $5x + 150^\circ$
12. Three schools Masomo, Bidii and Elimu shared some books. Masomo and Bidii shared in the ratio 3:4 and Bidii and Elimu in the ratio 5:6. If Bidii primary school received 7500 books, how much more did Elimu primary school received than Masomo primary school?
- A. 1500  
 B. 9000  
 C. 5625  
 D. 3375

13. Mati travelled from Nairobi to Nkubu at an average speed of 80km/hr and back at an average speed of 120km/hr. He took a total of 8hrs. Find twice the distance between Nairobi and Nkubu?
- A. 768km    B. 384km  
 C. 240km    D. 1920km

14. Mama mboga bought 300 tomatoes she grouped them in piles of four. Each pile was sold at sh 12. What was her percentage profit? If she had bought each tomato at sh 2.00.
- A. 40%                      B. 50%  
 C. 150%                     D. 5%

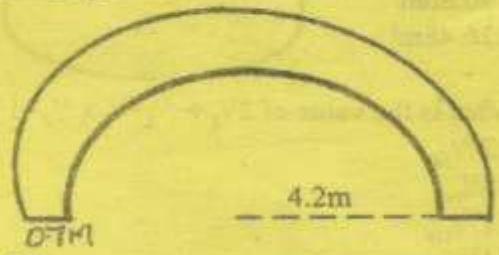
15. Said deposited sh 3000 in a bank which paid compound interest of 20% for 3 years. At the beginning of the 2<sup>nd</sup> year he deposited a further sh 1240 in the same account. What was his total amount at the end of the third year.
- A. Sh 2729.60  
 B. Sh 6969.60  
 C. 5729.60  
 D. Sh 3776.60

16. The table below shows the marks obtained by 20 pupils in five different mathematics tests.

Marks	70	65	50	40	80
Frequency	5	2	4	3	6

- What was the mean mark in the five tests
- A. 64  
 B. 80  
 C. 61  
 D.  $15\frac{1}{4}$

17. The following diagram shows an assembly ground of a primary school. Pupils line up on the two lines as shown. O is the centre of the assembly ground. If flower bushes were planted on the two lines at intervals of 20cm how many flower bushes were planted?



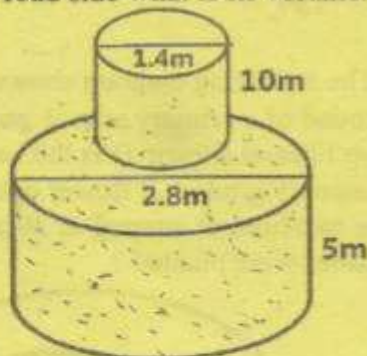
- A. 150  
 B. 149  
 C. 152  
 D. 130

18. Calculate the value of angle R
- 
- A.  $62^\circ$     B.  $72^\circ$   
 C.  $36^\circ$     D.  $90^\circ$

19. A saleslady earns a basic salary of sh 5000 in one month she received a total of sh 7090 after selling some goods. If she was given commission at the rate of  $5\frac{1}{2}\%$  on the value of goods above sh 12000, find her sales for that month
- A. Sh 26000  
B. Sh 12090  
C. Sh 38000  
D. Sh 50000

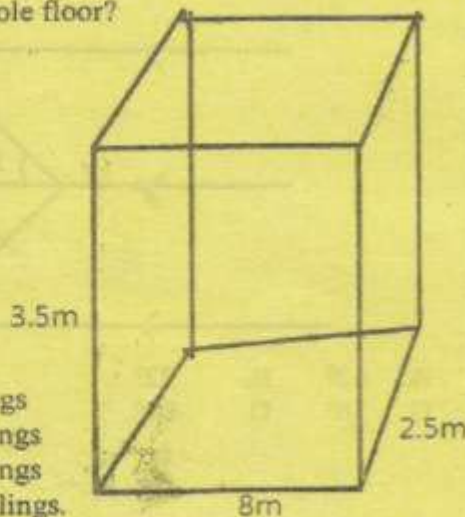
20. Solve the inequality  $5y - 5 > 2y + 5$
- A.  $3\frac{1}{3} < y$   
B.  $y < 3\frac{1}{3}$   
C.  $3\frac{1}{3} = y$   
D.  $3\frac{1}{3} > y$

21. The diagram below shows a concrete pillar constructed on a road side what is its volume.



- A.  $46.20m^3$   
B.  $15.40m^3$   
C.  $30.80m^3$   
D.  $16.48m^3$
22. What is the value of  $2\frac{1}{2} + \frac{2}{3} + \frac{1}{4} \times \frac{2}{7} - 1\frac{2}{5}$  of  $\frac{5}{8}$ ?
- A.  $2\frac{23}{168}$   
B.  $3\frac{5}{24}$   
C.  $1\frac{97}{336}$   
D.  $1\frac{1}{4}$

23. The diagram below represent a rectangular hall measures 25m long 8m wide, 3.5 high. The floor was covered with square tiles of 25cm long. If each tile costs sh 15, how much money is used to cover the whole floor?




- A. 320 shillings  
B. 4800 shillings  
C. 4480 shillings  
D. 67200 shillings.

24. Ten workers were contracted to finish a certain job in 48 days four workers left after working for 18 days. How long did it take to complete the whole job?
- A. 50 days  
B. 30 days  
C. 18 days  
D. 68 days

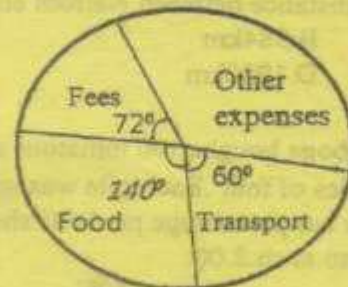
25. The table below shows fares in shillings between some towns. James, David and Peter travelled from town A to G via E then from C direct G. If they travelled together to and from how much money did each one of them pay as fare?

A						
20	B					
40	25	C				
60	40	20	D			
90	80	55	40	E		
110	90	80	60	30	F	
150	140	120	90	50	30	G

- A. 265  
B. 145  
C. 530  
D. 290
26. What is the sum of the edges and faces does a solid represented by the following net have?




- A. 15  
B. 9  
C. 6  
D. 14
27. The pie chart below shows how Wambua spent his August salary. Sh 2800 more was spent on other expenses than on transport.



- How much more did he spend on food than on fees.
- A. 6800  
B. 36000  
C. 2800  
D. 5600

28. Calculate the area of the figure below



- A.  $125m^2$
- B.  $135m^2$
- C.  $48m^2$
- D.  $96m^2$

29. Susan paid sh 3600 for a book after getting a 10% discount on the marked price. How much would she have paid if he had been given a 15% discount?

- A. Sh 5400
- B. Sh 3000
- C. Sh 4000
- D. Sh 3400

30. Amina was admitted in hospital on 3<sup>rd</sup> of December 2018. She was discharged on 3<sup>rd</sup> March the following year. How many nights did he spend in hospital

- A. 90
- B. 91
- C. 92
- D. 93

31. The amount of water in a tank was 600l. This water increased by 10% after a heavy downpour on the second day. The same percentage of water was used on the third day and also on the fourth day. Calculate the amount of water in the tank on the fifth day

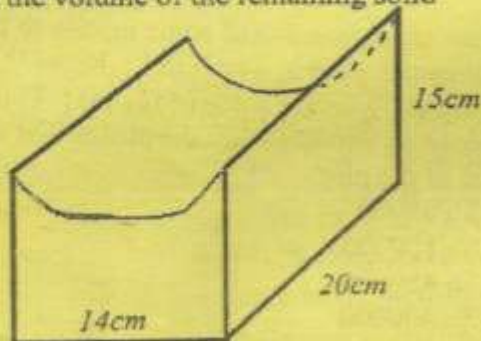
- A. 600l
- B. 594l
- C. 534.6l
- D. 420l

32. Jacinta had the following coins in her cash box

- Sh 100 in sh 20 coins
  - Sh 150 in sh 40 coins
  - Sh 240 in sh 10 coins
  - Sh 120 in sh 5 coins
- She changed the coins into equal number of sh 200 and sh 50 notes. How many notes did she have in total?

- A. 44
- B. 88
- C. 220
- D. 11000

33. Half of a cylinder was cut from the solid shows below find the volume of the remaining solid



- A.  $1540cm^3$
- B.  $2760cm^3$
- C.  $1860cm^3$
- D.  $2660cm^3$

34. Construct a parallelogram ABCD in which

$AB=8cm$ ,  $BC=6cm$  Angle  $DAB=105^\circ$ . Drop a perpendicular from C to meet line BC at x. What is the length of BX

- A. 5.2cm
- B. 6.3cm
- C. 5.0cm
- D. 1.5cm

35. Which of the following expression is the simplest form of

$$\frac{6(m+2p)+3m-12p}{20(2p-m)-25p+20m}$$

- A.  $\frac{3m}{5p}$
- B.  $\frac{9m}{15p}$

- C.  $\frac{9m-p}{15p-m}$
- D.  $\frac{9m+24p}{15p+40m}$

36. In a fundraising meeting was attended by men, women and children. There were 100 men and twice as many women. A total of sh 575000 was raised. If each man contributed sh 2000 and each women sh 1500 and each child sh 150, how many children were there?

- A. 75000
- B. 600
- C. 500
- D. 5000

37. Which one of the following numbers is ninety million nine hundred and nine thousand nine hundred and nine and nine tenths in symbols.

- A. 90909909.9
- B. 9909909.09
- C. 90909909.09
- D. 9909909.90

38. A coffee factory produced 4 tonnes of coffee which was packed in 50g, 100g and 250g packets. The number of 50g packets was 1000. While that of 100g packets was 20000. How many 250g packets were obtained?

- A. 2100
- B. 570000
- C. 32000
- D. 7800

39. Find half the next number in the series below.

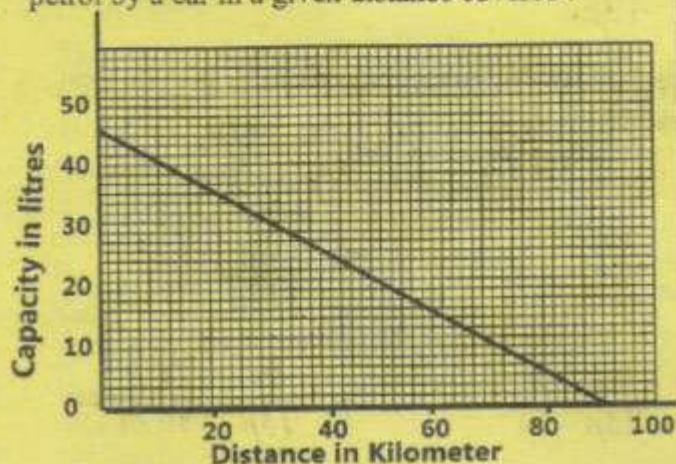
1, 1, 2, 8, 3, 27, 4, \_\_\_\_\_

- A. 36
- B. 64
- C. 32
- D. 18

40. The area of a plot on a map is  $72\text{cm}^2$ . The actual area of the plot is  $72\text{ha}$ . Find the scale of the map.

- A. 1:60000      B. 1:100  
C. 1:10000      D. 1:6000

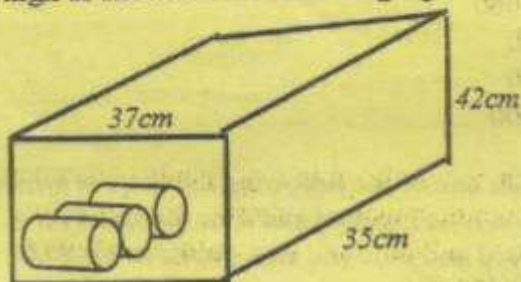
41. The graph below shows the consumption of petrol by a car in a given distance covered.



How much petrol had the car consumed after covering  $60\text{km}$ ?

- A. 15 litres      B. 30 litres  
C. 20 litres      D. 60 litres

42. Small tins of height  $12\text{cm}$  and radius  $4\text{cm}$  were arranged in a box of  $37\text{cm}$  long,  $35\text{cm}$  wide and  $42\text{cm}$  high as shown in the following figure



- A. 60      B. 48  
C. 12      D. 52

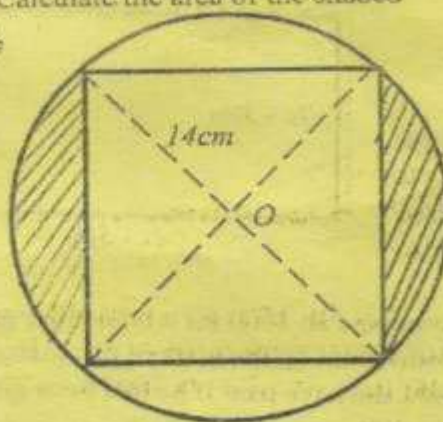
43. Akinyi deposited sh 80000 in a bank which paid simple interest at a certain rate. She withdrew all her money amounting to sh 110,000 at the end of 3 yrs. At what rate per annum was the interest?

- A. 8%  
B. 10%  
C. 12%  
D.  $12\frac{1}{2}\%$

44. A drum is  $\frac{3}{5}$  full of water. After  $144\text{l}$  are drawn the level becomes  $\frac{1}{5}$  full. Find the capacity of the tank when full.

- A. 432l      B. 240l  
C. 540l      D. 244l

45. The figure below shows a square drawn inside a circle centre O. Calculate the area of the shaded part [take  $\pi = \frac{22}{7}$ ]



- A.  $616\text{cm}^2$   
B.  $224\text{cm}^2$   
C.  $392\text{cm}^2$   
D.  $112\text{cm}^2$

46. Kiplagat has  $K$  bananas. Oyugi has two more bananas than Kiplagat. Muema has three bananas less than the total number both Kiplagat and Oyugi have. How many bananas do they have altogether?

- A.  $4k+1$       B.  $2k-3$   
C.  $4k-1$       D.  $2k+7$

47. Utumishi primary school pupils went to Uhuru market and ate the following from a food kiosk. 0.25 ate ugali, 0.15 ate pilau, 0.4 of the remainder ate chapatti. The remaining pupils who were 180 ate milk and scones. How many pupils ate ugali and pilau in total?

- A. 500      B. 200  
C. 36      D. 360

48. The length of a rectangle is one and a third times its width. The perimeter of the rectangle is  $42\text{cm}$ . Find the measure of one of its diagonals.

- A. 9cm      B. 12cm  
C. 21      D. 15cm

49. If  $a=3, b=\frac{1}{2}, a+1$  and  $c=2b$ . What is the value of

$$\frac{(2a-3)^2 + (c-1)}{b+4}$$

- A.  $1\frac{1}{2}$       B. 2  
C. 3      D.  $3\frac{1}{2}$

50. Four men contributed some money to buy a plot. Odhiambo gave  $\frac{1}{5}$ , Mwaura  $\frac{1}{4}$ , Kibet  $\frac{1}{3}$  and Mwanzia  $\frac{1}{8}$  of the price of the plot. They still needed sh 84000 to buy the plot. What was the cost of the plot?

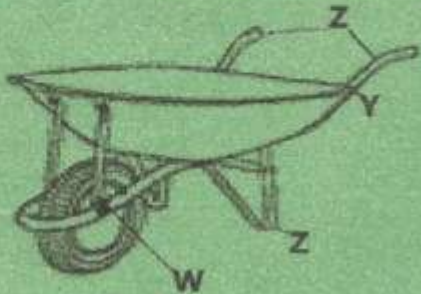
- A. Sh 99000  
B. Sh 120000  
C. Sh 480000  
D. Sh 400000



1. The following are plants which provide us with oil EXCEPT ?

- A. Corn
- B. Sunflower
- C. Cotton
- D. Simsim

2. The diagram below represents a simple machine in use



In order to apply less effort when using it one should increase distance between \_\_\_\_\_ and \_\_\_\_\_

- A. Y and Z
- B. W and Z
- C. W and X
- D. X and Y

3. The following are ways of reducing friction. Which one is NOT?

- A. Putting murrum on the road
- B. Using ball bearings
- C. Greasing
- D. Streamlining the body.

4. The following are reasons why plants depend on each other EXCEPT?

- A. Some plants have weak stem
- B. Some plants cannot do well in direct sunlight
- C. Some plants extract food from other plants
- D. Some plants get oxygen from other plants.

5. The diagram below represents a mammalian heart



When the part marked P contract

- A. Oxygenated blood is pumped to the lungs
- B. Oxygenated blood is pumped to the body
- C. Deoxygenated blood is pumped to the body
- D. Deoxygenated blood is pumped to the lungs

6. The process by which food moves along the gullet is referred to as

- A. Peristalsis movement
- B. Boluses
- C. Digestion
- D. Absorption

7. The diagram below represents a canine tooth -



Which one of the following shows the CORRECT numbers of the teeth and its function?

Number	function
A. 4	biting and cutting
B. 2	tearing and holding
C. 4	gripping and tearing
D. 4	tearing and cutting

8. The following are adaptations of plants in different habitat.

- i. Waxy and hairy leaves
- ii. Silvery hair in the leaves
- iii. Sunken stomata
- iv. Rolling of leaves
- v. Flexible stem

Which group are survival mechanisms for Xerophytes?

- A. i, ii, v
- B. ii, iii, iv
- C. iii, iv, v
- D. i, iv, v

9. The following are examples of tuber crops EXCEPT

- A. Cassava
- B. Yam
- C. Carrot
- D. Onion


10. Which one of the following pairs of levers have effort and fulcrum in the same position ?

- A. Spade and wheelbarrow
- B. Lid opener and crowbar
- C. Bottle opener and spade
- D. Fishing rod and broom

11. Which one of the following groups of plants have the same type of root system?

- A. Coconut, Sugarcane, Grass, Onion
- B. Acacia, Mango, Grass, Blackjack
- C. Tomato, Cabbages, Coconut, Grass
- D. Grass, Onion, Cabbage, Kales

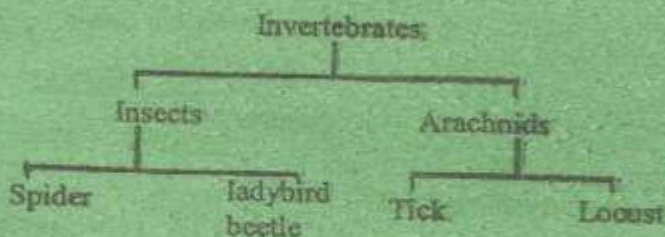
12. The diagram below represents a simple machine



When it is in use, it makes work easier by?

- A. changing direction of the force
- B. increasing load distance
- C. Increasing effort distance
- D. Climbing the wall

13. The diagram below is a flow chart of invertebrates



Which animals are wrongly classified?

- A. Tick and locust
- B. Locust and spider
- C. Spider and lady bird beetle
- D. Tick and lady bird beetle

14. The following are differences between mammals and amphibians. Which one is common?

- A. Cold blooded
- B. Breathe through lungs
- C. Internal fertilization
- D. Body covered with scales

15. Which one of the following statements is NOT TRUE about feeding adaptation in herbivores

- A. They have hard pad for turning the food for proper chewing
- B. Premolars and molars are used for chewing
- C. They have incisors teeth only on the lower jaw
- D. Their teeth continue growing throughout their live.

16. Given below are animals put in pairs. Which pair consist of animals that lay unfertilized eggs?

- A. Frog and tortoise
- B. Lizard and birds
- C. Newt and snake
- D. Amphibians and fish

17. Which one of the following water-borne diseases CANNOT be prevented by drinking boiled water?

- A. Dysentery
- B. Cholera
- C. Bilharzia
- D. Typhoid

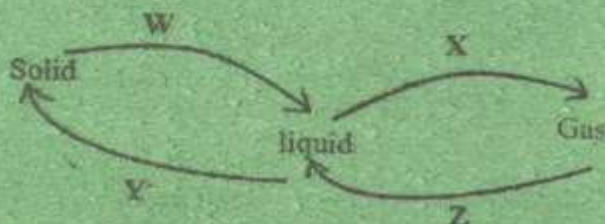
18. The following are forms of energy:

- i. Heat
- ii. Electricity
- iii. Sound
- iv. Light

Which two forms of energy requires media for their transmission?

- A. i and ii
- B. ii and iii
- C. ii and iv
- D. i and iv

19. The diagram below represents changes of states of matter



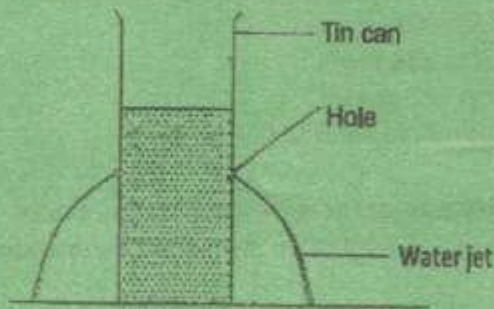
Which two changes occur as a result of absorption and losing of heat respectively

- A. X and Y
- B. W and X
- C. Y and Z
- D. Z and W

20. The table below represents composition of air in the atmosphere and their uses. Which one is WRONGLY matched?

Gas	uses
A. Oxygen	germination
B. Carbon dioxide	rusting
C. Nitrogen	making fertilizer
D. Rare gases	hot air balloons

21. The diagram below represents a certain property of liquids



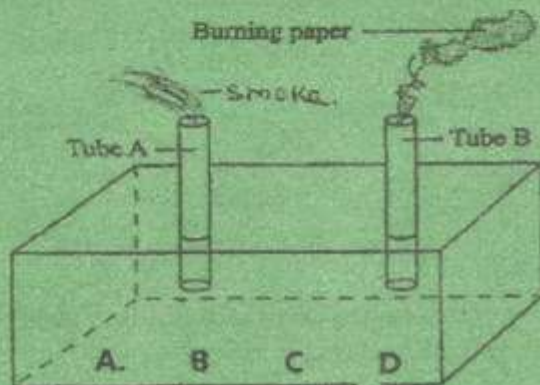
Which one of the following statements is NOT TRUE according to the set up ?

- A. Pressure in liquids is equal at different depth
- B. Liquids exert pressure in all direction
- C. Pressure in liquids increases with depth
- D. Pressure is equal at the same level

22. Which of the following consist of magnetic materials ONLY ?

- A. Zinc ,chromium ,Tin
- B. Steel,Copper ,Brass
- C. Cobalt ,Steel,iron
- D. Alnico ,Aluminum Zinc

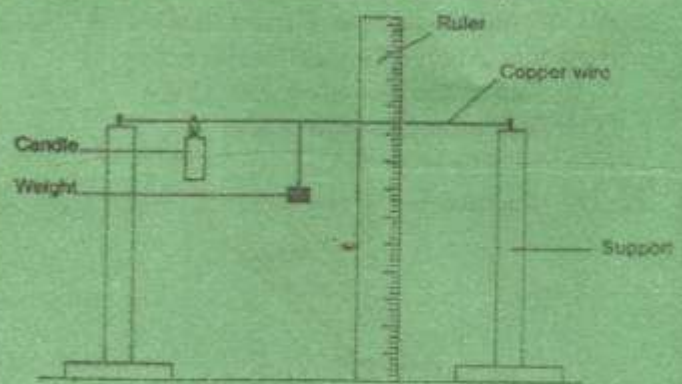
23. The diagram shows a set up used to demonstrate mode of heat transfer in gases



In which position should the candle be placed ?

- A. C
- B. A
- C. D
- D. B

24. The experiment below was carried out by std 5 pupils to investigate a certain property of matter.



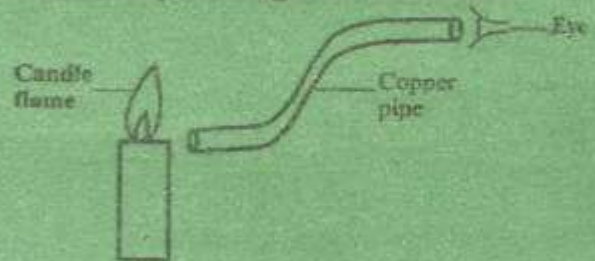
What property of matter were they investigating

- A. Solids expand when heated
- B. Copper is a good conductor of heat
- C. Solids contract when heated
- D. Copper cannot expand.

25. Sound travels faster through ?

- A. Liquids
- B. Gases
- C. Vacuum
- D. Solids

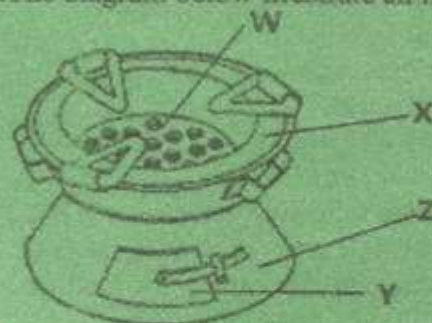
26. Std 6 pupils carried out an experiment to investigate a certain aspect of light as shown below



What was their conclusion?

- A. Light travels in all direction
- B. Light travel in a straight line
- C. Light can be splitted
- D. Light can be refracted.

27. The diagram below illustrate an improved jiko.



It conserves energy MAINLY because of

- A. the part marked X
- B. the part marked W
- C. the part marked Y
- D. the part marked Z



28. Which one of the following is a renewable source of energy ?

- A. Coal
- B. Diesel
- C. Biogas
- D. Kerosene

29. Which one of the following is NOT a good conductor of electricity?

- A. Water
- B. Graphite
- C. Copper
- D. Plastic

30. A child was taken to hospital and observed with the following symptoms

- i. Violet vomiting
- ii. Diarrhoea
- iii. Severe stomach ache
- iv. Dizziness

The child was most LIKELY to be suffering from ?

- A. Food poisoning
- B. Malaria
- C. Bilharzias
- D. Kwashiorkor

31. Which method of preserving food is used in BOTH modern and tradition?

- A. Drying
- B. Salting
- C. Freezing
- D. Smoking

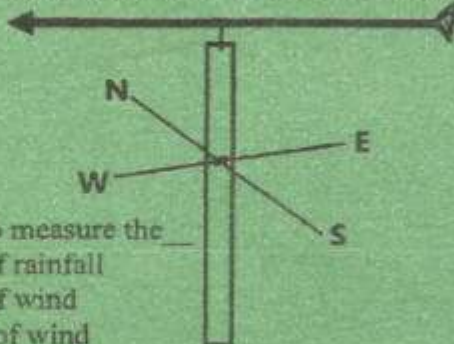
32. Which two deficiency diseases may make a child to become a slow learner?

- A. Marasmus and Rickets
- B. Kwashiorkor and marasmus
- C. Anemia and ricket
- D. Kwashiorkor and rickets

33. Which one of the following is NOT an agent of soil erosion?

- A. Animals
- B. Wind
- C. Water
- D. Plants

34. The instrument shown below is used in a weather station.



Its work is to measure the \_\_\_\_\_

- A. Amount of rainfall
- B. Strength of wind
- C. Direction of wind
- D. Temperature

35. Which one of the following statement is TRUE about the modeling of the solar system ?

- A. Jupiter is bigger than the sun
- B. Second thing to do is to paste manila paper on the soft board
- C. Distance between the planets is the same
- D. Instead of pins we can use thorns

36. Lactating mothers diet should include extra fluid.

- A. To replace blood lost during birth
- B. For formation of bones in the child
- C. For formation of immunity in the child
- D. For formation of breast milk.

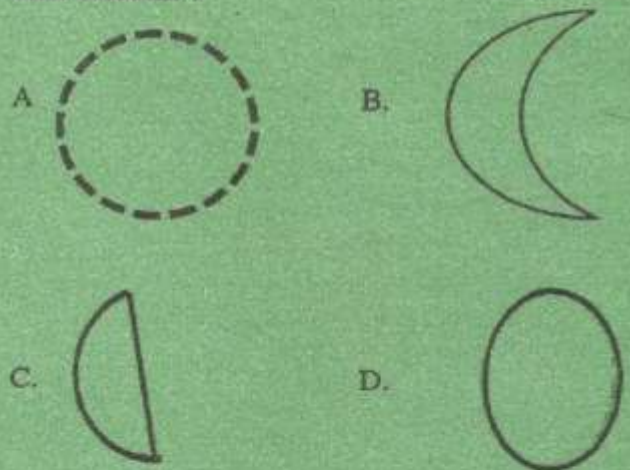
37. Which one of the following statement is TRUE about tubeclosis

- A. The best way to prevent it is through immunization
- B. It is spread through unboiled milk
- C. It can be spread through ventilated room
- D. Can be prevented by drinking boiled water.

38. Which stage of HIV infection is MOST dangerous ?

- A. Full blown
- B. Symptomatic
- C. Asymptomatic
- D. Window

39. Which phase of the moon is seen immediately after crescent ?



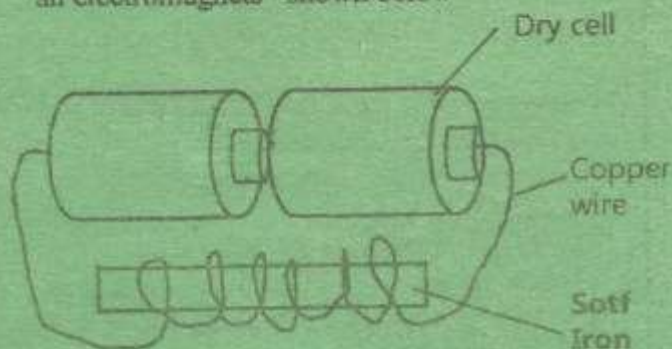
40. For a lighter pupil to balance on a sea saw?

- A. the heavier pupils should sit nearer the pivot
- B. the lighter pupils should sit on the fulcrum
- C. the heavier pupil should sit far from fulcrum
- D. both should stand.

41. Which one of the following is not a physical property of soil ?

- A. Drainage
- B. Capillarity
- C. Air spaces
- D. Water retention

42. Which one of the following shows the CORRECT energy transformation taking place in an electromagnet shown below



- A. Chemical - Magnetic - Electrical
- B. Chemical - Electrical - Magnetic
- C. Magnetic - Electrical - Chemical
- D. Electrical - Chemical - Magnetic

43. Which one of the following statement about water is TRUE ?

- A. Hand water is used for washing
- B. Boiled water is salt
- C. Water waste soap
- D. Rain is a source of hard water.

44. Which of the following have the same states of matter?

- A. Toothpaste , ghee, oil
- B. Air , water, stone
- C. Maize , flour , porridge
- D. Oxygen , oil, soil

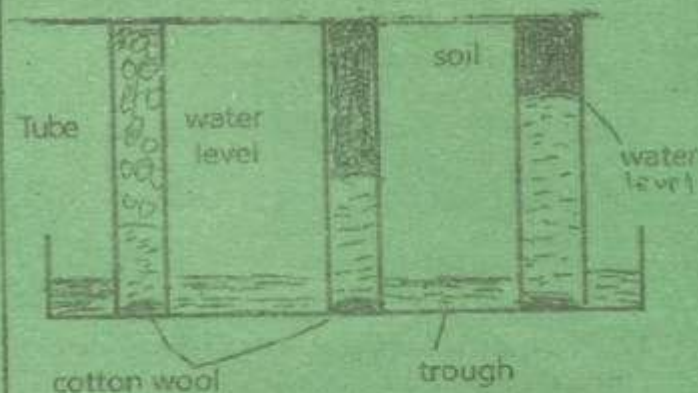
45. Which is the best method of controlling soil erosion on a steep slope

- A. Farming
- B. Building gabions
- C. Mulching
- D. Terracing

46. Which is the best method of separating a mixture of beans and maize ?

- A. Sieving
- B. Use of magnetic
- C. Picking
- D. Winnowing

47. The diagram below represent an experiment carried out by std 5 pupils . They were investigating how water moves up in different soils.



Which one of the following need not be the same ?

- A. Type of soil
- B. Amount of water
- C. Amount of soil
- D. Size of cotton wool

48. Which two animals are attacked by fleas and Ticks ?

- A. Cattle and Sheep
- B. Pigs and Rabbits
- C. Horse and Goats
- D. Poultry and Camel

49. Which one of the following is a compound fertilizer?

- A. SSP
- B. Urea
- C. ASP
- D. DAP

50. Which one of the following pollutant pollutes air, soil and water ?

- A. Dumping of industrial waste
- B. Farm chemicals
- C. Untreated sewage
- D. Fertilizer



www.kcsepdf.co.ke

# THE DIGITAL PROVE NATIONAL K.C.P.E SPECIAL PREDICTION 4

"The concept of excellence"

DPIS-93012001309

## SOCIAL STUDIES AND RE

THE NEW LIGHT

Time : 2 hours 15 minutes

### READ THE INSTRUCTIONS CAREFULLY. (Instructions to candidates )

1. You have been given this question booklet and a separate answer sheet. The question booklet contains 90 questions
2. Do any necessary rough work in this booklet
3. When you have chosen your answer, mark it on the ANSWER SHEET, not in this question booklet

#### HOW TO USE THE ANSWER SHEET

4. Use only an ordinary pencil
5. Make sure that you have written on the answer sheet  
YOUR INDEX NUMBER  
YOUR NAME  
NAME OF YOUR SCHOOL
6. Keep the sheet as clean as possible and do not fold it
7. For each of the questions 1 - 90 four answers are given. The answers are lettered A, B, C and D. In each case ONE of the four answers is correct. Choose the correct answer
8. On the answer sheet the correct answer is to be shown by drawing a dark line inside the box in which the letter you have chosen is written

#### Example

#### In the Question Booklet

47. The following are qualities of marriage except one. Which one is it?

A. Faithfulness

B. Companionship

C. Patience

D. Wealth

The correct answer is D

On the answer sheet

[A]  [B]  [C]  [D]     [A]  [B]  [C]  [D]     [A]  [B]  [C]  [D]     [A]  [B]  [C]  [D]

9. In the set of boxes numbers 47, the box with the letter B printed in it is marked
10. Your dark line MUST be within the box
10. For each question ONLY ONE box is to be marked in each set of four boxes

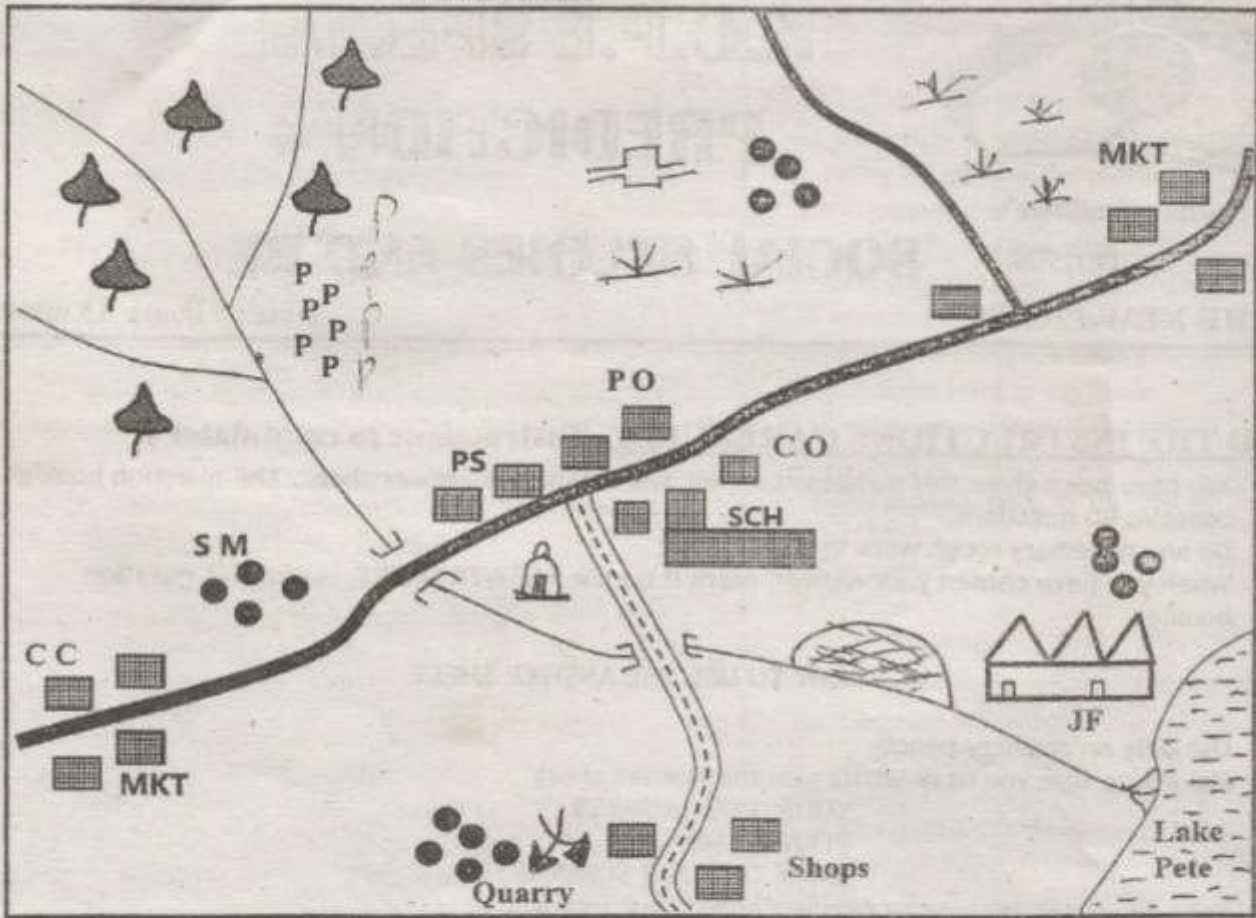
*This Question Paper consists of 8 printed pages*

© DIGITAL PROVE INVESTMENT KENYA

Cell: 0716 052 864

EMAIL : digitalpinvestment@gmail.com





SCALE 0 1 2 3 4 5 6 7 8 9 11 12 KM

KEY

	Tarmac Road		A bridge and a river	<b>C.C</b>	Chiefs camp
	Murrum Road		Mosque	<b>J.F</b>	Jaggery Factory
	Forest	<b>SM</b>	Saw mill	<b>P.O</b>	Post office
	Build up areas	<b>PPP</b>	Pyrethrum	<b>SCH</b>	School
	Settlement	<b>P.S</b>	Police station	<b>Mkt</b>	Market
		<b>C.O</b>	County offices		

Study the map of Pete Area provided and answer questions 1 to 7.

1. The land in Pete area slopes towards

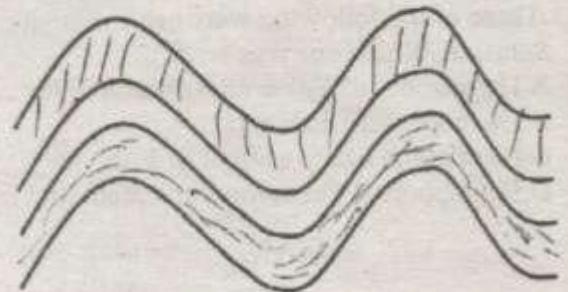
- A. South east
- B. North East
- C. South West
- D. North West

2. The two main crops grown in Pete area are likely to be:

- A. Pyrethrum and cotton
- B. Pyrethrum and rice
- C. Tea and coffee
- D. Pyrethrum and sugarcane.

3. The climate to the South Eastern part of Pete area can be described as
  - A. Cool and wet
  - B. Cool and dry
  - C. Hot and wet
  - D. Hot and dry
4. Three of the following are sources of livelihood in Pete area .Which one is NOT?
  - A. Farming activities
  - B. Fishing activities
  - C. Lumbering activities
  - D. Livestock keeping.
5. The population distribution pattern in Pete area can be described as
  - A. Linear
  - B. Clustered
  - C. Dense
  - D. Sparse
6. The senior most government administrator in Pete area is likely to be;
  - A. County Governor
  - B. Area chief
  - C. County commissioner
  - D. District officer
7. The dominant religion in Pete area is likely to be ,
  - A. Islamic
  - B. Christianity
  - C. Paganism
  - D. Buddhism
8. Below are statements about the migration of a community into Eastern Africa during the pre – colonial period ,
  - i. They entered Eastern Africa between lake Malawi and Indian ocean.
  - ii. They migrated to escape war
  - iii. They migrated from south AfricaThe community described above suits
  - A. The Nyamwezi
  - B. The Chagga
  - C. The Yao
  - D. The Ngoni
9. The main reason for establishment of irrigation schemes in Kenya was to ,
  - A. Increase food production
  - B. Settle the landless people
  - C. Ease population pressure
  - D. Improve people's living standards
10. Children should help parents in taking care of family property mainly because,
  - A. It promotes their performance in school
  - B. It benefits everyone in the family
  - C. It promotes their physical development
  - D. They will be elected prefects in school
11. The main contribution of industries to the economy of Kenya is that they have led to the
  - A. Improvement of infrastructure
  - B. Increase in the number of social amenities
  - C. Establishment of regional trade organizations
  - D. Increase in the amount of foreign exchange
12. Which one of the following tourist attraction in Kenya is also found in Switzerland?
  - A. Coastal beaches
  - B. Hot sunny climate throughout the year
  - C. Beautiful natural scenery
  - D. Variety of wildlife
13. Your classmate Jewel is born of a Kenyan mother and German father .Jewel will be a Kenyan citizen through ;
  - A. Birth
  - B. Dualism
  - C. Naturalization
  - D. Registration
14. One of the major roles of political parties in Kenya is to;
  - A. Monitor the activities of the government
  - B. Choose good leaders for citizens
  - C. Help the ruling party to fight corruption
  - D. Oppose all government projects
15. The Almoravids attacked the kingdom of the Old Ghana in order to
  - A. Become the ruler of the kingdom
  - B. Spread Islamic religion
  - C. Obtain gold and salt .
  - D. Control the trans –Saharan trade
16. Members of parliament are nominated by
  - A. The speaker
  - B. Chief justice
  - C. The president
  - D. Political parties

Use the diagram to answer question 17 and 18



17. The above feature shows the formation of a  
A. Volcanic mountain  
B. Block mountain  
C. Residual mountain  
D. Fold mountain
18. Three of the following are example of the above feature except?  
A. Cape ranges  
B. Atlas mountain  
C. The great kharas  
D. Akwapim Hills
19. The following statements describes a certain hominid  
i. He hunted large animals  
ii. Made tools like hammer, stones and harpoons  
iii. He identified himself with religion  
The hominid described above is  
A. Homo erectus  
B. Homo Habilis  
C. Homo sapiens  
D. Ramapithecus
20. The main reason why Perkerra irrigation scheme was established was to  
A. Create employment  
B. Settle the landless  
C. Increase food production  
D. Control floods in the region
21. Who among the following are in charge of discipline in public primary school.  
A. The head teacher  
B. Deputy head teacher  
C. School committee  
D. School chair person
22. Three of the following re formal requirements of a civil marriage except ?  
A. A marriage Bann of 21 days is given  
B. A marriage fee is given  
C. At least witness are required  
D. A religious leader to bless the marriage.
23. Three of the following were achievement of Haile Selassie. Which one was not?  
A. He introduced a new constitution in his county  
B. He modernized Ethiopia  
C. He was the first president of Ethiopia  
D. He supported liberation movement in Africa.
24. The main factor to consider while locating a furniture industry is  
A. Nearest to ready market  
B. Availability of raw materials  
C. Availability of good means of transport  
D. Availability of cheap labor
25. Which one of the following is not a symbol of national unity  
A. The public seal  
B. The National language  
C. The Natural flag  
D. The coat of Arms
26. Below are conditions necessary for the growing of a certain crop  
i. Heavy well distributed rainfall  
ii. Deep fertile and well drained soils  
iii. Plants should be supported with props  
The crop that grows under the above conditions is  
A. Cocoa  
B. Cloves  
C. Bananas  
D. Pyrethrum
27. Fish farms are well developed in most parts of Japan mainly to  
A. Encourage Japanese to eat fish  
B. Create self employment  
C. Make use of dry land  
D. Encourage high quality fish for export
28. Three of the following statement are true about the commonwealth except?  
A. Membership to the organization is voluntary  
B. It has its head quarter in London  
C. It was formed to promote trade  
D. It organizes a common game for her colonies
29. The lower parts of river Tana were started mainly to  
A. Produce cheap H.E.P  
B. Bring more land under cultivation  
C. Control perennial floods  
D. Attract more tourists in region
30. Three of the following are river lake Nilotes in South Sudan. Which one is Not ?  
A. Alur  
B. Nuer  
C. Shilluk  
D. Anuak

31. A person becomes the speaker of the county assembly in Kenya through;  
 A. Being elected by members of parliament  
 B. Election by members of county assembly  
 C. Election by the county Governor  
 D. Election by registered voters

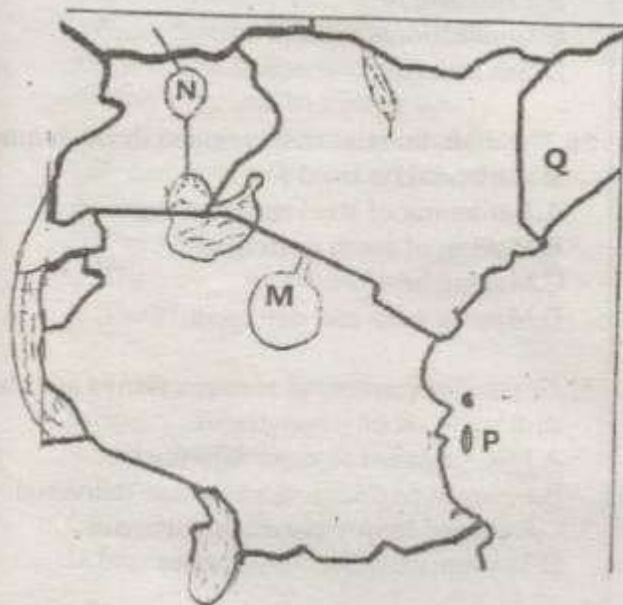
32. The method of conflict resolution that involves going to court is commonly known as  
 A. Arbitration  
 B. Mediation  
 C. Litigation  
 D. Dialogue

33. Which one of the following was a function of a clan elders in traditional African communities  
 A. To provide food to needy families  
 B. To educate the youth about their culture  
 C. To protect the land against invaders  
 D. To treat the sick members of the community

34. The spread of HIV and AIDs has greatly reduced due to  
 A. People are no longer promiscuous  
 B. Change in character among citizens  
 C. Public awareness on dangers of the disease  
 D. Use of ARVs which cures the disease

35. The following are problems affecting poultry farming in Kenya. Which one is the main one?  
 A. Expensive poultry feeds  
 B. Pests and diseases that kills the birds  
 C. Shortage of workers  
 D. Lack of market for poultry products

Use the map to answer question 36 to 39



36. The lake marked N is useful to the economy of Uganda because  
 A. it provides water for H.E.P  
 B. it is a rich fishing ground  
 C. it stores water for irrigation  
 D. it is a great tourist attraction

37. The National park marked M is likely to be:  
 A. Selous  
 B. Malkamari  
 C. Serengeti  
 D. Maasai Mara

38. The main crop grown in the Island marked P is  
 A. Sisal  
 B. Coconut  
 C. Maize  
 D. Cloves

39. Three of the following European power acquired a portion of the country marked P except?  
 A. Germany  
 B. Italy  
 C. France  
 D. Britain

40. Which one of the following factors enables horticultural farming in the Netherlands to be carried out throughout the year?  
 A. Applying fertilizers in the farms regularly  
 B. Growing of crops on reclaimed land  
 C. Growing crops in glass structures  
 D. Supplying water artificially

41. The most serious threat facing equatorial rain forest is?  
 A. Destruction of trees by fire  
 B. Frequent cutting down of trees  
 C. Destruction of trees by animals  
 D. Attack by pests and diseases.

42. The government is encouraging the development of Jua kali industries in Kenya mainly to;  
 A. Enable people to acquire special skills  
 B. To solve the problem of joblessness  
 C. To make Kenya industrialized  
 D. To earn foreign exchange imports

43. Which one of the following method of colonial administration was used by British to administer Northern Nigeria  
 A. Indirect rule  
 B. Assimilation  
 C. Direct rule  
 D. Paternalism

44. The best way to encourage more Kenyans to visit our National parks is by  
 A. Visit areas of interest abroad  
 B. Improving security in the country  
 C. Improving all the poachers

- D.Reducing the park charges
45. One major cause of rural to rural migration is that ;
- A. People are looking for jobs on large farms
  - B. People are looking for more agricultural land
  - C. People are running away from clashes
  - D. People are running away from harsh weather conditions
46. The headquarter of IGAD are located at
- A. Lusaka
  - B. Addis Ababa
  - C. Djibouti
  - D. Abuja
47. When it is day in Kenya it is night in America this is as a result of ;
- A. The rotation of the moon around around the earth
  - B. The revolution of the earth around the sun
  - C. The rotation of the earth on its axis
  - D. The apparent movement of the sun between tropics
48. The main function of the parliament of Kenya is to
- A. Formulate government policies
  - B. Promote national unity
  - C. Control government expenditure
  - D. Supervise government projects
49. Which political party led Ghana to independence in 1957?
- A. Convention people's party [C.P.P.]
  - B. African National congress [ANC]
  - C. United Gold coast convention [UGCC]
  - D. Northern peoples party [NPP]
50. Which one of the following events took place in Kenya in 1992
- A. Kenya becoming mono party
  - B. Holding of multi -party General elections
  - C. Introduction of free primary education
  - D. Introduction of section 2A in the constitution


51. Below are facts about a country
- i. It is landlocked
  - ii. It lie to the North of Equator
  - iii. It is a source of Blue Nile
- The country described above is
- A. Uganda
  - B. Rwanda
  - C. Ethiopia
  - D. South Sudan

52. Europeans were unable to conquer Ethiopia during the scramble for Africa because the
- A. Ethiopians were united under able rulers
  - B. Ethiopians had better weapons
  - C. Ethiopians had inferior weapons
  - D. Europeans were weakened by tropical diseases

53. One effective way of controlling pollution of rivers in Kenya is by ;
- A. Avoiding cultivation in the highlands
  - B. Practicing soil conservation in the highlands
  - C. Building agricultural industries in the highland
  - D. Encouraging farmers to use fertilizers

54. Which of these Bantu communities is found in Namibia ?
- A. Xhosa
  - B. Griqua
  - C. Venda
  - D. Zulu

Use the diagram below to answer question 55



55. The above diagram shows the formation of
- A. Ocean currents
  - B. Land breeze
  - C. Convectional rainfall
  - D. Sea breeze

56. The main mineral that is mined through quarrying at Kariandusi is used for
- A. Hardening of steel and aluminum
  - B. Making of tooth paste
  - C. Making heat insulators
  - D. Making soap and detergent

57. Sugarcane farmers in western Kenya are mainly shifting to other crops due to
- A. low payment to cane delivered
  - B. Delayed payments for the cane delivered
  - C. Reduced crop yield due to diseases
  - D. Inadequate proceeding factors



58. The main reason why Kenyans used force in the fight for independence is

- A. They had strong weapons
- B. The British were harsh and cruel
- C. The British were well united
- D. The British were not willing to negotiate

59. Which one of the following weather instruments is incorrectly matched with its function?

- A. Rain gauge – amount of rainfall
- B. Thermometer – temperature
- C. Wind vane – speed of wind
- D. Barometer – air pressure

60. The following are reasons why Kenyans vote during general elections. Which one is not?

- A. To exercise their democratic right
- B. To elect the new government
- C. To show their loyalty to the president
- D. To elect leaders of their choice.

### CHRISTIAN RELIGIOUS EDUCATION

61. When God created Eve, He gave her the following qualities except?

- A. A provider
- B. A companion
- C. A helper
- D. A procreator

62. Which one of the following statements about Noah is true?

- A. He lived in Sodom and Gomorrah
- B. His wife turned into a pillar of salt
- C. He made a covenant with God
- D. He had a son called Seth

63. Which of the following was included in God's promises to Abraham?

- A. His descendants would have an everlasting kingdom.
- B. His descendants would be blessed by God
- C. His name would be made great
- D. His descendants would be a great Nation.

64. The main reason why the Israelites celebrated the Passover feast is to remember?

- A. Release from slavery in Egypt
- B. The death of the first born of Egypt
- C. Miracles performed by Moses in Egypt
- D. Stubbornness of Pharaoh as a king

65. Moses was not willing to go back to Egypt when he was sent by God mainly because;

- A. He was not a good speaker
- B. He did not want to disappoint Jethro

C. The Israelites did not know him  
D. He was afraid of Egyptian Pharaoh

66. Who among the following was a priest, a judge and a prophet?

- A. David
- B. Samuel
- C. Shamgar
- D. Zachariah

67. Which one of the following sins was committed by King Solomon? He

- A. Took other people's property
- B. Over taxed his subjects
- C. Committed adultery
- D. Gave Israel land to foreigners

68. The following are achievements of King David which one was the greatest?

- A. Killing Goliath the Philistine
- B. Killing all the Israel enemies
- C. Killing a lion and a bear
- D. Bringing back the Ark of the covenant

69. Which prophet prophesied that Jesus would live in Egypt for some time?

- A. Isaiah
- B. Jeremiah
- C. Hosea
- D. Micah

70. When Jesus was presented in the temple, prophetess Ann described him as

- A. Savior of the Jews
- B. Son of God
- C. The lamb of God
- D. Prince of peace

71. The parable of Jesus which teaches Christians to take care of people with special needs?

- A. The mustard seed
- B. The talents
- C. The Good Samaritan
- D. The sower

72. "Blessed are the peacemakers for they:"

- A. Shall see God
- B. Shall be called sons of God
- C. Shall inherit the earth
- D. Shall receive what God has promised

73. The Pharisees and the scribes condemned Jesus for healing on the Sabbath because they thought that

- A. He was breaking the law
- B. He was the son of a carpenter
- C. He was seeking popularity
- D. Jesus was a sinner

74. From the miracle of the healing of the man with a paralyzed hand on a Sabbath day, Christians learn that they should ?  
A. Give help at all times  
B. Work even on the Sabbath day  
C. Pray at all the time  
D. Work miracles on Sabbath day.
75. Pilate washed his hands after trying Jesus to show that.  
A. Jesus was the King of the Jews  
B. He was afraid of the Jesus  
C. He had nothing to do with the case  
D. He was obedient to the Jewish laws
76. The action of Jesus which teaches Christians that there is life after death is  
A. Feeding the hungry  
B. Raising Lazarus back to life  
C. Driving out demons  
D. Dying on the cross
77. Where did Jesus appear to his disciple after resurrection?  
A. Galilee                      B. Jerusalem  
C. Emmaus                      D. Nazareth
78. Christians in the early church received the Holy spirit through,  
A. Baptism in much water  
B. Laying of hands  
C. Reciting the Apostle creed  
D. Singing praises to God
79. Peter raised Dorcas also called Tabitha in town called  
A. Philip                      B. Antioch  
C. Capernaum                      D. Joppa
80. Paul was chosen by God to preach the gospel mainly to the  
A. Jews                      B. Pharisees  
C. Gentiles                      D. Leacons
81. Which one of the following type of worship is common in both Christianity and traditional African religion  
A. Reading the Bible  
B. Reciting creeds  
C. Giving offerings  
D. Celebrating lords supper
82. One of the following is not done during the burial of the dead in traditional African society ?  
A. Offering sacrifices  
B. Acquiring new names  
C. Sharing meals  
D. Performing rituals
83. The birth of a new baby in traditional African communities is welcomed by  
A. Bringing gifts to the mother  
B. Exempting the mother from some duties  
C. Giving the mother special food  
D. Initiating the baby to adulthood
84. Which one of the following is an act of charity?  
A. Performing well in exams  
B. Donating food to orphans  
C. Reporting a crime to the police  
D. Singing in the church choir
85. Blind people learn by the use of  
A. Laptops  
B. Computer  
C. Braille  
D. Sign language
86. The main reason why Christians should obey their leaders is because ,  
A. They represent the president  
B. Are chosen to rule with justice  
C. Help in maintaining peace and order  
D. Are God's representative on earth
87. The best way in which a Christian can use leisure time to serve God is by ?  
A. Taking part in community  
B. Reading the whole Bible  
C. Visiting relatives to check on them  
D. Take part in church choir
88. Chloe ,a class 8 does not want to remove her sweater even when its hot .The best advise to give her is to,  
A. Pray for cold weather to end  
B. Appreciate her body changes  
C. Insist that she is not feeling well  
D. Inform her parents about it
89. Natalie found his classmate picking mangoes from his family farm .As a Christian Natalie should  
A. Take him to his father  
B. Report him to his father  
C. Tell him it is wrong and advice him  
D. Share the mangoes with him
90. The main work of European missionaries was to  
A. Build homes for freed slaves  
B. Teach African new farming methods  
C. Colonies Africans  
D. Teach Africans a new religion.