

www.kcsepdf.co.ke

KCPE MENTOR SERIES 1

www.kcsepdf.co.ke



MENTOR ASSESSMENT EXAM - 2020
CLASS 8
ENGLISH
SECTION (A) LANGUAGE

Time: 1 hour 40 minutes

READ THESE INSTRUCTIONS CAREFULLY

1. You have been given this booklet and a separate answer sheet. The question booklet contains 50 questions.
2. When you have chosen your answer, mark it on the **ANSWER SHEET**, not in the question paper.

HOW TO USE THE ANSWER SHEET

3. Use only an ordinary pencil.
4. Make sure you have written on the answer sheet:
YOUR INDEX NUMBER
YOUR NAME
NAME OF YOUR SCHOOL
5. By drawing a **dark line** inside the correct numbered boxes, mark your full index number. (i.e. School Code Number and the three-figure Candidate's Number) in the grid near the top of the answer sheet.
6. Do not make any marks outside the boxes.
7. Keep your answer sheet as clean as possible and **DO NOT FOLD IT**.
8. For each of the Questions 1 – 50 four answers are given. The answers are lettered A, B, C, D. In each case only **ONE** of the four answers is correct. Choose the correct answer.
9. On the answer sheet the correct answer is to be shown by drawing a dark line inside the box in which the letter you have chosen is written.

Example

Choose the alternative which means the **same as** the underlined word.

21. The plaintiff was given a hearing by the magistrate.
- A. accused
 - B. suspect
 - C. witness
 - D. complainant

The correct answer is D (complainant)

On the answer sheet:

1. [A] [B] [C] [D] 11. [A] [B] [C] [D] 21. [A] [B] [C] [D] 31. [A] [B] [C] [D] 41. [A] [B] [C] [D]

In the third set, the box with the letter D printed in it is marked.

11. Your dark line **MUST** be within the box.
12. For each question **ONLY ONE** box is to be marked in each set of four boxes.

This question paper consists of 7 printed pages.

Read the following passage. It contains blank spaces. For each blank space, choose the best alternative from the given choices.

Paul was a very good artist. He spent ___ 1 ___ much time ___ 2 ___ his work that he had no time to meet ___ 3 ___ people. He ___ 4 ___ not even remember ___ 5 ___ he looked like because he had not ___ 6 ___ himself in a mirror for a long time. The artist ___ 7 ___ that no one was able to draw ___ 8 ___ pictures than ___ 9 ___. His wife knew this and wanted his husband to ___ 10 ___ a lesson. She persuaded him to attend an art show ___ 11 ___ he refused to go. Later, he ___ 12 ___ to her constant nagging and ___ 13 ___ to go. On arrival, he moved from picture to picture saying loudly how bad they were. Soon he stopped in front of a mirror. "Come and see ___ 14 ___ ugly pictures." He said to his wife. "I wonder whether ___ 15 ___ artist wanted to draw a man or a tractor"

- | | | | |
|-----------------|---------------|--------------|-----------------|
| 1. A. too | B. very | C. that | D. quite |
| 2. A. other | B. at | C. by | D. for |
| 3. A. other | B. another | C. more | D. several |
| 4. A. can | B. would | C. should | D. could |
| 5. A. how | B. what | C. which | D. whose |
| 6. A. looked to | B. looked for | C. looked at | D. looked after |
| 7. A. trusted | B. understood | C. believed | D. supposed |
| 8. A. good | B. better | C. best | D. more better |
| 9. A. himself | B. him | C. he | D. he's |
| 10. A. learn | B. know | C. take | D. see |
| 11. A. so | B. since | C. but | D. moreover |
| 12. A. gave out | B. gave in | C. gave up | D. gave off |
| 13. A. agreed | B. accepted | C. admitted | D. meant |
| 14. A. this | B. Accepted | C. admitted | D. that |
| 15. A. an | B. any | C. the | D. such |

For question 17, 18 and 19, choose the best alternative to fill in the blank spaces.

16. Dan pays school fee for his daughters, _____?
 A. Doesn't he
 B. Did he
 C. Does he
 D. Didn't he
17. The guest have not gone home, _____?
 A. is it
 B. haven't they
 C. isn't it
 D. have they
18. Write the direct speech.
 My elder brother said that he did not understand why people smoked.
 A. "I did not understand why people smoked," My elder brother said.
 B. "He does not understand why people smoke," My elder brother says.
 C. "I do not understand why people smoke," My elder brother said.
 D. "Why do people smoke? I do not understand" My elder brother said.
19. Neither Mary nor her best friend attended the ceremony.
 A. Both of them attended the ceremony
 B. Mary and her friend did not attend the ceremony
 C. None of them attended the ceremony
 D. Mary attended the ceremony
20. Meda bought a _____ skirt.
 A. Circular, silk, short
 B. Short, circular, silk
 C. Silk, short, circular
 D. Circular, short, silk
21. Kamau, _____ house collapsed was not hurt.
 A. Who
 B. Who's
 C. Whose
 D. Which
22. I don't think I can tolerate his behavior much longer.
 A. Put up with
 B. Put out with
 C. Put down with
 D. Put off with
23. He is as tall as _____
 A. Me
 B. Am
 C. I
 D. Am I
24. Paul chose to play netball, _____ he is good at it.
 A. Though
 B. And
 C. But
 D. Because
25. Choose the correct sentence.
 A. Don't come late; if you do, you will miss the fun
 B. Mary bought apples, oranges and pears
 C. Mercy gave us chocolate; buns; sweets
 D. Juma made, the cake, we decorated

Choose the correct alternative to complete the sentences below

20. Meda bought a _____ skirt.
 A. Circular, silk, short
 B. Short, circular, silk
 C. Silk, short, circular
 D. Circular, short, silk

Read the passage below and answer question 26-38

Drug abuse is the leading cause of crime as well as an effect of indiscipline among young people. There are many reasons why many youths abuse drugs. These include poor parental guidance, peer pressure and readily available drugs. Some of the commonly abused drugs are alcohol, tobacco, marijuana and brown sugar.

School children deceive their parents and teachers by adding alcohol to soft drinks. Some even inject drugs into oranges and other fruits. Fortunately, teachers and parents have discovered these tricks. Therefore, many schools do not allow children to bring drinks even water schools. Those parents who do not understand blame the teachers for what they consider unfair treatment to their children. Some parents transfer their children from one school to another only to discover by talking to other parents that they are sailing in the same boat. This realization has made many parents opt for day schools.

The most common effects of drugs abuse include; school drop-out, irresponsible sexual behavior, pregnancy and crime. Other addicts run out of money and take up petty jobs like prostitution, as a means to buy the drugs abuse. The most important step is for parents and teachers to guide children on good morals and social values. In order to achieve this, lessons on parenting, guidance and counseling should be offered to both parents and teachers.

- | | |
|--|--|
| <p>26. According to the passage, which one of the following is not a cause of drug abuse?</p> <p>A. Availability of drugs
B. Media advertisement
C. Poor parental guidance
D. Peer pressure</p> <p>27. The phrase <u>as well as</u> has been used in the passage. What does it mean?</p> <p>A. In addition to
B. Therefore
C. Together with
D. Too well</p> <p>28. What reason would make a pupil to add alcohol to a fruit?</p> <p>A. To add taste
B. To change color
C. To deceive parents
D. To preserve it</p> | <p>29. "Fortunately, teachers and parents have discovered this trick "what is this trick?"</p> <p>A. Sharing drinks
B. Drinking alcohol in school
C. Carrying fruit juice to school
D. Adding alcohol to soft drinks</p> <p>30. The word <u>commonly</u> has been used in the passage to mean.</p> <p>A. There are other drugs
B. These are the most abused drugs
C. The drugs are not named
D. There are no other drugs abused</p> <p>31. Which one of the following is not an effect of abusing alcohol?</p> <p>A. Irresponsible sexual behavior
B. Drug addiction
C. Unwanted pregnancies
D. Premature marriage</p> |
|--|--|

32. According to the passage ,what do the drug addict do when they run out of money.
- A. Do petty jobs
 - B. Drink alcohol
 - C. Drink tea
 - D. Beg in street
33. Which one of the following is not a commonly abused drugs?
- A. Marijuana
 - B. Alcohol
 - C. Tea
 - D. Tobacco
34. The word deceive as used in the passage could be replaced by
- A. Abuse
 - B. Fighter
 - C. Encourage
 - D. Tobacco
35. Why do some parents blame teachers for what they consider unfair treatment of their children?
- A. Lack of understanding
 - B. Transfer of children to other schools
 - C. By taking to other parents
 - D. Opting for day schools
36. Why must contribute towards eradication of drug abuse according to the passage?
- A. Teachers
 - B. Everybody
 - C. Parents
 - D. Pupils
37. Why do many schools not allow children to bring drinks, even water to school?
- A. They are available in school
 - B. Parents cannot afford the drinks
 - C. Children abuse drugs using the drinks
 - D. They have many other things to carry
38. The best title for the passage would be
- A. Cause of drug abuse
 - B. HIV/AIDS and drug
 - C. Effects of drugs abuse
 - D. Drug abuse

Read the passage below and then answer the questions 39-50

Along time ago, it became very cold in the land of animals.

Hare felt cold and shivered terribly. He needed the blanket to keep himself warm. He went to tortoise who was the blanket maker. "Make me a heavy a heavy warm blanket," hare said. "Come next year. I have five blankets to make for other people," Tortoise said as he happily threaded a blanket at a snail's place.

" I might as well make the blanket myself. Give me the thread." Hare said impatiently. "Please yourself," tortoise said calmly. Hare grabbed a ball of blanket thread and ran off. When he got home, he realized that he had no idea of how to make a blanket. As he wondered what to do, he remembered he had seen leopard's wife making blankets for her children. so he thought of a plan.

He went and hid in the thicket near leopard's house and kept watch. When leopard and his wife were not at home, hare walked into the compound. He gave the leopard's child and thundered. "Tell your mother, the king wants her to make a blanket for him in three days!" when leopard and his wife came home, the child said, "Mother, you must make the blanket quickly." "Which blanket?" "Leopard's wife asked, surprised.

The king blanket! "the child said excitedly. " The king himself brought this thread. He wants the blanket made very quickly. Leopard's wife wondered how king lion would have come to her homestead instead of sending one of his subjects. However being an obedient woman that she was known to be, leopard's wife started making the blanket for the king. She finished making the blanket and waited for the king to come for it but he never did. After waiting for a long time, she decided to venture into a nearby forest to look for food. "Immediately the king appears,"she instructed her child," Whistle loudly. I will rush back to give him the blanket." Leopard's wife hardly stepped out of the compound when hare jumped right in front of the child and demanded, "Give me the blanket!" Leopard's child fearfully ran into the house and brought out the blanket. Just then leopard's wife who had seen Hare jump into the compound grabbed hare as he tried to run off with the blanket. Hare managed to escape but he was without the blanket and he had lost one year.

39. Why did hare shiver terribly?
- He had no blanket
 - It was very cold
 - Tortoise needed a whole year to make him a blanket
 - He was only pretending
40. According to the passage hare can be described as
- Quick and rude
 - Impatient and impolite
 - Hasty and quick
 - Impolite and incooperative
41. At a "snail's pace," in the passage means
- Very slowly
 - At a speed of a snail
 - Moving the way the snail does
 - Behaving like a snail
42. Why could tortoise not make a blanket for hare, immediately?
- He could only work at a snail's pace
 - He wanted hare to make the blanket himself
 - He had five other blankets to make
 - He did not want to make a blanket for the hare
43. How can you tell that hare was not as clever as he pretended to be?
- He discovered he did not know how to make a blanket
 - He did have the needle and thread to make the blanket
 - He went to tortoise for help
 - He pretended to be the king of the animals

44. Why did hare have to wait until leopard and his wife had left their home?
- A. They wanted to catch and kill him for food
 - B. He wanted to frighten leopards child
 - C. Leopard had gone to the bush to look for food
 - D. He did not want them to recognize him
45. What made leopard's child think that hare was the king?
- A. Only kings would demand that thing to be done for them
 - B. Hare told the child, he was the king
 - C. Everybody knew that hare was the king
 - D. He had a crown
46. The word "subjects" as used in the passage refers to
- A. Things like science, mathematics and English
 - B. Someone who is being discussed
 - C. Making someone to do unpleasant things
 - D. People under the control of the king
47. Which of the following best describes leopard's wife?
- A. Meek, obedient and foolish
 - B. Aggressive, quick and foolish
 - C. Obedient, quick and foolish
 - D. Clever, forgetful and meek
48. Why did leopard's wife go to the forest?
- A. She had decided not to wait any longer
 - B. There was more food in the house
 - C. She wanted to hide in order to catch hare
 - D. She went to look for food
49. Why did leopard's wife instruct the child to whistle when the king arrived?
- A. She wanted to catch hare and punish him
 - B. She wanted to present the blanket to the king
 - C. She wanted to meet the king
 - D. She feared that the king might punish her
50. Why did leopard's child not whistle when hare came for the blanket?
- A. He was a disobedient child
 - B. He forgot to whistle
 - C. Hare jumped right in front of him
 - D. He was frightened of hare



MENTOR ASSESSMENT EXAM - 2020

CLASS 8

ENGLISH

SECTION (B) COMPOSITION

Time: 40 minutes

INDEX NUMBER	
YOUR NAME	
NAME OF YOUR SCHOOL	

READ THESE INSTRUCTIONS CAREFULLY

1. In the spaces given above, write your Index Number, Your Name and Name of your School.
2. Now open the page. Read the heading of the composition carefully and write your composition in the given spaces.

This Question Paper consists of 4 printed pages.

Turn Over

The following is the beginning of a story. Complete the story, making it as interesting as you can.

The December holiday was very different from what we had expected. Everything looked as usual but.....

Blank lined area for writing the story completion.



MTIHANI WA KUTATHMINI WA MENTOR - 2020

DARASA LA 8 KISWAHILI (LUGHA)

Muda: Saa 1 dakika 40

MAAGIZO KWA WATAHINIWA

SOMA MAAGIZO YAFUATAYO KWA MAKINI

1. Umepewa kijitabu hiki cha maswali na karatasi ya kujibia. Kijitabu kina maswali 50.
2. Ukiisha kuchagua jibu lako, lionyeshe katika **KARATASI YA MAJIBU** na wala sio katika kijitabu hiki cha maswali.

JINSI YA KUTUMIA KARATASI YA MAJIBU

3. Tumia penseli ya kawaida.
4. Hakikisha kwamba umeandika yafuatayo katika karatasi ya majibu.
NAMBA YAKO YA MTIHANI
JINA LAKO
JINA LA SHULE YAKO
5. Kwa kuchora kistari katika visanduku vyenye namba zinazokubusu, onyesha namba yako kamili ya mtihani (yaani namba ya shule, na zile namba tatu za mitahiniwa) katika sehemu iliyotengwa mwanzoni mwa karatasi ya majibu.
6. Usitie alama zozote nje ya visanduku.
7. Iweke safi karatasi yako ya majibu na usiikunje.
8. Kwa kila swali 1-50 umepewa majibu manne. Majibu hayo yameonyeshwa kwa herufi A, B, C, D. Ni jibu **MOJA** tu kati ya hayo manne ambalo ni sahihi. Chagua jibu hilo.
9. Kwenye karatasi ya majibu, jibu sahihi lionyeshe kwa kuchora kistari katika kisanduku chenye herufi uliyochagua kuwa ndilo jibu.

Mfano

Katika kijitabu cha maswali:

20. Kanusha.

Kujali kwangu kumenisaidia

- A. kutojali kwangu kutomenisaidia
- B. kutojali kwangu kujanisaidia
- C. kutojali kwangu hakujanisaidia
- D. kujali kwangu kutomenisaidia

Jibu sahihi ni C

Katika karatasi ya majibu:

1. [A] [B] [C] [D] 10. [A] [B] [C] [D] 20. [A] [B] [C] [D] 30. [A] [B] [C] [D] 40. [A] [B] [C] [D]
katika visanduku vinavyoonyesha majibu ya swali namba 20, kisanduku chenye herufi C ndicho kilichochoywa kistari.
10. Chora kistari chako vizuri. Kistari chako kiwe cheusi na kisijitokeze nje ya kisanduku.
11. Kwa kila swali, chora kistari katika kisanduku kimoja tu kati ya visanduku vinne ulivyopewa.

Soma vifungu vifuatavyo. Vina nafasi 1 mpaka 15. Kwa kila nafasi umepewa majibu manne hapo chini. Chagua jibu lifaalo zaidi kati ya yale uliyopewa kujaza kila pengo.

Ni jukumu _____ 1 _____ kila mzazi kama mlezi _____ 2 _____ wajibu wake _____ 3 _____
_____ 4 _____ tunapona baadhi yao _____ 5 _____ watoto wao _____ 6 _____ wenyewe. Kwa
jumla jamii inafaa _____ 7 _____ ipasavyo. Hamna haja kufurahia unapomwona _____ 8 _____ wa jirani
akipotea njia.

Walimu na wenye _____ 9 _____ ni _____ 10 _____ chema katika jamii. Wana uwezo wa kubadili
mambo yanapozidi unga. Tuungane pamoja kwa kuwa _____ 10 _____.

1. A. wa B. ya C. la D. za
2. A. kutelekeza B. kutekeleza C. kuelekeza D. kuteleza
3. A. ipasvyo B. inavyopaswa C. itakavyopaswa D. ilivyopaswa
4. A. itasikitisha B. ilisikitisha C. husikitisha D. inasikitisha
5. A. wakiwapotosha B. wakiwatosha C. wakwaelekeza D. wakiwatunza
6. A. kwenyewe B. vyenyewe C. yenyewe D. wenyewe
7. A. kujumuika B. kujulikana C. kuwajibika D. kutengana
8. A. mzazi B. daktari C. mtoto D. seremela
9. A. hedhi B. hadhi C. hari D. hamu
10. A. kielekezi B. kilelezo C. vielelezi D. kielelezo
11. A. Mcheka kilema hafi hakijamfika
B. ukiona vyaalea jua vimeundwa
C. Haba haba hujaza kibaba
D. umoja ni nguvu utengano ni udhaifu

Waridi alifika darasani mapema siku hiyo, aliitoa shanta yake aliyokuwa _____ 12 _____ mgongoni.
Baadaye alijiunga na wenzake kwa kuwa alipenda _____ 13 _____ na kila mtu. Mwalimu aliingia
na akaanza kufunza _____ 14 _____, yaani maneno yanayotatanisha yanapotamkwa. Hicho kilikuwa
kipindi _____ 15 _____ kujifunza msamiati.

12. A. ameitwika B. amciangata C. ameipakata D. ameieleka
13. A. kutengana B. kutangamana C. kutangana D. kukaa
14. A. visawe B. vitawe C. vitate D. vitenzi
15. A. la B. vya C. cha D. za

Kuanzia swali la 16 hadi 30. jibu kila moja kulingana na maagizo uliyopewa.

16. Chagua mapambo ambayo huvaliwa miguuni pkee.
- kipini, furungu
 - Usinga, udodi
 - Jebu, kikero
 - Furungu, udodi
17. Kutokana na nomino safari tunapata nomino zifuatazo isipokuwa.
- Usafiri
 - Msafiri
 - Kusafiri
 - Safiri
18. Tambua aina ya maneno yaliyopigwa mstari katika sentensi hii:
- Natasha alirudisha karatasi tatu afisini.
- Kivumishi nomino
 - Kivumishi kiunganishi
 - Kielezi, kivumishi
 - Kivumishi, kielezi
19. Chombo cha chuma kilichofungwa kamba cha kupimia usawa wa ukuta unaojengwa ni _____?
- nyundo
 - randa
 - timazi
 - patasi
20. Kitenzi, 'ogopa,' katika kauli ya kutendesha ni _____.
- ogopwa
 - ogofya
 - ogopeana
 - ogopeshana
21. Mtu anayefanya kazi ya kufua vyuma huitwa.
- Mhunzi
 - Mjume
 - Mjumu
 - Mnajimu
22. Badili sentensi ifuatayo katika wingi.
- Chuma kilichovunjika kiliwekwa nyuma ya pazia.
- Vyuma vilivyovunjika viliwekwa nyuma ya mapazia.
 - Chuma zilizovunjika ziliwekwa nyuma ya pazia.
 - Vyuma vilivyovunjika viliwekwa nyuma ya pazia.
 - Machuma yaliyovunjika yaliwekwa nyuma ya mapazia.
23. Ukigawanya thuluthi ya nyanya mara tatu sawa utapata?
- Khumusi
 - Tusui
 - Nusu
 - Sudusi
24. Chagua sentensi iliyoakifishwa vizuri.
- Salale, motto amesahau njia ya kwao?
 - Je? Unamfahamu Bwana. Musa.
 - Tulinunua vifaa vifuatavyo: dawa, rangi, mswaki na kalamu.
 - Huree? Wachezaji walishagilia!
25. Chagua sentensi iliyo na maelezi sahihi.
- Halati ni kaka wa mama.
 - Mtoto wa kaka au dada ni mpwa.
 - Ami ni jina wanaloitana kaka na dada.
 - Wifi ni dada wa mama.

26. Nomino 'ufa, utete, ukuti na ura' hupatikana katika ngeli ipi?

- A. U-U
- B. U-YA
- C. U-ZI
- D. U-I

27. Chagua tamathali ya usemi iliyotumika katika sentensi ifuatayo.

Siku hizi Juma amemea pembe hasikii mawaidha ya walimu

- A. methali
- B. nahau
- C. tanakali ya sauti
- D. Kinaya

28. Kanusha sentensi ifuatayo:

Simu iliyonunuliwa imeharibika.

- A. Simu isiyonunuliwa haikuharibika.
- B. Simu iliyonunuliwa haijharibika.
- C. Simu isiyonunuliwa haitaharibika.
- D. Simu isingenunuliwa isingeharibika.

www.kcsepdf.co.ke

29. Mtu anayehamia katika nchi nyingine na kufanya makao huko huitwa _____

- A. mkimbizi
- B. mtalii
- C. mlowezi
- D. msaliti

30. Geuza sentensi ifuatayo katika hali ya udogo.

Mzee alipiga ngoma kwenye mji.

- A. Zee lilipiga goma kwenye jiji.
- B. Vizee vilipiga vigoma kwenye vijiji
- C. Kizee kilipiga kigoma kwenye kijiji.
- D. Mzee alipiga kigoma kwenye jiji.

Soma kifunzi kifuatacho kisha ujibu maswali 31 mpaka 40

Maliasili ni mali ambayo hutokana na maumbile katika mazingira. Kenya imejaliwa maliasili mengi ambayo tunategemea katika uchumi wetu. Tunajivunia mlima Kenya ambao ndio mlima wa pili kwa urefu barani Afrika. Isitoshe mlima huu pia huwa na theluji ambayo huajabisha.

Pia tunalo ziwa Viktoria ambalo ndilo ziwa kubwa zaidi barani Afrika.

Mbali na hayo, pia tunao wanyama pori. Wanyama hawa wamewekwa katika mbuga za wanyama kama vile, Mara, Amboseli na Tsavo.

Mbuga ya Mara huvutia watalii ambao huja kushuhudia mamia ya nyumbu wanapovuka mto Mara kuelekea Serengeti.

Tunayo mito katika kila pembe ya nchi. Jamii zinazoishi karibu na mito hufaidika kwa uvuvi na unyunyuzaji maji mimea yao. Isitoshe, maji kutoka mito hii huzalisha nguvu za umeme. Hakuna bamvua isiyo na usubi. Hasara na maafa makubwa hutokea hasa msimu wa masika mito inapovunja kingo zake.

Bahari ya Hindi pia huvutia watalii wengi wa nje na ndani. Watalii hawa hufika pwani kijivinjari na kujiburudisha, shughuli za uvuvi na biashara ya hoteli hunoga na wengi hupata riziki.

Misitu yetu nayo imesheheni miti ya kiasili na ya kupandwa. Miti hii huwa malighafi ya kutengenezea samani,mbao,makaa,karatasi,miongoni mwa vitu vingine. Wanyama,ndege na wadudu wengi hupata mkazi na lishe kutoka mitini. Licha ya hayo miti husafisha hewa na huvutia mvua ambayo hukuza mimea na wakenya hupata lishe.

Kwa kweli tusipotunza mali hayo ya asili tuliyotunikiwa na Mola tutakuja kujuta baadaye. Tuwajibike kwa kujivunia na kuhifadhi urembo wa taifa letu.

31. Kulingana na ufahamu,Mali ya asili ni:

- A. Mali ya wazazi
- B. Wanyama pori na Bahari Hindi
- C. Mali yanayoleta watalii katika uchumi wetu.
- D. Mali ambayo hutokana na maumbile katika mazingira

32. Kulingana na kifungu, kuwa watalii huja mara _____ ?

- A. Kuburudika
- B. Kuogelea
- C. Kushuhudia nyumbu wanapovuka mto Mara.
- D. Kuchimba madini

33. Kwa mujibu wa kifungu:

- A. Mlima Kenya ndio mrefu zaidi duniani.
- B. Ziwa Viktoria ndilo ziwa la pili kubwa barani Afrika.
- C. Mara, Aboseli na Tsavo ndizo mbuga pekee nchini.
- D. Theluji kwenye kilele cha mlima Kenya huajabisha.

34. Faida za miti zilizotajwa katika ufahamu ni zifuatazo isipokuwa

- A. Kuunda samani
- B. Kuchoma makaa
- C. Kunadhifisha hewa
- D. Kuvutia mvua.

35. Neno masika lina maana gani kama lilivyotumiwa kwenye kifungu?

- A. Msimu wa mvua nyingi
- B. Msimu wa jua kali
- C. Kipindi cha uangukaji ya majani ya mti huanguka
- D. Hali ya nchi kuwa kavu

36. Kulingana na ufahamu watalii wanaozuru pwani:

- A. Hutoka ughaibuni pekee
- B. Hutoka ughaibuni na humu nchini
- C. Hutoka humu nchini pekee
- D. Hutoka ughaibuni wengi kama watokao Kenya

37. Watalii wanapofika pwani:

- A. Watu husherehekea
- B. Watu huteseka kwa kukosa kazi
- C. Biashara ya hoteli hunoga
- D. Watu wengi hukosa ajira.

38. Neno, 'riziki' lina maana gani kama lilivyotumiwa kwenye kifungu?

- A. Kutokuwa na kazi
- B. Kujikinga wakati wa mvua
- C. Mnyama anaishi msituni
- D. Mapato yatokanayo na kazi.

39. Chagua methali ilivyo na maana sawa na, 'hakuna barnvua isiyo na usubi,' kama ilivyotumiwa kwenye kifungu.

- A. Mwiba wa kujichoma huambiwi pole
- B. Mtaka cha mvunguni sharti ainame
- C. Hakuna mchele unaokosa ndume
- D. Mtaka yote hukosa yote

40. Chagua kichwa mwafaka cha kifungu hiki:

- A. Mazingira
- B. Watalii
- C. Wanyama pori
- D. Mali asili

Soma kifungu kifuatacho kisha ujibu maswali 41 mpaka 50

Maimuna alisimama kwenye roshani huku akiwaza na kuwazua. Alikilaumu kifo kilichouchukua uhai wa mama yake Zainabu. Machozi yalimtiririkia hasa alipokumbuka mateso aliyoyapitia mkononi mwa jamaa zake. Kutilia msumari moto kwenye kidonda, mwajiri wake alimwona kama punda.

Alizama zii katika mawazo yaliyomzunguka kama pia. Ghafila alianguka kwenye karai lililojaa nguo na kupoteza fahamu. Mwajiri wake alimfokea kwa kuwa alikuwa anachezea karai na kupoteza wakati.

Maimuna aliyapitia mateso ya kupokea kichapo cha mara kwa mara na kunyimwa chakula na hata upendo. Alichukiwa na familia ya mwajiri wake kiasi cha kumtendea mabaya yote. Asiye na wake ana Mungu. Siku moja Maimuna alipata nafasi ya kutoka nje ya lango la mwajiri wake. Siku hiyo alijihisi kama mfungwa aliyenusurika kutoka gerezani. Alitembea pasi na kujua alikokuwa akielekea bora tu ameyaondokea masaibu yaliyomsibu na kumnyima raha nyakati zote.

Baada ya kutembea kwa masafa marefu, alichoka akaregea kama utumbo wa samaki. Alijitoma katika hoteli moja na kuagiza chakula bila kijua angelipa na nini au ni nani angemlipia. Alipomaliza kula mhudumu alimkazia macho Maimuna na kudai malipo. Hapo kizaazaa kikazuka kama mzuka.

Pembeni aliketi mwanaume wa makamo aliyesitisha ugomvi na kulipa ile bili yote. Kwa kuwa Maimuna alikuwa amebalehe alikubali ombi la mwanaume huyo na akaandamana naye hadi kwake. Baada ya kipindi cha miaka mitatu ya kuchumbiana walifunga pingu za maisha na wakaishi maisha ya kutamanika.

41. Chagua maan ya neno, 'roshani,' kama ilivyotumiwa katika kifungu

- A. Sehemu ya kufulia nguo
- B. Sehemu iliyojitokeza mbele ya nyumba hasa ghorofa
- C. Sehemu iliyotengenezwa kuanikia nguo
- D. Sehemu maalum katika bafu

42. Ni kwa nini Maimuna alitirikwa na machozi

- A. Aliteswa na jamaa zake
- B. Mawazo ya kifo cha mama yake
- C. Alichapwa na mwajiri wake
- D. Kunyimwa chakula na mwajiri wake

43. Mateso aliyoyapitia Maimuna ni pamoja na;
- Kufiwa, kuchapwa na kukaziwa macho
 - Kunyimwa chakula, kupokea kichapo na kuchukiwa
 - Kutopendwa, kuzwa na kufanyishwa kazi
 - Kuwa mfungwa, kutokula na kuchapwa
44. Chagua tamathali gani iliyotumika katika sentensi ifuatayo:
- Alichoka akaregea mithili ya utumbo wa samaki.
- Chuku
 - Isitiara
 - Nahau
 - Tashbihi
45. Kwa mujibu wa kifungu, Mwanaume aliyeketi pembeni alikuwa mwenye?
- Mkali
 - Ujasiri
 - Mwerevu
 - Ukaidi
46. Maimuna alikuwa amebalehe. Hii ina maana kuwa?
- alikuwa amekasirika
 - alikuwa mnono
 - alikuwa amekomaa
 - alikuwa ameteseka
47. Chagua methali ambayo haiwezi kulinganishwa na Maisha ya maimuna.
- Baada ya dhiki ni faraja
 - Subira huvuta heri
 - Mwenda tezi na omo marejeo ni ngamani
 - Kalamu ya Mungu haikosi
48. Ukweli wa methali 'Asiye na wake ana Mungu,' ulidhihirika wakati?
- Maimuna alipokula chakula katika hoteli
 - Maimuna alipotoroka na kwenda zake
 - Maimuna alipolipiwa chakula
 - Maisha ya Maimuna yalipobadilika na kuwa mazuri
49. Chagua kauli isiyokuwa sahihi kulingana na kifungu.
- Maimuna hakuwa na mtu wa kutegemea kama mzazi
 - Hatimaye maisha ya Maimuna yalichukua mkondo mpya
 - Uamuzi wa Maimuna ulimletea maafa zaidi
 - Uvumilivu wa Maimuna ulizaa matunda
50. Kichwa mwafaka zaidi cha taarifa uliyoisoma ni kipi?
- Haki za watoto
 - Masaibu ya Zainabu
 - Mwajiri katili
 - Mawimbi ya maisha ya Maimuna.



MTIHANI WA KUTATHMINI WA MENTOR 2020

DARASA LA 8

KISWAHILI

SEHEMU YA PILI: INSHA

Muda: Dakika 40

NAMBA YAKO YA MTIHANI	
JINA LAKO	
JINA LA SHULE YAKO	

SOMA KWA MAKINI MAAGIZO YAFUATAYO

1. Kwenye nafasi zilizoachwa hapo juu andika namba yako kamili ya mtihani, Jina lako na Jina la Shule yako.
2. Sasa fungua karatasi hii, soma kichwa cha Insha kwa makini na uandike Insha yako kwenye nafasi uliyoachiwa.

Kijitabu hiki cha maswali kina karatasi 4 zilizopigwa chapa.

Fungua Ukurasa

Darasa la Nane Insha



MENTOR ASSESSMENT EXAM - 2020
CLASS 8
MATHEMATICS
Time: 2 Hours

READ THESE INSTRUCTIONS CAREFULLY

1. You have been given this booklet and a separate answer sheet. The question booklet contains 50 questions.
2. When you have chosen your answer, mark it on the **ANSWER SHEET**, not in the question paper.

HOW TO USE THE ANSWER SHEET

3. Use only an ordinary pencil.
4. Make sure you have written on the answer sheet:
YOUR INDEX NUMBER
YOUR NAME
NAME OF YOUR SCHOOL
5. By drawing a **dark line** inside the correct numbered boxes mark your full index number (i.e. School Code Number and the three-figure Candidate's Number) in the grid near the top of the answer sheet.
6. Do not make any marks outside the boxes.
7. Keep your answer sheet as clean as possible and **DO NOT FOLD IT**.
8. For each of the Questions 1 – 50 four answers are given. The answers are lettered A, B, C, D. In each case only **ONE** of the four answers is correct. Choose the correct answer.

9. On the answer sheet the correct answer is to be shown by drawing a dark line inside the box in which the letter you have chosen is written.

Example

11. The perimeter of a square is 256 cm. What is its area?

- A. 64 cm²
- B. 4096 cm²
- C. 16 cm²
- D. 256 cm²

The correct answer is **B**

On the answer sheet:

1. [A] [B] [C] [D] 11. [A] [C] [D] 21. [A] [B] [C] [D] 31. [A] [B] [C] [D] 41. [A] [B] [C] [D]

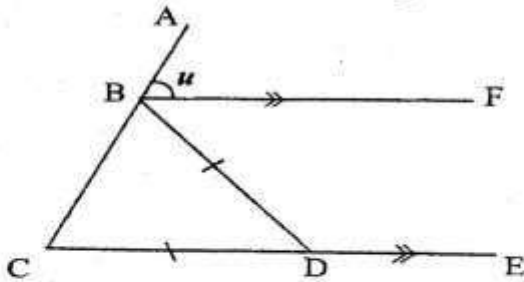
In the second set, the box with the letter **B** printed in it is marked.

10. Your dark line **MUST** be within the box.
11. For each question **ONLY ONE** box is to be marked in each set of four boxes.
This Question Paper consists of 7 printed pages.

1. Which one of the following numbers is eight million, seventy six thousands, two hundred and five in symbols?
 - A. 8,760,205
 - B. 8,075,205
 - C. 8,076,205
 - D. 876,205
2. What is the number 499,889 rounded off to the nearest thousands?
 - A. 500,000
 - B. 490,000
 - C. 499,000
 - D. 499,800
3. What is the next number in the pattern? 7, 9, 12, 17, 24, _____.
 - A. 28
 - B. 33
 - C. 35
 - D. 36
4. What is the value of $\frac{4^2 - 6}{5} + 4$?
 - A. $2\frac{4}{5}$
 - B. $4\frac{2}{5}$
 - C. $4\frac{4}{5}$
 - D. 6
5. What is the value of 0.51×4.8 ?

A. 0.2448	B. 2448
C. 24.48	D. 2.448
6. What is the value of $\frac{2}{3}(1\frac{1}{2} + \frac{1}{4} \div \frac{1}{6}) + \frac{5}{6} + 1\frac{5}{6}$?
 - A. $2\frac{5}{11}$
 - B. $1\frac{6}{11}$
 - C. 3
 - D. $4\frac{2}{3}$
7. A rectangular container 100cm long, 60cm wide and 80cm high is filled with water up to the level of 50cm. What is the volume of the empty space?
 - A. 480,000cm³
 - B. 180,000cm³
 - C. 300,000cm³
 - D. 240,000cm³
8. How many groups of hundreds are in the total value of digits 4 in the 2,498,635?
 - A. 400,000
 - B. 40,000
 - C. 4000
 - D. 400
9. A triangular plot measuring 17.5m, 15m and 25.5m was fenced using posts spaced at 2m. How many posts were used?
 - A. 58
 - B. 116
 - C. 30
 - D. 29
10. Work out $(3\frac{1}{2})^2 + \sqrt{6\frac{1}{4}}$
 - A. $14\frac{3}{4}$
 - B. $12\frac{1}{2}$
 - C. $13\frac{3}{4}$
 - D. $10\frac{3}{4}$
11. Which of the following is the greatest number that can divide 72, 96 and 108 without a remainder?
 - A. 24
 - B. 12
 - C. 18
 - D. 36

12. In the figure below ABC and CDE are straight lines. $BD=CD$ and angle $BDE=106$.



What is the value of the angle marked U.

- A. 53
B. 32
C. 74
D. 37
13. A baby slept at 10.20pm on Monday and woke up on Tuesday at 6.15am. How long did the baby sleep?
A. 7hrs 55min
B. 16hrs
C. 5hrs 15
D. 4hrs 05min
14. What is $17 \div 3$ correct to the nearest hundredths?
A. 0.18
B. 0.176
C. 5.667
D. 5.67
15. Construct triangle XYZ in which line $YZ=6\text{cm}$ angle $XYZ=60^\circ$ and angle $ZXY=65^\circ$. What is the length of line XZ
A. 5.3cm
B. 6.8cm
C. 5.7cm
D. 6cm
16. James paid sh 1710 for an item after being given a 5% discount, how much less could he have paid if he was given 8% discount?
A. 54
B. 90
C. 1656
D. 144

17. Three bells ring at interval of 12 seconds, 15 seconds and 18 seconds. If the bells rang at 8:30 am, what time will they ring together again for the third time.

- A. 8:33 am
B. 8:30 am
C. 8:39 am
D. 8:36 am

18. Wanjiru bought a radio on hire purchase terms by paying a deposit of 8000. He paid the remaining amount in equal monthly installment of sh 1500 each. For how many months did she pay the balance if she finally paid a total sum of 20,000?

- A. 8
B. 12
C. 6
D. 15

19. A farmer had 120 cows, 80 goats, 70 sheep and 90 camels. If a pie chart is drawn to represent this information, what angle would represent the number of Camels?

- A. 120°
B. 80°
C. 70°
D. 90°

20. Below are statement of a certain quadrilateral

- i) All sides are equal
ii) Diagonals bisect each other at 90°
iii) Diagonals are not equal
iv) Opposite sides are equal and parallel

What quadrilateral described above

- A. Rhombus
B. Rectangle
C. Parallelogram
D. Square

21. The table below shows number of litres of milk delivered to a milk dairy in a week.

Days	Mon	Tue	Wed	Thur	Fri	Sat
Litres delivered	45	42	41	50	40	30

On which two consecutive days was delivery highest?

- A. Monday, Thursday
- B. Tuesday, Wednesday
- C. Wednesday, Thursday
- D. Friday, Saturday

22. The fraction $\frac{2}{5}$, $\frac{4}{9}$, $\frac{1}{2}$ and $\frac{3}{7}$ have to be arranged from the smallest to the largest.

Which of the following is the correct order?

- A. $\frac{1}{2}$, $\frac{4}{9}$, $\frac{3}{7}$, $\frac{2}{5}$
- B. $\frac{4}{9}$, $\frac{3}{7}$, $\frac{2}{5}$, $\frac{1}{2}$
- C. $\frac{1}{2}$, $\frac{2}{5}$, $\frac{3}{7}$, $\frac{4}{9}$
- D. $\frac{2}{5}$, $\frac{3}{7}$, $\frac{4}{9}$, $\frac{1}{2}$

23. What is the value of $\frac{2x^2 - 3(y - z)}{y - z}$ where $x=3$, $y=8$ and $z=y-3$

- A. 12
- B. 4
- C. 8
- D. 6

24. Carzola, Giroud and Ozil scored goals for their team. Carzola scored 2 less goals than Giroud who scored twice as many goals as Ozil scored. What was their total goal score if ozil scored g goals.

- A. $4g+2$
- B. $5g+2$
- C. $6g-2$
- D. $5g-2$

25. Salt is packed in 2kg packets. If the mass of the salt in each packet is reduced by 20%, What would be the new mass of each packet?

- A. 1.6kg
- B. 2.4kg
- C. 1.85kg
- D. 1.75kg

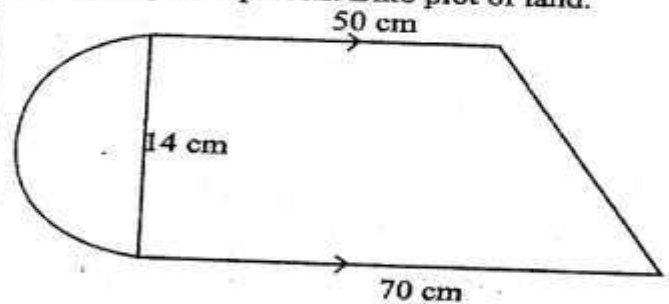
26. Kamau had 400 fifty shilling notes. He changed sh. 5,000 into one thousand shillings note, sh. 8,000 into five hundred shilling notes, sh. 2,000 into two hundred shilling notes and the rest into one hundred shilling notes. How many notes did she get all together?

- A. 76
- B. 81
- C. 145
- D. 69

27. Which of the following set of measurement will not form a right angled triangle when drawn?

- A. 24cm, 32cm, 40cm
- B. 9cm, 16cm, 25cm
- C. 18cm, 80cm, 82cm
- D. 25cm, 15cm, 20cm

28. The figure represent Biko plot of land.



What is the area of the plot in square metres

- A. 840cm^2
- B. 77cm^2
- C. 917cm^2
- D. 763cm^2

29. Malemba deposited some money in savings account which paid simple interest at the rate of 10% p.a. After $2\frac{1}{2}$ years, he had an interest of sh 4000. How much money had he deposited?

- A. Sh 16000
- B. Sh 40000
- C. Sh 1000
- D. Sh 5000

30. 3.6 tonnes of flour was packed into 2kg packets, the packets were later put into bales, if each bale occupied 12 packets, how many bales were obtained?

- A. 15
B. 15000
C. 150
D. 1500

31. Mkulima bora harvested 3400 bags of maize in year 2010, if this was 20% decrease in the production 2009, what was the production for 2009.

- A. 4080
B. 4250
C. 2750
D. 8330

32. A motorist left Eldoret town at 2215hrs on Monday for Nakuru at a speed of 90km/h. If he arrived at 0145hrs Tuesday, how far was it from Eldoret to Nakuru.

- A. 315km
B. 225km
C. 270km
D. 135km

33. Simplify the expression below.

$$\frac{3(2n + 3m) - 2(3n - 2m)}{2(3m + 4n) - 3(2m + 2n)}$$

- A. $\frac{12n + 3m}{12m + 14n}$
B. $\frac{5m}{2n}$
C. $\frac{13n}{2m}$
D. $\frac{13m}{2n}$

34. Mwikali bought the following items from a shop

$2\frac{1}{2}$ kg rice @sh80

$1\frac{1}{2}$ kg maize flour @sh 100

2 kg cooking fat @ sh 120

3 pieces of bathing soap for 140

If she paid using two five hundred shilling notes. What balance did she get?

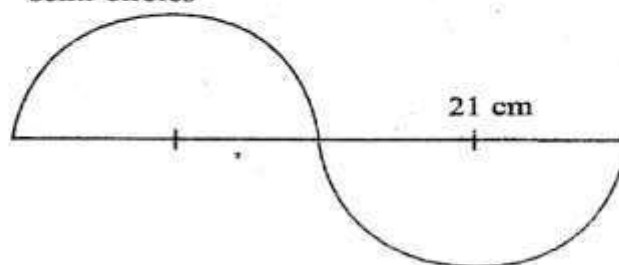
- A. 730
B. 560
C. 440
D. 270

35. What is twice the value of y

$$\frac{5y + 5}{5} + \frac{y - 3}{3} = 12$$

- A. 9
B. 18
C. $4\frac{1}{2}$
D. 21

36. The figure below is made up of the two semi-circles




What is the perimeter (pic=22/7)

- A. 33cm
B. 54cm
C. 108cm
D. 132

37. A rectangular tank has a capacity of 480,000 litres. If its base area is $30,000\text{m}^2$, what is its height in metres.

- A. 160
B. 16
C. 1.6
D. 0.016

38. A piece of land below is drawn to scale 1:5000

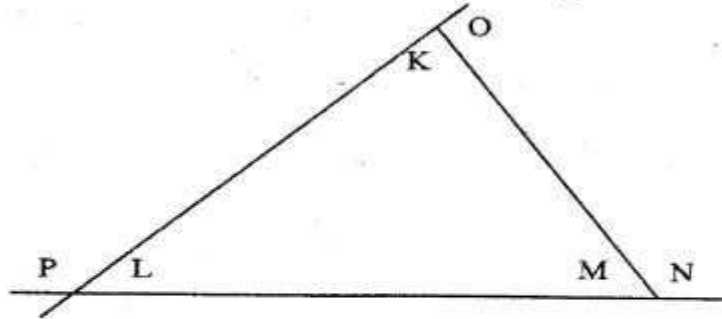


What is the actual area in hectares?

- A. 30000 ha
B. 300 ha
C. 3 ha
D. 30 ha

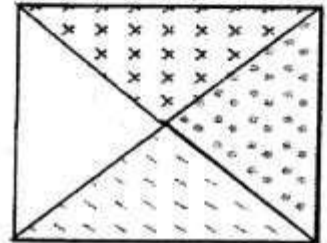
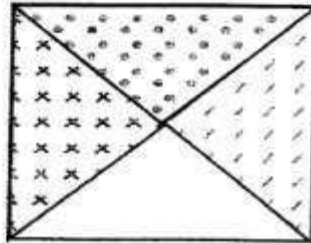
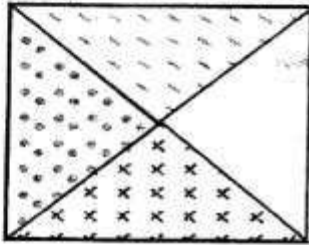
39. In a company the ratio of men on women employees is 4:7 if there are 240 less men than women, what is the sum of the number of men and women employees in the company?
- A. 320
B. 880
C. 560
D. 180
40. Four people Alice, Tony, Terry and Aaron contributed some money to buy a plot. Alice contributed $\frac{1}{3}$ of the total; Tony contributed $\frac{2}{5}$ of the total while Aaron contributed $\frac{1}{4}$ of the remainder. If Terry contributed sh 30,000. What was the cost of the plot?
- A. Sh 50,000
B. Sh 37,500
C. Sh 150,000
D. Sh 300,000
41. Hussein earns sh 12000 per month. Kwamboka earns twice the amount Hussein earns. How much money do they earn altogether in one year?
- A. Sh 36000
B. Sh 288000
C. Sh 144000
D. Sh 432000
42. The mean of six girls is 45kg. The masses of the first four girls are 48kgs, 42kgs, 40kgs and 45kgs. If one of the remaining weighs 5kg less than the other, what is the median mass of the six girls?
- A. 95kgs
B. 45kgs
C. 50kgs
D. 55kgs
43. Maingi had 571 bottles of soda which he packed into crates each holding 24bottles. How many more bottles did he need in order to have full crates.
- A. 5
B. 19
C. 23
D. 24
44. Construct triangle XYZ in which $XY=YZ=ZX=6.8\text{cm}$. Draw a circle that touches points XY and Z. What is the radius of the circle.
- A. 8 cm
B. 2 cm
C. 3.9 cm
D. 4.7 cm
45. What is the area of a curved surface of a closed cylinder whose radius is 1.4 m and has a height of 2 m?
- A. 29.92 m²
B. 30.8 m²
C. 12.32 m²
D. 17.6 m²
46. Alice spent sh 1500 to buy 12 basins and later sold them making a profit of 20%. For how much did she sell each basin.
- A. Sh 150
B. Sh 210
C. Sh 180
D. Sh 170
47. The diagonal of a rectangular room is 17m. If one of its sides is 15m, what is the area of the room in square metres.
- A. 225
B. 195
C. 120
D. 60
48. What is the value of
- $$\sqrt{\frac{289 - 64}{7^2 + 24^2}}$$
- A. $\frac{3}{5}$
B. $\frac{9}{31}$
C. $\frac{17}{25}$
D. $\frac{9}{25}$

49. Which one of the following statements is TRUE about the figure below.

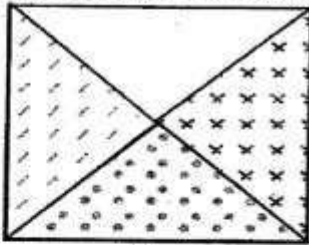


- A. $K+O+M = 180$
- B. $P+L = O-K$
- C. $O-L = K$
- D. $N-L = K$

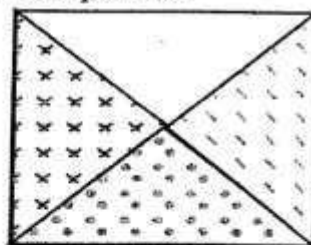
50. The figure below shows a pattern of shapes.



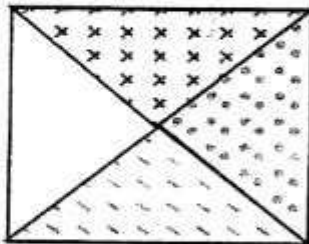
Which of the following represents the next pattern?



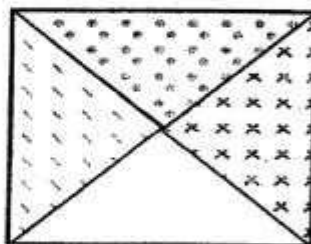
A.



B.



C.



D.



MENTOR ASSESSMENT EXAM - 2020

CLASS 8

SCIENCE

Time: 1 hour 40 minutes

INSTRUCTIONS TO CANDIDATES (Please read these instructions carefully)

1. You have been given this booklet and a separate answer sheet. The question booklet contains 50 questions.
2. When you have chosen your answer, mark it on the **ANSWER SHEET**, not in the question paper.

HOW TO USE THE ANSWER SHEET

3. Use only an ordinary pencil.
4. Make sure you have written on the answer sheet:
YOUR INDEX NUMBER
YOUR NAME
NAME OF YOUR SCHOOL
5. By drawing a **dark line** inside the correct numbered boxes mark your full index number (i.e. School Code Number and the three-figure Candidate's Number) in the grid near the top of the answer sheet.
6. Do not make any marks outside the boxes.
7. Keep your answer sheet as clean as possible and **DO NOT FOLD IT**.
8. For each of the Questions 1 – 50 four answers are given. The answers are lettered A, B, C, D. In each case only **ONE** of the four answers is correct. Choose the correct answer.
9. On the answer sheet the correct answer is to be shown by drawing a dark line inside the box in which the letter you have chosen is written.

Example

20. Plants require all the following to make their own food except

- A. Water
- B. Sunlight
- C. Oxygen
- D. Carbon dioxide

The correct answer is C.

On the answer sheet:

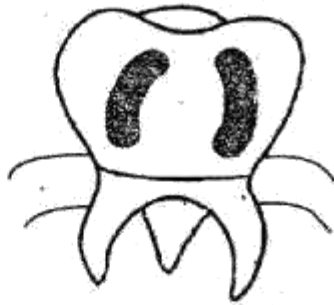
1. [A] [B] [C] [D] 10. [A] [B] [C] [D] 20. [A] [B] [C] [D] 30. [A] [B] [C] [D] 40. [A] [B] [C] [D]

In the third set, the box with the letter C printed in it is marked.

10. Your dark line **MUST** be within the box.
11. For each question **ONLY ONE** box is to be marked in each set of four boxes.

This Question Paper consists of 8 printed pages.

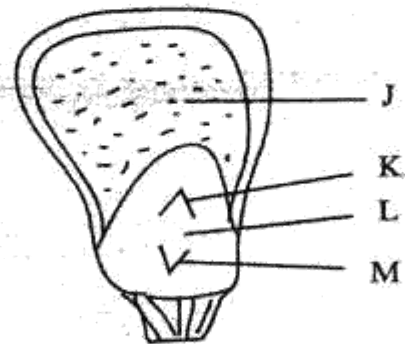
1. The diagram below shows a tooth defect.



Which of the following cannot help prevent the defect?

- Brush teeth irregularly.
 - Avoid sugary food.
 - Take foods rich in calcium and phosphorus.
 - Use teeth for the right purpose.
2. Which of the following animal feeds is stored in silos?
- Pasture
 - Fodder
 - Hay
 - Silage
3. Which two parts of the breathing system have hair and mucus?
- Air Sacs, nose.
 - Nose, Trachea.
 - Nose, bronchus.
 - Nose, lungs.
4. Objects either in motion or stationary remain at the same state unless a force is applied. This is due to _____ principle.
- Weight.
 - Inertia.
 - Friction.
 - Density.

5. Which of the following crops is a stem tuber?
- Carrot.
 - Sweet potato.
 - Irish potato.
 - Cassava.
6. Standard eight pupils mixed soap and hard water. Which of the following substances did they observe?
- Fur.
 - Scum.
 - Lather.
 - Scale.
7. Which of the following consists of materials that can be attracted by a magnet ONLY?
- Nickel, copper, cobalt.
 - Copper, chromium, silver.
 - Iron, steel, cobalt.
 - Chromium, tin, aluminium.
8. The diagram below shows the internal parts of a maize grain.



Which letter represents the part that stores food?

- J.
- K.
- L.
- M.

9. Standard five pupils grouped small animals as shown below.

Group A – beetle, spider, tick.

Group B – aphid, weevil, moth.

Group C – ladybird, mite, ant.

Group D – spider, moth, tick.

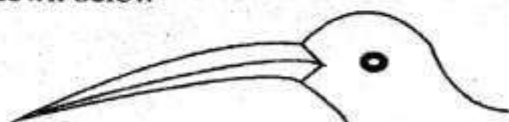
Which group grouped the small animals correctly?

- A. Group A.
- B. Group B.
- C. Group C.
- D. Group D.

10. Which of the following methods of grazing can one practice in areas that have high population?

- A. Paddocking.
- B. Stall feeding.
- C. Strip grazing.
- D. Herding.

11. Standard eight pupils observed the bird shown below



The bird shown above is likely to be found in a _____.

- A. Flower bed.
 - B. River.
 - C. Swamp.
 - D. Forest.
12. Which one of the following is not a reason as to why tools should be maintained?
- A. To avoid accidents.
 - B. To make them more efficient.
 - C. To make them more durable.
 - D. To make them more beautiful.

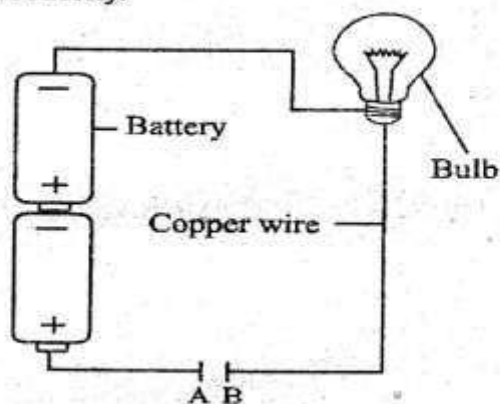
13. Which of the following vaccines is administered orally?

- A. B.C.G.
- B. Antipolio.
- C. Antimeasles.
- D. D.P.T.

14. When exhaling, the

- A. Lungs get deflated.
- B. Ribs move upwards.
- C. Diaphragm flattens.
- D. Pressure in the chest decreases.

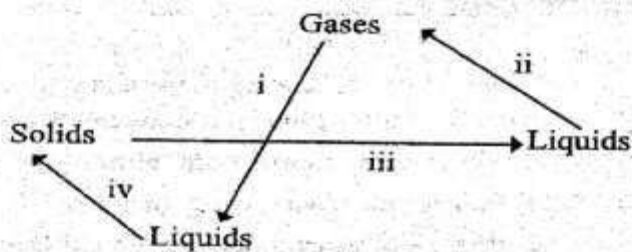
15. Standard seven pupils in Nawiri Junior School were investigating a certain aspect in electricity.



Which of the following materials will not make the bulb light if put between A and B?

- A. Silver coin, copper coin, aluminium foil
 - B. Plastic ruler, wax, piece of glass
 - C. Razor blade, iron needle, ten shilling coin
 - D. Aluminium, brass, nickel
16. Which one of the following is not needed in an experiment to investigate drainage in different soils?
- A. Identical funnels.
 - B. Different soils.
 - C. Identical tubes.
 - D. Collecting jars.

17. The following are different ways of conserving the soil. Which one mainly conserves soil moisture?
- Terracing.
 - Crop rotation.
 - Cover cropping.
 - Mulching.
18. Which of the following components of air make up a fifth of air by volume?
- Oxygen.
 - Rare gases.
 - Carbondioxide.
 - Nitrogen.
19. Which one of the following is not a feature of plants that grow in dry areas?
- They have deep root to look for water.
 - They have thin waxy cuticles on their leaves.
 - They have needle like leaves.
 - They have fleshy stems for storing water.
20. The diagram below shows the change of states of matter.



Which arrows represent condensation and melting respectively?

- (iii) and (ii).
 - (i) and (iii).
 - (iv) and (i).
 - (i) and (ii).
21. The following are physical changes that occur in boys during adolescence stage. Which one does not?
- Growth of pubic hair.
 - Having wet dreams.
 - Enlargement of hips.
 - Breaking of the voice.
22. Which one of the following shows the fourth and eighth planets in the solar system respectively?
- Neptune and Mars.
 - Earth and Uranus.
 - Mars and Saturn.
 - Mars and Neptune.
23. Which of the following is not obtained from organic matter?
- Compost manure.
 - Sulphate of ammonia.
 - Farm yard manure.
 - Green manure.
24. Standard four pupils saw dark grey clouds in the sky. What weather did they experience?
- Strong wind.
 - Calm weather.
 - Heavy rainfall.
 - Low temperature.
25. Which one of the following shows foods that will help in preventing kwashiorkor?
- Maize, beans and spinach.
 - Cabbage, eggs and rice.
 - Bread, cowpeas and greengrams.
 - Fish stew, boiled eggs and beans.

26. Which statement below is NOT TRUE about clay soil?

- A. Clay soil has a high drainage.
- B. Clay soil cracks when dry.
- C. Clay soil has a smooth texture.
- D. Clay soil has little air spaces.

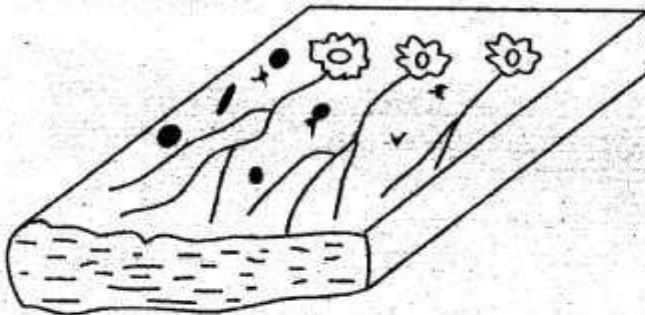
27. Which one of the following stores bile juice?

- A. Liver.
- B. Ileum.
- C. Gall bladder.
- D. Duodenum.

28. Which one of the following methods of food preservation preserves food by dehydrating bacteria and fungi?

- A. Canning.
- B. Salting.
- C. Drying.
- D. Smoking.

29. The diagram below shows a type of soil erosion standard six pupils observed



The type of soil erosion above is known as?

- A. Gully.
- B. Sheet.
- C. Rill.
- D. Splash.

30. Which of the following diseases can be controlled by draining stagnant water?

- A. Typhoid and bilharzia.
- B. Malaria and bilharzia.
- C. Bilharzia and cholera.
- D. Cholera and typhoid.

31. Which statement below is NOT CORRECT about a flower that is pollinated by a bee?

- A. The flower has nectar.
- B. The flower has brightly coloured petals.
- C. The flower produces light pollen grain.
- D. The flower has large flower parts.

32. The following are effects of HIV/AIDS.

- i. *Lowers economic growth.*
- ii. *Lowers self esteem.*
- iii. *Leads to lack of parental care.*
- iv. *Makes one emotionally weak.*

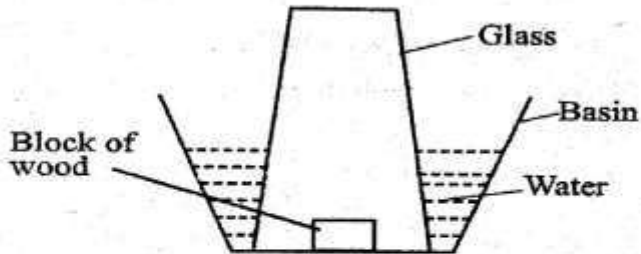
Which of the above HIV/AIDS effects are individual effects?

- A. (i) and (ii).
- B. (iii) and (iv).
- C. (ii) and (iii).
- D. (ii) and (iv).

33. In the female reproductive system, implantation occurs in the?

- A. Uterus.
- B. Oviduct.
- C. Vagina.
- D. Ovary.

34. The diagram below represents an experiment standard 5 pupils carried out during their science lesson.



The experiment is used to demonstrate that?

- A. Matter has volume.
 B. Matter has weight.
 C. Matter occupies space.
 D. Matter has mass.
35. Which one of the following is not important to consider when taking medicine?
 A. The dose.
 B. The expiry date.
 C. Date of manufacture.
 D. Prescription.
36. During lightning all the following should be done except?
 A. Avoid pools of water.
 B. Stay indoors.
 C. Carry sharp pointed objects.
 D. Wear shoes with rubber soles.
37. Which of these sexually transmitted infections is wrongly matched with its causative organism?

STI	Causative Organism
A. Gonorrhoea	Bacterium
B. Syphilis	Bacterium
C. Chancroid	Virus
D. HIV/AIDS	Virus

38. Which one of the following consists of a list of storage pests ONLY?
 A. Rodents, weevils, cutworms.
 B. Rats, weevils, white ants.
 C. Aphids, cutworms, weevils.
 D. Weevils, rats, aphids.

39. The following animals feed on vegetation only. Which one does not?
 A. Warthog.
 B. Pig.
 C. Zebra.
 D. Rabbits.

40. The following are ways of controlling a certain communicable disease.

- i. Avoiding dusty places
- ii. Getting BCG vaccine
- iii. Drinking boiled milk
- iv. Staying in well ventilated rooms

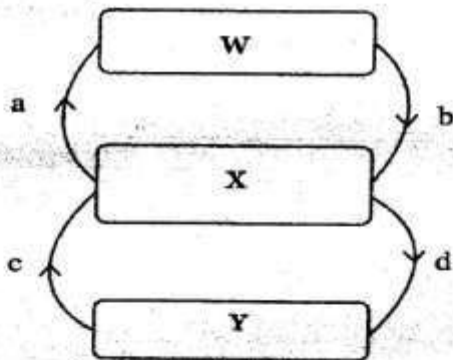
Which of the following diseases is prevented by the ways described above?

- A. Malaria.
 B. Cholera.
 C. Tuberculosis.
 D. Bilharzia.
41. Which one of the following is the second stage of HIV infection?
 A. Asymptomatic stage.
 B. Window stage.
 C. Full blown stage.
 D. Symptomatic stage.
42. Which of the following is a health effect of drug abuse?
 A. Rape.
 B. Marital conflict.
 C. Accident.
 D. Withdrawal symptoms.

43. Which of the following forms of energy require no medium to travel?
- A. Sound and electricity.
 - B. Heat and sound.
 - C. Light and electricity.
 - D. Heat and light.

44. Using water sparingly involves all the following EXCEPT?
- A. water used for washing clothes being used to clean the house.
 - B. Using a little water as possible for washing utensils.
 - C. Bathing with just enough water.
 - D. Using drip irrigation instead of overhead irrigation.

45. The diagram below shows how blood flows in the body.



Which one of the following correctly represents a, b, c and d respectively?

- A. Pulmonary vein, pulmonary artery, aorta, vena cava.
- B. Pulmonary artery, pulmonary vein, vena cava, aorta.
- C. Vena cava, pulmonary artery, pulmonary vein, aorta.
- D. Aorta, pulmonary vein, vena cava, pulmonary artery.

46. Sound energy travels poorest in one of the following, which one is it?
- A. Clay.
 - B. Oxygen.
 - C. Copper.
 - D. Water.

47. Which one of the following methods of controlling crop pests is time consuming?
- A. Scaring.
 - B. Spraying.
 - C. Handpicking.
 - D. Weeding.

48. The following are units for measuring the quantity of matter in a substance EXCEPT?
- A. Kilograms.
 - B. Tonnes.
 - C. Newtons.
 - D. Grams.

49. Which one of the following cannot be recycled?
- A. Petrol.
 - B. Waste paper.
 - C. Plastic bags.
 - D. Scrap metals.

50. Which one of the following activities will NOT increase the rate at which salt disappears in a cup of water?
- A. Increasing amount of water.
 - B. Crushing the salt.
 - C. Increasing temperature of water.
 - D. Adding more salt.



MENTOR ASSESSMENT EXAM -2020
CLASS 8
SOCIAL STUDIES & RELIGIOUS EDUCATION

Time: 2 hours 15 minutes

INSTRUCTIONS TO CANDIDATES(Please read these instructions carefully)

1. You have been given this booklet and a separate answer sheet. The question booklet contains 90 questions.
2. When you have chosen your answer, mark it on the **ANSWER SHEET**, not in the question paper.

HOW TO USE THE ANSWER SHEET

3. Use only an ordinary pencil.
4. Make sure you have written on the answer sheet:
YOUR INDEX NUMBER
YOUR NAME
NAME OF YOUR SCHOOL
5. By drawing a **dark line** inside the correct numbered boxes mark your full index number (i.e. School Code Number and the three-figure Candidate's Number) in the grid near the top of the answer sheet.
6. Do not make any marks outside the boxes.
7. Keep your answer sheet as clean as possible and **DO NOT FOLD IT**.
8. For each of the Questions 1 – 90 four answers are given. The answers are lettered A, B, C, D. In each case only **ONE** of the four answers is correct. Choose the correct answer.
9. On the answer sheet the correct answer is to be shown by drawing a dark line inside the box in which the letter you have chosen is written.

Example

30. Three of the following theories are used to explain the origin of human beings. Which one is not?

- A. Mythical theory
- B. Migration theory
- C. Creation theory
- D. Evolution theory

The correct answer is **B**

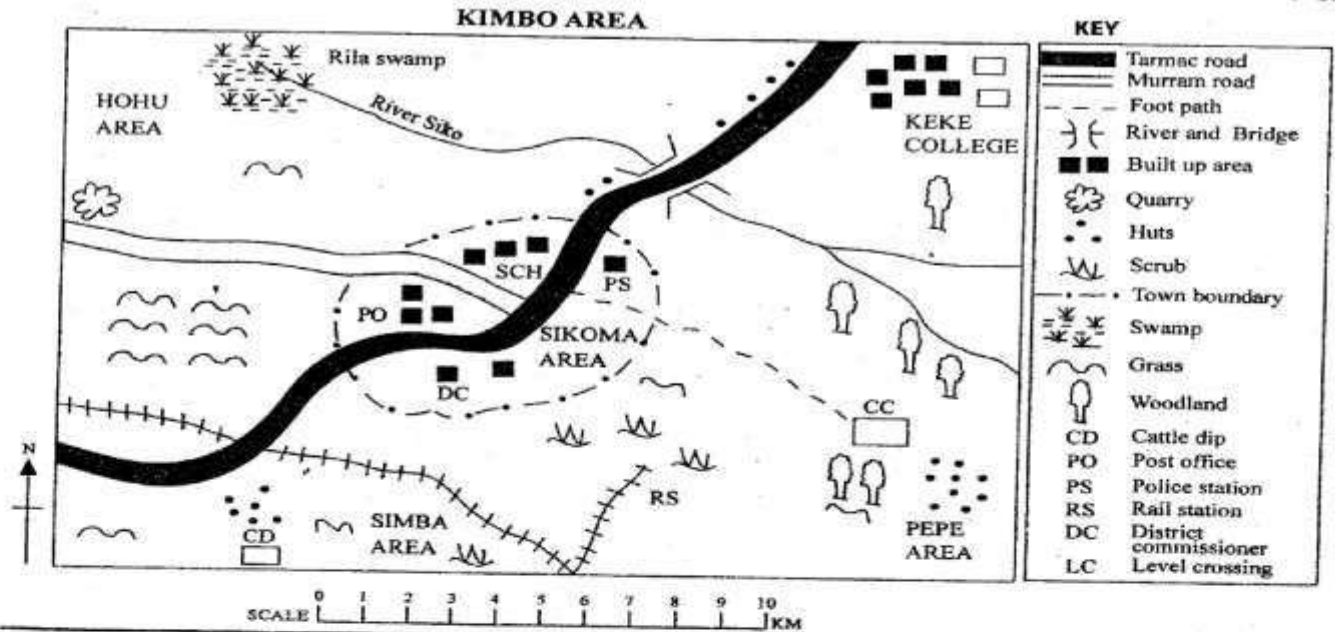
On the answer sheet:

1. [A] [B] [C] [D] 10. [A] [B] [C] [D] 20. [A] [B] [C] [D] 30. [A] [B] [C] [D] 31. [A] [B] [C] [D]
In the fourth set, the box with the letter **B** printed in it is marked.

10. Your dark line **MUST** be within the box.
11. For each question **ONLY ONE** box is to be marked in each set of four boxes.

This Question Paper consists of 8 printed pages.

Turn Over



Study the map of Kimbo area and answer questions 1 to 7.

- What is the direction of Rila swamp from Pepe area?
 - South East
 - South West
 - North East
 - North West
- The main occupation of people in Simba area is?
 - Trading
 - Cattle Rearing
 - Transporting
 - Construction
- What is the main economic activity likely to take place in Pepe area?
 - Lumbering
 - Planting of trees
 - Burning charcoal
 - Tourism
- Kimbo area is administered by?
 - DO
 - A chief
 - DC
 - An assistant chief
- The general flow of R. Siko is?
 - South East to North West
 - North West to South
 - South East to West
 - East to West
- What is the reason for development of Rila swamp?
 - The river is slow
 - The land is flat
 - There is a swamp
 - There are rapids
- How many means of transport are found in Kimbo area?
 - 4
 - 3
 - 2
 - 5

- The correct order of the evolution of the early man was?
 - Homo Erectus - Homo Habilis - Homo Sapiens
 - Homo Sapiens - Homo Habilis - Homo Erectus
 - Homo Habilis - Homo Erectus - Homo Sapiens
 - Homo Habilis - Homo Sapiens - Homo Erectus
- Three of the following are prominent traditional leaders in pre-colonial Kenya. Which one is NOT?
 - Masaku
 - Mekatilili
 - Jomo Kenyatta
 - Nabongo Mumia
- Which of the following was a missionary who came to Africa to spread Christianity?
 - Ludwig Krapf
 - John Speke
 - Vasco da Gama
 - Henry Morton
- The Arab governor in Tanganyika was called?
 - Liwali
 - John Speke
 - Jumbe
 - Bataka
- Maquis type of vegetation grows in?
 - Savanna grassland
 - Equatorial regions
 - Mediterranean regions
 - Temperate regions
- The climate of the coastal lowlands of Kenya is?
 - Cool and wet
 - Cool and humid
 - Hot and wet
 - Hot and dry

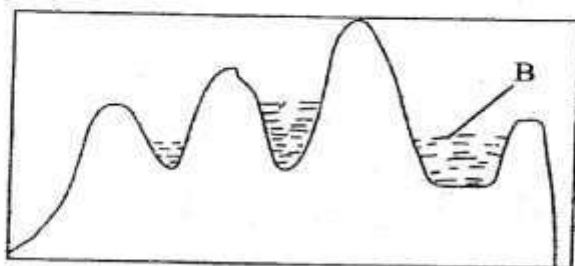
14. The statements below are about an African leader.
- Won election and became president of the liberated nation
 - Awarded the Nobel Peace Prize
- The person described above is?
- Leopold Senghor
 - Wangari Maathai
 - Nelson Mandela
 - Kwame Nkrumah
15. The Berlin conference was aimed at?
- Settling more European powers in Africa
 - Making sure that only Ethiopia and Liberia were not colonized
 - Settling the rivalries and conflicts about the boundaries
 - Enabling whites to rule Africa without fear
16. Joseph Thompson was the first European to?
- See Nyahururu falls in 1883
 - See Lake Victoria in 1883
 - See Mt. Kenya in 1888
 - See Mt. Kilimanjaro in 1883
17. The migration of people into a country is called?
- Import
 - Immigration
 - Emigration
 - Rural - Urban
18. The main reason for rearing beef cattle in Kenya and Tanzania is that they provide?
- Hides and skins
 - Glue
 - Manure
 - Meat
19. The first prime minister of Tanganyika was?
- Oscar Kambonya
 - Ali Mwinyi
 - Julius Nyerere
 - Benjamin Mkapa
20. 12th September 1974 is a memorable day for Ethiopia because?
- Haile Selassie died on this day
 - There was severe hunger at this time
 - Ethiopia was colonized at this time
 - It marked the end of the empire in Ethiopia
21. The mountain at the boundary of Kenya and Uganda is known as?
- Mt. Kilimanjaro
 - Mt. Elgon
 - Mt. Marsabit
 - Mt. Kenya
22. Below are historical events which took place in Kenya before 1921.
- Kenya – Uganda railway reached Kisumu
 - The resistance of the Giriama people broke out
 - The first missionaries arrived at the coast
 - Kenya became a British colony
- What is the correct order in which the events occurred?
- iii, iv, i, ii
 - iv, iii, i, ii
 - iv, iii, ii, i
 - iv, ii, iii, i
23. What part of Nigeria is associated with extraction of petroleum?
- The Jos plateau
 - The Niger delta
 - Nigeri
 - Northern savanna
24. The deputy speaker of the National assembly is elected by the?
- M.Ps
 - Speaker
 - President
 - Clerk of the parliament
25. What is diurnal temperature?
- The mean annual temperature
 - The lowest temperature recorded during the day
 - The temperature difference between the highest and lowest temperatures on the same day
 - The highest temperature during the day
26. The Great North road begins in Cape Town and ends in?
- Mombasa
 - Lagos
 - Cairo
 - Rabat
27. Which of the following countries is a monarchy?
- Uganda
 - Lesotho
 - Liberia
 - Zimbabwe
28. What crop is described below?
- It was introduced by Arabs
 - It grows in clusters
 - Its tree has an average lifespan of 60-70 years
- Cotton
 - Pyrethrum
 - Cloves
 - Cocoa
29. Africa is separated by water from all other continents except at the point where it joins?
- Asia to the NE
 - Europe to the North
 - Asia to the West
 - Australia to the NE

30. Which of the following word is written beneath our national court of arms?
 A. Unity B. Harambee
 C. Kenya D. Republic of Kenya

31. The valley was formed as a result of?
 A. Faulting and sinking
 B. Faulting and folding
 C. Volcanic activities
 D. Faulting and uplifting

32. The headquarters of SADC are in?
 A. Botswana B. Swaziland
 C. South Africa D. Zimbabwe

33. Use the diagram to answer questions 33 – 34.



The lake formed at the area marked B is called?

- A. Crater lake B. Caldera lake
 C. Oxbow lake D. Tarn lake

34. Which one of the following is a good example of the lake drawn above?

- A. L. Maghra B. L. Shalla
 C. L. Siwa D. L. Teleki

35. When the sun is overhead at the tropic of cancer, Capetown is experiencing which season?

- A. Spring B. Autumn
 C. Winter D. Summer


36. The time in Entebe 15°E is 10:20 am. What is the time in Mandera 45°E?

- A. 12:30 pm B. 12:25 pm
 C. 12 noon D. 12:20 pm

37. Who fought the French at the battle of Farandugu?

- A. King Leopold II B. Samori Toure
 C. King Lewanika D. Menelik II

38. The feature found at the mouth of river marked X is?



- A. Delta
 B. Estuary
 C. Lagoon
 D. Sandbar

39. Three of the following are functions of school management committee. Which one is NOT?

- A. It coordinates school activities
 B. It pays the headteacher's salary
 C. It maintains school traditions
 D. It is responsible for the development of the school

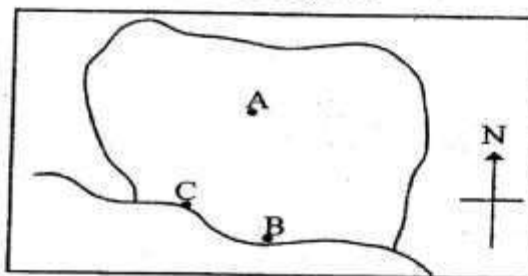
40. The Buganda kingdom had a centralized system of government. The seat of the treasurer was called?

- A. Katikiro
 B. Omulamuzi
 C. Omwanika
 D. Lukiko

41. The main thing that has led to growth and expansion of Thika town is?

- A. Tourism
 B. Industrialization
 C. Mining
 D. Agriculture

42. The picture shows Cocoa triangle in Ghana; from A-C consecutively are?




- A. Accra, Sekondi, Kumasi
 B. Takoradi, Kumasi, Accra
 C. Kumasi, Accra, Takoradi
 D. Tamale, Accra, Sekondi

43. The copper that is mined in Zambia is exported through the port of?

- A. Dar-es-Salaam B. Mogadishu
 C. Beira D. Mombasa

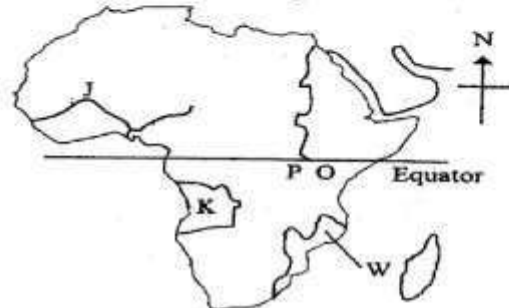
44. The method of fishing shown in the diagram below is known as?



- A. Purse seining B. Net drifting
 C. Long lining D. Trawling

45. Which of the following groups has landlocked countries only?
- Rwanda, Chad, Niger
 - Egypt, Botswana, Mali
 - Liberia, Central African Republic, Ethiopia
 - Zambia, Burkina Faso, Namibia
46. Which type of climate is characterized by fairly hot summers and cooler winters?
- Mediterranean
 - Equatorial
 - Hot desert
 - Tropical
47. Which of these statements correctly describe the Afrikaans?
- Resultant of intermarriage between whites and blacks
 - A mixed race of Asians, Whites and Blacks
 - Descendants of Dutch farmers
 - A combination of Bantus and Khoisans
48. The following are ways of demonstrating patriotism EXCEPT?
- Criticizing bad government policies and suggesting solutions to national problems
 - Paying taxes promptly
 - Participating in conservation of our environment
 - Encouraging smuggling to deprive the government of revenue
49. The number of constituencies in Kenya according to the constitution are?
- 350
 - 290
 - 210
 - 68
50. Which one of the following BEST explains why Kenya conserves her wildlife?
- For the country's beauty
 - To create jobs for Kenyans
 - To protect the wildlife especially the rare species
 - To be able to enjoy game meat
51. One of the following is the BEST way to curb drug and substance abuse. Which one is it?
- By imposing harsh penalties to the traffickers
 - Educating drug abusers about its dangers
 - Creating more rehabilitation centers
 - Isolating drug abusers
52. Three of the following are problems facing people with special needs. Which one is NOT?
- Being hidden by parents
 - Discrimination
 - Denying them better education
 - Equal opportunities

53. The MAIN benefit of tourism to the economy of Kenya is?
- Creation of jobs
 - Development of infrastructure
 - Earning of foreign exchange
 - Promotion of local industries
- Use the map to answer questions 54 – 57.



54. Which of the following statements is FALSE about the river marked J on the map?
- It ends in an estuary
 - Its source is the Fouta Djallon plateau
 - It has a tributary called Benue
 - Oil mining takes place at its mouth
55. The country marked K on the map is called?
- Angola
 - Namibia
 - Democratic Republic of Congo
 - Gabon
56. The system of administration used by the colonialists in the country marked W was called?
- Indirect rule
 - Assimilation
 - Direct rule
 - Association
57. The lake marked P on the map was formed through?
- Faulting
 - Volcanicity
 - Erosion
 - Down warping
58. Which group of the following industries is correctly matched with its category?
- Manufacturing – ginnery, meat canning, creamery
 - Processing – ginnery, tannery
 - Assembling – transport, banking
 - Service – fruit canning, bakery
59. The main challenge facing jua kali industry in Kenya is?
- Lack of enough capital
 - Competition
 - Production of similar goods
 - Pollution
60. Which one of the following is the MOST economical way of preserving fish?
- Refrigeration
 - Canning
 - Salting
 - Sun drying

SECTION B

CHRISTIAN RELIGIOUS EDUCATION

61. According to Genesis the story of creation what was created on the fifth day?
 A. Man and sea creatures
 B. Stars, moon and sun
 C. Birds and sea creatures
 D. Birds and land animals
62. Which among the following books of the Bible is a Prophetic book in the Old Testament?
 A. Nehemiah
 B. Esther
 C. Judges
 D. Malachi
63. God had given Bezalel, Oholiab and other craftsmen skills and understanding to make everything needed for the _____?
 A. Sacred tent
 B. Temple
 C. Synagogue
 D. Shrine
64. Who among the prophets below was called by God even before he was born?
 A. Jeremiah
 B. Samuel
 C. Isaiah
 D. Micah
65. During his ministry Jesus healed ten lepers. The leper who came back to say thank you was a _____?
 A. Jew
 B. Samaritan
 C. Gentile
 D. Egyptian
66. Three of the following people were jealous at one time in their lives. Who was not?
 A. King Saul
 B. King Ahab of Israel
 C. Cain
 D. Jonathan son of Soul
67. Below are events that took place in the Old Testament. Arrange them from the first to the last.
 (i) David is crowned king
 (ii) Moses sees a burning bush
 (iii) Joshua crosses the R. Jordan with the israelities.
 (iv) Samuel lives with priest Eli.
 A. (ii), (iii), (iv), (i)
 B. (ii), (iv), (i), (iii).
 C. (ii), (iii), (i), (iv)
 D. (ii), (i), (iv), (iii)
68. The books of law are also called the.
 A. Pentateuch
 B. Letters
 C. Epistles
 D. Apocrypha
69. Which one of the following was the hometown of Eliab the brother of David?
 A. Bethany
 B. Jericho
 C. Jerusalem
 D. Bethlehem
70. _____ preached to 3000 people after he was filled by the holy spirit
 A. Peter
 B. John
 C. Paul
 D. Jesus
71. One of the following organisations provides basic needs for the refugees. Which one is it?
 A. NCKK
 B. AMREF
 C. AIC
 D. UNHCR
72. When Jesus told his disciples about his death, which disciple said that it could not happen and Jesus called him Satan?
 A. John
 B. Andrew
 C. Peter
 D. Levi
73. The injured man in the parable of the good Samaritan was travelling to where from where?
 A. Jerusalem to Jericho
 B. Jericho to Jerusalem
 C. Bethlehem to Jerusalem
 D. Jerusalem to Bethlehem
74. In which book is the rebuilding of the walls of Jerusalem found?
 A. Acts
 B. Jeremiah
 C. Nehemiah
 D. Daniel
75. Seven Deacons were appointed in the early church to assist in handling finances, who among them was a Gentile?
 A. Prochorus
 B. Nicahar
 C. Stephen
 D. Nicolaus
76. Which prophet was appointed by God to be a spiritual watchman over people lives?
 A. Jeremiah
 B. Ezekiel
 C. Isaiah
 D. Daniel
77. Which was Paul's profession before his call?
 A. Lawyer
 B. Tent maker
 C. Fisherman
 D. preacher
78. "Where you go I will go, wherever you dwell I will dwell, your people....." To whom were these words said?
 A. Ruth
 B. Boaz
 C. Chilion
 D. Naomi
79. Happy are those who are meek because
 A. They will inherit the earth
 B. They will receive what God has promised
 C. God will call them his children
 D. The kingdom of heaven is theirs
80. On which mountain did Moses die?
 A. Moab
 B. Gilboa
 C. Sinai
 D. Nebo
81. Which commandment truly shows that God intended man to rest?
 A. First
 B. Second
 C. Third
 D. Fourth
82. In which town did Jesus meet with Zachaeus?
 A. Jericho
 B. Jerusalem
 C. Bethany
 D. Nazareth
83. Where was Jesus crucified?
 A. Place of suffering
 B. Place of salvation
 C. Place of blood
 D. Place of skull
84. What would you do if you found your friend smoking bhang?
 A. Join him
 B. Avoid his company
 C. Report to the class teacher
 D. Show him it's dangerous and tell him to use small amount

85. Which one of the following is an imagined fear?
 A. Fear of accidents
 B. Fear of leopards
 C. Fear of ghosts
 D. Fear of punishment
86. The main reason why Jesus chose the 12 disciples was in order to;
 A. Protect them
 B. Have many friends
 C. Have them preach the good news
 D. Obey the law
87. Ancestors are important people in the community because they
 A. Are founders of the clan
 B. Died a long time ago
 C. Are spirits
 D. Demand sacrifices
88. King Ahab sinned when he took another man's vineyard and had him killed. This man was called?
 A. Ananias
 B. Naboth
 C. Goliath
 D. Barnabbas
89. Which sexual misuse did Absalom the son of David involve himself in?
 A. Adultery
 B. Fornication
 C. Bestiality
 D. Rape
90. Noah had three sons, who was the first born?
 A. Ham
 B. Japheth
 C. Seth
 D. Shem
64. Which one of the following is a similarity between Eid and Friday prayers
 A. They have two rakaat
 B. The Khutbahs are said after the prayers
 C. They are said in the morning
 D. They are said at noon
65. Abdallah a class seven pupil has developed a habit of chewing miraa. What advice would you give him as a muslim.
 A. Live him alone
 B. Ask him not to be chewing the whole day
 C. Advice him to stop immediately
 D. Tell him to share with other muslims
66. Which of the following is not an activity on the night of Lailatul-Qadr?
 A. Angels descend on the earth
 B. Quran was revealed
 C. Peace prevails
 D. People are judged
67. Which statement is not true about the battle of Uhud
 A. The prophet lost some of his teeth
 B. The prophet cursed the Quraish
 C. The Muslims were winners at first
 D. Khalid bin Waleed made the Muslims Suffer
68. The prophet (SAW) said, "Muslims are like one building, each brick holds the other." What was the prophet referring to?
 A. Tolerance
 B. Unity
 C. Love
 D. Patience
69. In which town was prophet Mohammed (SAW) born?
 A. Madinah
 B. Jeddah
 C. Makkah
 D. Cairo
70. Which one of the following events did not take place in the month of Muharram?
 A. Prophet Ibrahim was put in a fire
 B. The ark of Nabii Nuh landed on Mount Juda
 C. The creation of the world and universe took place
 D. Prophet Issa (as) was crucified by Romans
71. Which clause completes the following hadith? "Islam is cleanliness, so cleanse yourself for no unclean person will .."
 A. Be allowed into the mosque
 B. Recite the Quran
 C. Perform Haji
 D. Enter paradise
72. Which Surah talks about the horses of war?
 A. Aadiyat B. Zilzala C. Maun D. Takathur

SECTION B

ISLAMIC RELIGIOUS EDUCATION

61. Which was the first Surah to be revealed to the prophet SAW?
 A. Alaq B. Qadar C. Tiin D. Humazah
62. The prophets of Allah who are referred to as Ulu'l Azm are the ones?
 A. Who were given books
 B. Who showed a lot of patience
 C. Who had more hatred
 D. Who were tortured most
63. Which statement is not true on patients with AIDS?
 A. We should keep away from them
 B. We should help and console them
 C. We should not touch any fluid coming out of their body
 D. We can shake hands with them

73. Who among the following is not an angel?
 A. Ridhwan
 B. Mikail
 C. Dhul-kifl
 D. Jibril
74. In which year was Makkah conquered
 A. 6 A.H B. 8 A.H C. 10 A.H D. 9 A.H
75. Which one of the following actions of Khuzayma was wrong?
 A. Praying five times
 B. Fasting in Ramadhan
 C. Putting on a golden watch
 D. Helping the blind to cross the road
76. Zainab a 50years old land lady has 5000/= in her account. What should she give as Zakat?
 A. 125/= B. 25/=
 C. 75/= D. 115/=
77. The Surah which refers to Mecca as a city made secure is?
 A. Al-Baqarah
 B. Al-Yasin
 C. At-Tiyn
 D. Al-Bayyinah
78. Which one among the following is not a verse from Surah tiyn?
 A. Then we return him to the lowest of the low
 B. Surely we have created man in the best make
 C. Allah is the judge of all judges
 D. He does not beget neither was he begotten
79. The prophet farewell speech touched on three of the following things except?
 A. Rights of women
 B. Islamic brotherhood
 C. Inheritance
 D. Killing of girlchild
80. During Hajj it is haram _____
 A. For women to allow their faces to be seen
 B. For men and women to mix
 C. For men to hold an umbrella over their head
 D. Proposing, marrying or taking part in a wedding
81. The prophet was assured that Wahy will continue to be given to him in Surah? _____
 A. Al-Qadar
 B. Al-Inshirah
 C. Dhulha
 D. Al-Tiyn
82. The animal that is slaughtered during Iddul Adha is referred as _____
 A. Udhhiya B. Ahiba
 C. Ajihya D. Asadaq
83. The correct order of events after one dies is?
 A. Shrouding, Washing, Praying and then burying
 B. Praying, Washing, Shrouding and burying
 C. Washing, Shrouding, Praying and burying
 D. Praying, Shrouding, Washing and burying
84. In Shawwal its sunnah to fast _____
 A. The whole month
 B. Only six days
 C. The first six days
 D. The last six days
85. After the first takbira in Eid prayers we say more takbiras _____
 A. 2
 B. 3
 C. 5
 D. 7
86. Virtue is _____ conduct and sin is that which _____ your heart.
 A. Good, pleases
 B. Good, spoils
 C. Good, punches
 D. Bad, destroys
87. Shirk is to
 A. Associate others with God
 B. Do things which the prophets did not do
 C. Neglect your daily prayer
 D. Be in a state of being unable to hold the Quran and pray
88. Removing obstacles from the path and smiling at others is a form of _____
 A. Prayer
 B. Iman
 C. Sadaqa
 D. Taucheed
89. Which one of the following books is wrongly matched with the prophet who received it?
 A. Musa – Taurat
 B. Ibrahim – Injeel
 C. Daud – Zabur
 D. Mohammad – Quran
90. For swimming, a Muslim woman can wear a swimming costume when there are no men around. This statement is _____
 A. Wrong
 B. Correct
 C. Fair
 D. Proper