

CLASS 7 HOLIDAY ASSIGNMENT END OF TERM 2 2021

For marking schemes call
Mr Machuki 0795491185

For PP1, PP2, GRADES (1,2,3, and 4)
Holiday Assignments, call Mr
Machuki 0795491185 or
0113746644.

All the students are advised to attempt these questions in their exercise books during this extended covid wave 3 holiday. Parents are also requested to purchase the answers from the above stated contact(Mr machuki) to help the learners revise them.

kenyaeducators@gmail.com

For more e-learning resources call 0795491185

APRIL HOLIDAY ENGLISH ASSIGNMENT – CLASS SEVEN

Instructions

- i.) The work must be duly done before reporting back to school
- ii.) Present neat work
- iii.) Follow given instructions

Fill in the cloze test below using the words in brackets. You may change their form if need be.

When I arrived at the airport, there were _____ (crowd) of people blocking the entrance with their _____ (luggage). Near the customs section, several _____ (group) of officials were standing, checking the _____ (equipment) that was being loaded onto a trolley. Most people were standing, waiting for _____ (information) from the loudspeakers onto the departures and arrivals of aircrafts.

Rewrite the following sentences by changing the BOLD words to plural possessive nouns.

Example: **The players of the teams** practiced after school.
 The team's players practiced after school.

1. Each day **the wealth of the couple** increased.
2. Numbers were printed **on the shirts of the athletes**.
3. **The whistles of the coaches** stopped the game.
4. **The eyes of the children** were full of tears of joy.
5. However, **the house belonging to the neighbours** were destroyed.

Supply the appropriate question tags in the following sentences

1. Get out of this room now, _____?
2. We've made a reservation for the week, _____?
3. We shall not accept anything else, _____?
4. The marriage caused rupture in her relationship with her mother, _____?
5. The amendments will strengthen the bill, _____?

Correct all errors of capitalization in the following sentences.

1. my grandmother grew up in witmere.

2. the Nile river is one of the largest rivers in Africa.

3. the TV show Papa Shirandula has attracted many viewers.

4. they captured the stark beauty of multiple Academy in their play.

5. Bernard Mathenge and his wife have travelled to America.

Use the most appropriate preposition to complete the sentences below.

1. Driving has been my dream _____ years.
2. _____ 1990, I bought a second-hand car.
3. _____ That year, I learned how to drive.
4. I rolled the car _____ the road _____ than two kilometres.

KAZI YA LIKIZO YA APRILI MWAKA 2020 – DARASA LA SABA

Jaza mapengo

Jumba _____ (1) Mwalimu Muroño ni kubwa _____ (2) kasti _____
(3) mfalme. Limetukuka na limekaa makini mbali _____ (4) nyumba _____
(5) jirani _____ (6) ambazo zilijitenga _____ (7), zimejibari _____
_____ (8) hazitaki kushindana nalo kwa hali _____ (9). Limejengwa _____
_____ (10) vyuma, zege na chokaa _____ (11) asili inayoshikamana _____
(12). Mwalimu Muroño anapoondoka _____ (13) pake kwenda shuleni, mwangaza
mpya humwacha _____ (14) akilinda _____ (15).

A	B	C	D
1. Ya	la	cha	wa
2. Ili	ila	kama	vile
3. Ila	kwa	cha	ya
4. Na	ya	kwa	wa
5. Ingingine	mengine	nyingine	zingine
6. Wake	yake	lake	zake
7. Nalo	nayo	nazo	nao
8. Licha ya	kwa kua	kama kwamba	ili
9. Wowote	chochote	lolote	yoyote
10. Na	kwa	ya	la
11. Ya	la	cha	chenye
12. Mathubuti	Madhubuti	madhumuni	maudhui
13. Maskani	maskanini	jumba	katika nyumba
14. Bawaba	mtwana	bawabu	mhandisi
15. Laangoni	mlango	nyumba	lango

Jibu kulingana na maelezo.

16. **Andika wingi:** Nyani alikimbizwa na seremala yule.

17. **Bainisha nomino ya Jamii kati ya hizi:**

(Wema, Thuerea, Mto Tana, Damu) _____

18. **Onyesha aina ya maneno yaliyopigiwa kijistari.**

Mwanafunzi **mtundu** aliadhibiwa **vikali** na Mwalimu, yule **mtiifu** alituzwa.

19. Mwalimu katika chou kikuu huitwa? _____

20. Mahali pa kuhifadhi vitu vya kale na vya kielimu huitwa? _____

21. **Tumia kiunganishi sahihi:** ukija kwangu nitakusaidia _____ unahitaji usaidizi wangu.

22. Jina la heshima wanaloitana mke na dada wa mume ni _____

23. Kikembe cha nyangumi huitwa? _____

24. **Kamilisha methali hii:** mbwa wa msasi mkali _____

25. **Chagua orodha yenye vitate pekee.**

- Kadhi, kasi, kazi
- Nguru, sangara, kambare
- Ila, kasoro, taskiri
- Yule, hao, hilo

26. Sabalheri ni salamu za wakati gani? _____

27. Mshororo unaorudiwarudiwa katika kila ubeti wa shairi la tarbia huitwa? _____

28. **Kitendawili:** Nanywa supu natupa nyama. _____

A series of 40 horizontal lines for writing.

Tumia tashbihi mwafaka kujaza pengo.

Nilirauka alfajiri na mapema. Kulikuwa na baridi shadidi nayo maji yalikuwa baridi kama _____ (1). Ilibidi niyapashe moto ili angalau yawe vuguvugu niweze kuyaogea. Baada ya kukoga, nilipata staftahi iliyokuwa tamu mithili ya _____ (2) kisha nikang'oa nanga. Ingawa sikuwa na kazi wala bazi nilielekea mjini kujaribu bahati yangu kwani wahenga hakututia kiwi walipoamba, kwenda bure si kukaa bure. Mwenda bure huenda akaokota.

Tarikini nilikutana na mja mmoja mwenye mataaluma manne. Alikuwa mweusi kama _____ (3) na mwenye nguvu mithili ya _____ (4). Mara kwa ghafla, aliangua kicheko kama _____ (5) na kunishika mkono. Ni bayana kuwa kupiga meno mswaki lilikuwa neno geni kwake. Kinywa chake kilinuka kama _____ (6). Niliingiwa na kimuyemuye kama _____ (7) nao woga ukazidi ule wa _____ (8). Nilijaribu kupiga kamsa lakini ulimi uliniganda nikawa kama _____ (9).

Nilipiga dua kwa Mwenyezi Mungu huku nikizingatia ya wahenga kuwa muomba Mungu si mtovu. Waama, Mungu hamwachi binadamu wake kwani mwia mfupi baadaye, waja wawili waliwasili pale wakiendesha gari la kifahari. Mmoja alikuwa rijali aliyekuwa Mrefu mithili ya _____ (10) na mwenzake alikuwa mwanamke aliyekuwa ameumbwa akaumbika. Alikuwa mrembo kama _____ (11). Halikadhalika, alijipamba mithili ya _____ (12). Macho yake yalikuwa ya kikombe nayo midomo ilikuwa na wekundu wa ini. Haikuwa myekundu kama _____ (13).

Kumbe rijali yule alikuwa kachero! Alikuwa akilisaka jitu lile la miraba minee. Nalo jitu lilipomwona, liliniachilia na kutimua mbio kama _____ (14). Kachero yule hakuwa na jingine ila kulipiga risasi mguuni. Alilivisha vikuku na kuliweka garini huku likijitetea na kulia kama _____ (15).

Kulia na kujitetea hakukulisaidia. Yote yalikuwa bure bilashi. Lilipelekea moja kwa moja hadi korokoni huku likiwa na majuto ya _____ (16). Kweli wahenga hawakutupatia ulimi wa kulazia waliposema siku za mwizi ni arubaini na mpanda hila huvuna ufukara.

Tumia istiara mwafaka kujaza pengo.

(punda, kasuku, mchwa, mbwakoko, chiriku, paradiso, duma, wembe, chaza, mkono wazi)

Kijana Nia alikuwa _____ (1). Alikuwa na bidii kubwa katika masomo yake. Kutokana na hilo aliyaelewa masomo na kupasi mitihani yake. Wenzake walimwita _____ (2). Mbali na hayo alikuwa _____ (3). Alikuwa na mbio sana. Nyumbani kwao kulikuwa _____ (4). Watu wote wa familia waliishi kwa amani na upendo. Wazazi wake walikuwa _____ (5). Waliwasaidia watu wengi pale kijijini. Kwa bahati mbaya watu wengine waliosaidiwa hawakuwa na shukrani. Walijigeuza na kuwa _____ (6). Waliwalipa kwa mabaya. Ingawa Nia alijaliwa sana, alikuwa mnyenyekevu. Aliwaheshimu na kuwathamini wote. Aliwasaidia wenzake kwa hali na mali. Aliwashauri wenzake wawe na bidii. Kwa bahati mbaya baadhi ya wenzake walikuwa

_____ (7). Hawakupenda kusoma kwa bidii. Badala ya kujitahidi walijigeuza kuwa _____ (8) pale kijijini. Hawakutulia. Kila wakati walikuwa wakizurura. Aidha waliyaiga mambo wasiyoyaelewa. Walikuwa _____ (9). Wengine hawakunyamaza darasani. Walikuwa _____ (10). Nia hakufa moyo. Aliendelea kuwasaidia hadi wakawajibika.

Tumia majibu mwafaka kukamilisha kifungu kifuatacho.

(maji na Mafuta, bure, reale kwa ya pili, jembe na mpini, mabonde na milima, joka la mdimu, maiti na jenezu, mtu na kivuli chake, ulimi na mate)

Baba yao alipokaribia kuipungia dunia mkono wa buriani, aliwaita wote wawili. Aliwaeleza umuhimu wa kusaidiana aushini. Ingawa vijana wale walilandana kama _____ (1) aliwakumbusha kuwa udugu si kusabihiana bali ni kusaidiana. Aliwahimiza wazidi kusahibiana au kupendana mithili ya _____ (2). Halikadhalika washirikiane kama _____ (3) katika shughuli zao na wakati wa huzuni wazidi kusaidiana kama _____ (4). Aliwaonya kuhusu hatari ya kutoelewana kama _____ (5) na badala yake akawashawishi kufuatana kama _____ (6).

Vilevile baba yao aliwaonya kuhusu hatari ya kuwa na inda na inadi kama _____ (7). Aliwataka kufanya kazi kama _____ (8) hadi wafanikiwe maishani mwao. Tangu siku hiyo vijana hao wametembea sana. Wamevuka _____ (9) katika shughuli zao za kutafuta riziki kwani wanaelewa fika kuwa heri kwenda bure kuliko kukaa bure. Aliwahimiza ikiwezekana makao yao yakaribiane kama _____ (10).

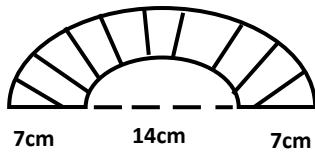
Jaza pengo kwa kutumia tanakali mwafaka.

(rovurovu, ndi, chapuchapu, kwikwikwi, chopi, chubwi, chupuchupu, pukupuku, pipipi, tifu, tulii, bingiribingiri, pu, prrr, fofofu, katakata, pepepe, tiriri)

Gari hilo lilikuwa likiendeshwa kwa kasi mno. Mara mtu mmoja aliyekuwa mweusi _____ (1) na aliyelewa _____ (2) alipepesuka na kuanguka _____ (3) katikati ya baraste ile. Maskini mshika usukani alishika breki _____ (4) lakini yote yalikuwa bure bilashi. Mlevi yule aligongwa dafrao na kuangushwa mchangani _____ (5) kando ya barabara. Damu ilimtirika _____ (6) na punde si punde akawa amekufa _____ (7). Gari nalo lilibingirika _____ (8) na kuanguka mtoni _____ (9). Baadhi ya abiria waliponea _____ (10) ingawa walikuwa wameroa _____ (11). Wengi wao walidondokwa na machozi _____ (12) huku wengine wakilia _____ (13). Wasamaria wema walienda haraka _____ (14) kujaribu kuwaokoa. Baadhi ya majeruhi walikataa _____ (15) kupelekwa hospitalini. Wengine walichukuliwa na kufungwa mikono _____ (16) hadi hospitalini. Baadhi yao walifungwa bendeji nyeupe _____ (17) na walitulia _____ (18) wakisubiri kurejea nyumbani.

DECEMBER HOLIDAY MATHEMATICS ASSIGNMENT – CLASS SEVEN

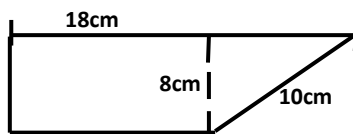
1. What is the area of the shaded part? Take $(\pi = \frac{22}{7})$



2. Work out:

$$\frac{32.4 (0.2 + 2.2) 0.8}{0.3}$$

3. What is the area of the figure?



4. A rectangular plot of land measures 20cm by 10cm on a map. If it is drawn to the scale 1:1000. What is the actual area of the piece of land in hectares?

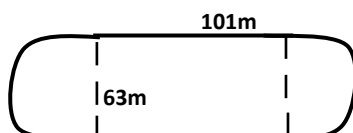
5. Which is the least number that can be subtracted from 82788 to make it divisible by 11?

6. Find the surface area of the open cylinder below whose diameter is 7cm and height is 10cm.

7. What is the value of y?

$$\frac{2}{3}(9y - 3) = y + 4$$

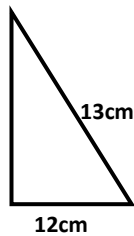
8. How many times would an athlete run around the field shown to cover a distance of 2km?



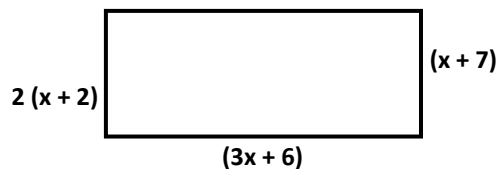
9. What is the product of the next two numbers in the series?
7, 13, 25, 49,

10. 187 electric poles were fixed along a road at a regular interval of 20m. What was the total distance fixed with the poles in km?

11. Find the half area of the right angled below.



12. Find the area.



13. A man spent $\frac{2}{5}$ of his salary on food, $\frac{1}{4}$ on clothing, $\frac{1}{6}$ on other expenses and saved the rest. What fraction of his salary did he save?

14. After selling a dress for Sh. 1800, a trader made a profit of 20%. How much profit did he make in shillings?

15. A coffee farm yielded 800 tonnes in 2013. Due to drought in year 2014, yields dropped by 30%. How many tonnes of coffee were harvested in year 2014?

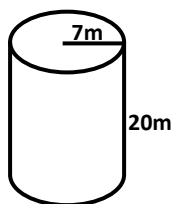
16. Jane and John shared some money such that Jane got 4 times as much money as John. What fraction of money did John get?

17. Otieno is K years old. He is 5 years older than Ondieki but 4 years younger than Kidole. What will be their age four years to come?

18. A wheel with a radius of 28cm makes 2000 revolutions. What distance in km did the wheel cover?

19. A car travelled at 72 km/h. what is its speed in m/s?

20. Find its half volume.



21. Which is the least digit that can be added to 96952 to make it divisible by 11?

22. The floor of a room measures 8.1m by 6m. how many square tiles whose side measures 90cm can be used to completely cover the floor of the room?

23. In a class of 45 pupils 40% of them are girls. How many boys were present when 8 of the were absent?

24. $\frac{9}{10} (30 + 5t) + \frac{5}{6} (18-12)$

APRIL HOLIDAY SCIENCE ASSIGNMENT – CLASS SEVEN

A. Define the following terms:

- i.) Plasma _____
- ii.) Haemoglobin _____
- iii.) Clotting _____
- iv.) Heart _____

B. Explain the difference between:

- i.) Oxygenated and deoxygenated blood - _____

- ii.) White and red blood cells - _____

C. Draw a human heart and label all the following parts:

- i.) Chambers
- ii.) Blood vessels

D. Highlight five importance(s) of blood circulation.

- i.) _____
- ii.) _____
- iii.) _____
- iv.) _____
- v.) _____

E. Define the following terms:

- i.) Drug - _____
- ii.) Drug abuse - _____
- iii.) Drug misuse - _____
- iv.) Narcotics - _____
- v.) Stimulants - _____

F. List down the three tobacco products and their effects.

- i.) _____
- ii.) _____
- iii.) _____

G. Highlight the social effects of drug abuse

- i.) _____
- ii.) _____
- iii.) _____
- iv.) _____
- v.) _____

H. The living components of the environment are?

- i.) _____

- ii.) _____
- iii.) _____
- iv.) _____
- v.) _____

I. The largest component of the environment on the earth's surface is _____

J. Highlight how plants depend on animals (4 ways).

- i.) _____
- ii.) _____
- iii.) _____
- iv.) _____

K. How do animals depend on plants (7 ways)?

- i.) _____
- ii.) _____
- iii.) _____
- iv.) _____
- v.) _____
- vi.) _____
- vii.) _____

L. Draw a food chain and show:

- i.) Producers
- ii.) Primary consumer
- iii.) Secondary consumer
- iv.) Tertiary consumer

M. Classify pests into field pests and storage pests and highlight the effects of each pest on crops.

Field pests / their effects

- i.) _____
- ii.) _____
- iii.) _____
- iv.) _____
- v.) _____

Storage pests / their effects

N. List down six ways of pest control.

- i.) _____
- ii.) _____
- iii.) _____
- iv.) _____
- v.) _____
- vi.) _____

O. List down the livestock parasites into endo and ecto parasites.

Endo parasites

Ecto parasites

- i.) _____
- ii.) _____
- iii.) _____
- iv.) _____
- v.) _____

P. Which method of controlling livestock parasites controls both the internal and external livestock parasites. _____

Q. List down the human intestinal worms.

- | | |
|-------------|------------|
| i.) _____ | iv.) _____ |
| ii.) _____ | v.) _____ |
| iii.) _____ | |

R. Give five ways in which water is polluted.

- | | |
|-------------|------------|
| i.) _____ | iv.) _____ |
| ii.) _____ | v.) _____ |
| iii.) _____ | |

S. Name six ways in which water is conserved.

- | | |
|-------------|------------|
| i.) _____ | iv.) _____ |
| ii.) _____ | v.) _____ |
| iii.) _____ | vi.) _____ |

T. Give the macro nutrients needed by plants.

- | | |
|-------------|------------|
| i.) _____ | iv.) _____ |
| ii.) _____ | v.) _____ |
| iii.) _____ | |

U. Draw a compost manure and label all the parts correctly.

V. Define the following terms:

- i.) Solute _____
- ii.) Solvent _____
- iii.) Solution _____
- iv.) Saturation _____
- v.) Solubility _____
- vi.) Miscible _____
- vii.) Immiscible _____

APRIL HOLIDAY SOCIAL STUDIES ASSIGNMENT – CLASS SEVEN

1. Africa lies between Latitude _____⁰ N and _____⁰ S and Longitude _____⁰ W and _____⁰ E.
2. Name five Islands found in the 2nd largest continent in the world.
 - i.) _____
 - ii.) _____
 - iii.) _____
 - iv.) _____
 - v.) _____
3. Name the major Latitudes.
 - i.) _____
 - ii.) _____
 - iii.) _____
 - iv.) _____
 - v.) _____
4. List two main effects of the rotation of the earth on its own axis.
 - i.) _____
 - ii.) _____
5. List the four seasons in Africa.
 - i.) _____
 - ii.) _____
 - iii.) _____
 - iv.) _____
6. Explain the following:
 - a) Summer solstice _____
 - b) Winter solstice _____
 - c) Equinox _____
7. List five basins and the country where they are found.
 - i.) _____
 - ii.) _____
 - iii.) _____
 - iv.) _____
 - v.) _____
8. Name two lakes in Africa which were formed through down warping.

9. By use of a diagram, show the major rivers found in Africa (draw a map of Africa). (10 marks)

10. By use of a well labelled diagram, show the mountain vegetation zones.

11. The suitable method of fishing in the deep sea is _____

12. Write down four means of electronic media used in Eastern Africa.

i.) _____

iii.) _____

ii.) _____

iv.) _____

13. Motor vehicle repair in a garage fall under _____ Industry.

14. List five examples of service Industries.

i.) _____

iv.) _____

ii.) _____

v.) _____

iii.) _____

15. Name three non-food processing Industry.

i.) _____

ii.) _____

iii.) _____

16. The main benefit of tourism is that it is a source of _____

17. Describe the Administrative Structure of the Baganda Kingdom (use arrows). (5 marks)

List eight duties of Ntemi.

i.) _____

ii.) _____

iii.) _____

iv.) _____

v.) _____

vi.) _____

vii.) _____

viii.) _____

18. Name three explorers who came to E. Africa.

- i.) _____
- ii.) _____
- iii.) _____

19. _____ was both a missionary and an explorer.

20. Name the country which was occupied by three powers (European). _____

21. List three main reasons for Mutesa's collaboration.

- i.) _____
- ii.) _____
- iii.) _____

22. Write down three achievements of Haile Selassie.

- i.) _____
- ii.) _____
- iii.) _____

23. List five problems facing **IGAD**.

- i.) _____
- ii.) _____
- iii.) _____
- iv.) _____
- v.) _____

24. List five functions of the independence Electoral and Boundaries Commission.

- i.) _____
- ii.) _____
- iii.) _____
- iv.) _____
- v.) _____

25. Write down three characteristics of Mediterranean Climate.

- i.) _____
- ii.) _____
- iii.) _____

26. Write down five characteristics of Equatorial Climate.

- i.) _____
- ii.) _____
- iii.) _____
- iv.) _____
- v.) _____

27. The side of the mountain which is sheltered from the moisture-carrying wind is called?

APRIL HOLIDAY C.R.E. ASSIGNMENT – CLASS SEVEN

NB: your work should be Neat.

1. God created Adam and Eve mainly to _____
2. Highlight three activities that showed Abraham had faith in God.
 - a) _____
 - b) _____
 - c) _____
3. God led the Israelites through the wilderness by use of _____ and _____
4. The Israelites celebrated Passover mainly to remember _____
5. The men who were talented in artistic work during Exodus were _____ and _____
6. Which commandment teaches about respect for marriage?

7. Highlight four major achievements of King David.
 - i.) _____ iii.) _____
 - ii.) _____ iv.) _____
8. The **main** reason why Naboth refused to sell his land to King Ahab was?

9. Prophet Elisha promised the Shunemite woman a son because? _____

10. The prophet who foretold that the Messiah would be born in the town of David was?

11. Write down the prophesy of prophetess Anna during the dedication of Jesus.

12. The lesson Christians learn from the incident when Jesus was left by His parents in the Temple is _____
13. “Why do you look at the speck in your brother’s eye, but pay no attention to the log in your own eye?” This phrase teaches Christians? _____

14. The main teaching of the sermon on the Mount is? _____

15. The first disciples to be called by Jesus were _____ and _____
16. The last words Jesus said on the cross according to Gospel of John were? _____

17. The message of John the Baptist to the soldiers was?
 - a) _____
 - b) _____
 - c) _____
18. Paul was called mainly to spread Good News to the _____
19. The main value taught to children in T.A.S. was _____
20. The rite of passage found in Christianity but NOT in Traditional African Society is?

21. Which value is both a gift and a fruit? _____
22. The main reason for marriage in T.A.S. is _____

23. The main work of the seven deacons was to? _____

24. The disciples who were sent to prepare a room for last supper were _____ and _____

25. Another name for Holy Communion is _____
26. Outline the life skills learnt in C.R.E.
- a) _____ d) _____
- b) _____ e) _____
- c) _____
27. Which of the above life skills was used by Joseph to overcome temptations from Potiphar's wife?
- _____
28. 'I am a prophet. God had promised that I would not die before I saw the Messiah. I received baby Jesus in the Temple. Who am I?' _____
- _____
29. Highlight two schools for the blind in Kenya.
- _____
30. How can Christians help the visually impaired?
- a) _____
- b) _____
- c) _____

From Tr. Mbogo